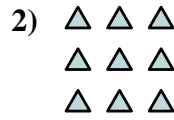





Écrivez chaque tableau sous la forme d'un problème d'addition et résolvez-le.

Réponses



Ex. 2+2=4

1. _____

2. _____

3. _____

4. _____

5. _____

6. _____

7. _____

8. _____

9. _____

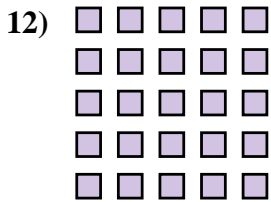

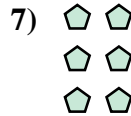

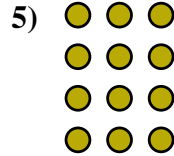
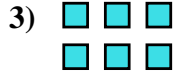
10. _____

11. _____

12. _____

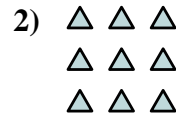

13. _____

14. _____





Écrivez chaque tableau sous la forme d'un problème d'addition et résolvez-le.



Ex. 2+2=4

1. 2+2+2+2+2=10

2. 3+3+3=9

3. 3+3=6

4. 4+4+4=12

5. 3+3+3+3=12

6. 4+4+4+4+4=20

7. 2+2+2=6

8. 3+3+3+3+3=15

9. 5+5=10

10. 2+2+2+2=8

11. 5+5+5=15

12. 5+5+5+5+5=25

13. 4+4=8

14. 4+4+4+4=16

