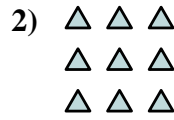





Écrivez chaque tableau sous la forme d'un problème d'addition et résolvez-le.

**Réponses**



Ex. 2+2=4

1. \_\_\_\_\_

2. \_\_\_\_\_

3. \_\_\_\_\_

4. \_\_\_\_\_

5. \_\_\_\_\_

6. \_\_\_\_\_

7. \_\_\_\_\_

8. \_\_\_\_\_

9. \_\_\_\_\_

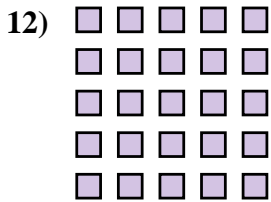

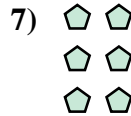

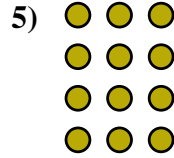
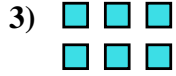
10. \_\_\_\_\_

11. \_\_\_\_\_

12. \_\_\_\_\_

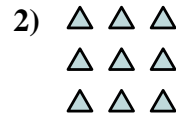

13. \_\_\_\_\_

14. \_\_\_\_\_





Écrivez chaque tableau sous la forme d'un problème d'addition et résolvez-le.



Ex. 2+2=4

1. 2+2+2+2+2=10

2. 3+3+3=9

3. 3+3=6

4. 4+4+4=12

5. 3+3+3+3=12

6. 4+4+4+4+4=20

7. 2+2+2=6

8. 3+3+3+3+3=15

9. 5+5=10

10. 2+2+2+2=8

11. 5+5+5=15

12. 5+5+5+5+5=25

13. 4+4=8

14. 4+4+4+4=16

