




Écrivez chaque tableau sous la forme d'un problème d'addition et résolvez-le.



Réponses

Ex. 3+3=6

1. _____

2. _____

3. _____

4. _____

5. _____

6. _____

7. _____

8. _____

9. _____

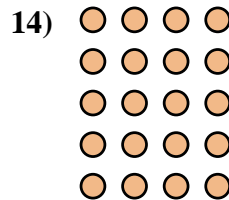
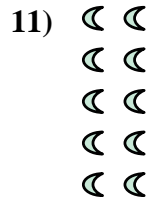


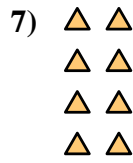
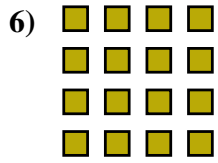
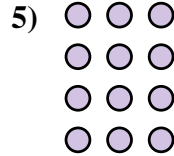

10. _____

11. _____

12. _____


13. _____

14. _____

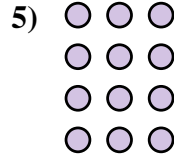





Écrivez chaque tableau sous la forme d'un problème d'addition et résolvez-le.



Ex. 3+3=6



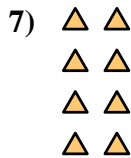
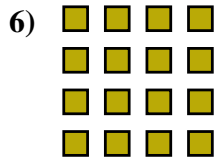
1. 5+5+5=15

2. 3+3+3=9

3. 5+5=10

4. 2+2+2=6

5. 3+3+3+3=12

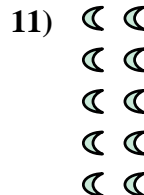




6. 4+4+4+4=16

7. 2+2+2+2=8

8. 4+4+4=12

9. 5+5+5+5+5=25

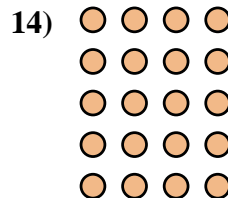


10. 5+5+5+5=20

11. 2+2+2+2+2=10

12. 4+4=8

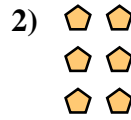
13. 2+2=4



14. 4+4+4+4+4=20



Écrivez chaque tableau sous la forme d'un problème d'addition et résolvez-le.



Réponses

Ex. 2+2=4

1. _____

2. _____

3. _____

4. _____

5. _____

6. _____

7. _____

8. _____

9. _____

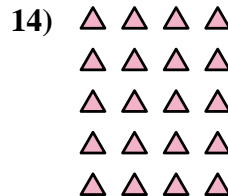
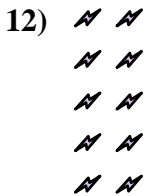
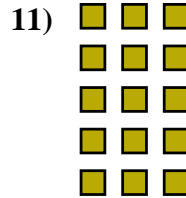
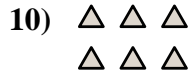
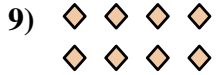



10. _____

11. _____

12. _____

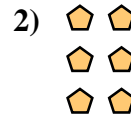
13. _____

14. _____








Écrivez chaque tableau sous la forme d'un problème d'addition et résolvez-le.



Ex. 2+2=4




1. 3+3+3=9

2. 2+2+2=6

3. 3+3+3+3=12

4. 4+4+4=12

5. 2+2+2+2=8

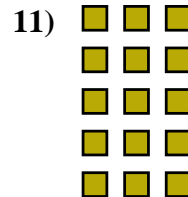
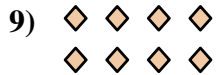


6. 4+4+4+4=16

7. 5+5+5=15

8. 5+5+5+5=20

9. 4+4=8




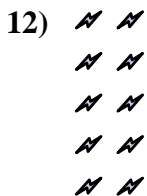
10. 3+3=6

11. 3+3+3+3+3=15

12. 2+2+2+2+2=10

13. 5+5=10

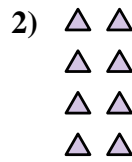
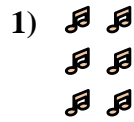
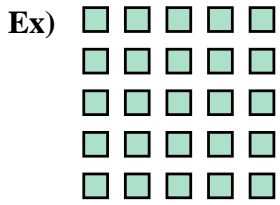
14. 4+4+4+4+4=20





Écrivez chaque tableau sous la forme d'un problème d'addition et résolvez-le.

Réponses



Ex. 5+5+5+5+5=25

1. _____

2. _____

3. _____

4. _____

5. _____

6. _____

7. _____

8. _____

9. _____

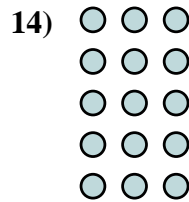
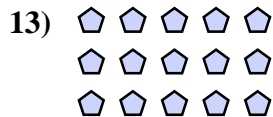
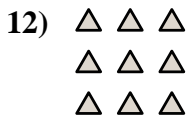
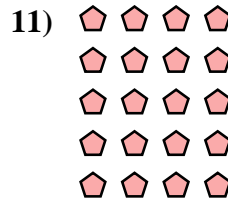
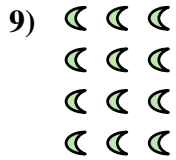


10. _____

11. _____

12. _____

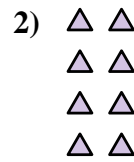
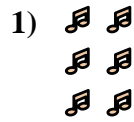
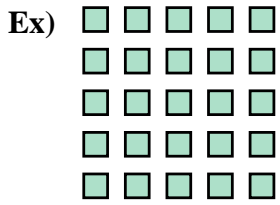
13. _____

14. _____





Écrivez chaque tableau sous la forme d'un problème d'addition et résolvez-le.

**Réponses**

Ex. $5+5+5+5+5=25$

1. $2+2+2=6$

2. $2+2+2+2=8$

3. $3+3=6$

4. $5+5+5+5=20$

5. $2+2+2+2+2=10$

6. $2+2=4$

7. $4+4+4=12$

8. $5+5=10$

9. $3+3+3+3=12$

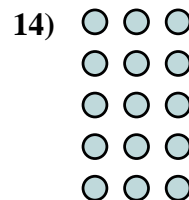
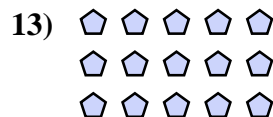
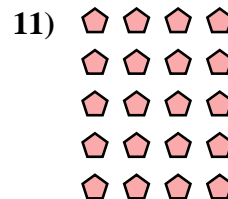
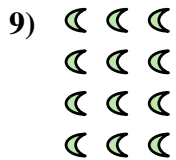


10. $4+4+4+4=16$

11. $4+4+4+4+4=20$

12. $3+3+3=9$

13. $5+5+5=15$

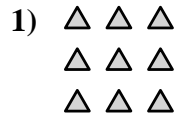
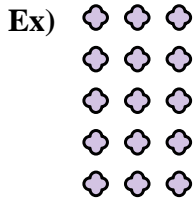
14. $3+3+3+3+3=15$





Écrivez chaque tableau sous la forme d'un problème d'addition et résolvez-le.

Réponses

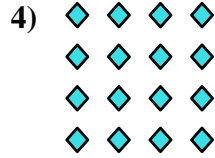



Ex. 3+3+3+3+3=15

1. _____

2. _____

3. _____




4. _____

5. _____

6. _____

7. _____


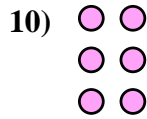
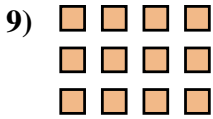


8. _____

9. _____

10. _____

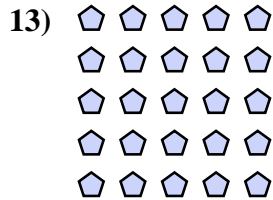
11. _____



12. _____

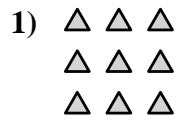
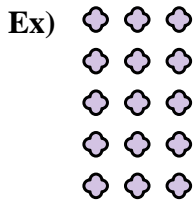
13. _____

14. _____





Écrivez chaque tableau sous la forme d'un problème d'addition et résolvez-le.



Ex. $3+3+3+3+3=15$

1. $3+3+3=9$

2. $3+3=6$

3. $2+2+2+2=8$

4. $4+4+4+4=16$

5. $5+5=10$

6. $4+4=8$

7. $3+3+3+3=12$

8. $4+4+4+4+4=20$

9. $4+4+4=12$

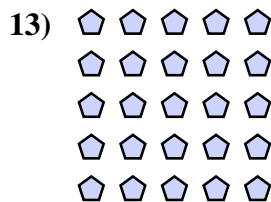

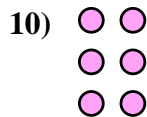
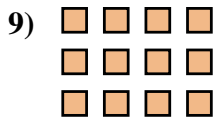

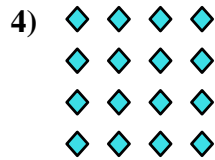

10. $2+2+2=6$

11. $5+5+5=15$

12. $5+5+5+5=20$

13. $5+5+5+5+5=25$

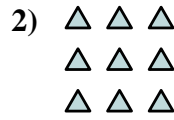

14. $2+2=4$





Écrivez chaque tableau sous la forme d'un problème d'addition et résolvez-le.

Réponses

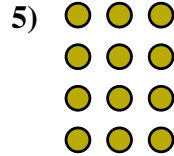
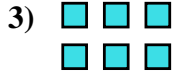


Ex. 2+2=4

1. _____

2. _____

3. _____

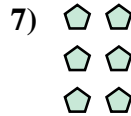



4. _____

5. _____

6. _____

7. _____




8. _____

9. _____

10. _____

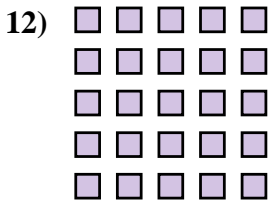
11. _____



12. _____

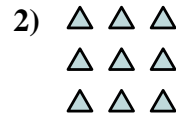

13. _____

14. _____





Écrivez chaque tableau sous la forme d'un problème d'addition et résolvez-le.



Ex. 2+2=4

1. 2+2+2+2+2=10

2. 3+3+3=9

3. 3+3=6

4. 4+4+4=12

5. 3+3+3+3=12

6. 4+4+4+4+4=20

7. 2+2+2=6

8. 3+3+3+3+3=15

9. 5+5=10


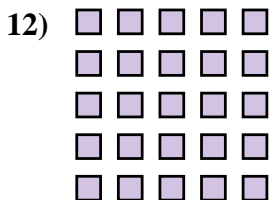

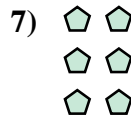

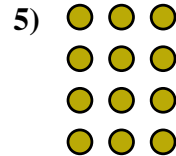
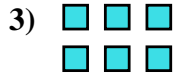
10. 2+2+2+2=8

11. 5+5+5=15

12. 5+5+5+5+5=25

13. 4+4=8


14. 4+4+4+4=16





Écrivez chaque tableau sous la forme d'un problème d'addition et résolvez-le.

Réponses



Ex. 4+4+4+4=16

1. _____

2. _____

3. _____

4. _____

5. _____

6. _____

7. _____

8. _____

9. _____


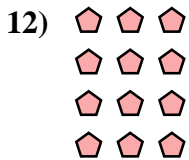

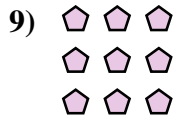
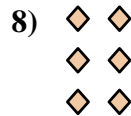

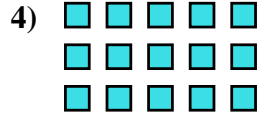
10. _____

11. _____

12. _____


13. _____

14. _____





Écrivez chaque tableau sous la forme d'un problème d'addition et résolvez-le.



Ex. $4+4+4+4=16$

1. $4+4=8$

2. $2+2+2+2+2=10$

3. $4+4+4=12$

4. $5+5+5=15$

5. $3+3=6$

6. $5+5+5+5=20$

7. $3+3+3+3+3=15$

8. $2+2+2=6$

9. $3+3+3=9$


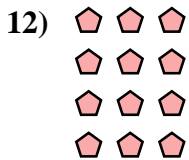


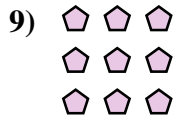
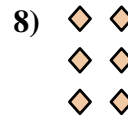

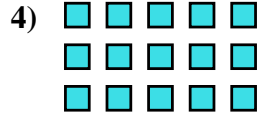
10. $5+5+5+5+5=25$

11. $4+4+4+4+4=20$

12. $3+3+3+3=12$

13. $2+2=4$


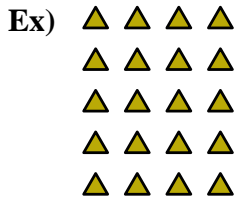
14. $5+5=10$





Écrivez chaque tableau sous la forme d'un problème d'addition et résolvez-le.

Réponses

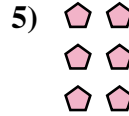


Ex. 4+4+4+4+4=20

1. _____

2. _____

3. _____

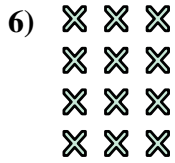


4. _____

5. _____

6. _____

7. _____

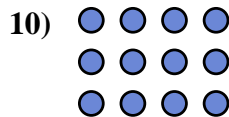



8. _____

9. _____

10. _____

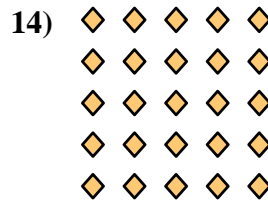
11. _____



12. _____


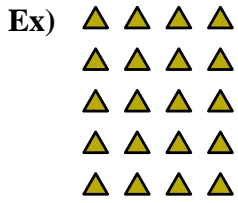
13. _____

14. _____





Écrivez chaque tableau sous la forme d'un problème d'addition et résolvez-le.



Ex. $4+4+4+4+4=20$

1. $2+2+2+2=8$

2. $2+2=4$

3. $3+3+3+3+3=15$

4. $4+4+4+4=16$

5. $2+2+2=6$

6. $3+3+3+3=12$

7. $2+2+2+2+2=10$

8. $3+3+3=9$

9. $3+3=6$

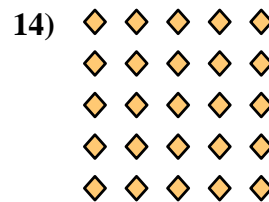
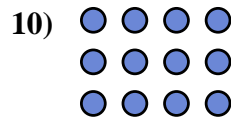


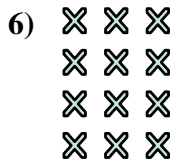
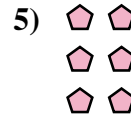
10. $4+4+4=12$

11. $5+5=10$

12. $4+4=8$

13. $5+5+5=15$

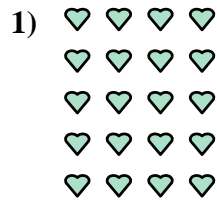

14. $5+5+5+5+5=25$





Écrivez chaque tableau sous la forme d'un problème d'addition et résolvez-le.

Réponses



Ex. $4+4+4+4=16$

1. _____

2. _____

3. _____

4. _____

5. _____

6. _____

7. _____

8. _____

9. _____



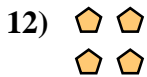

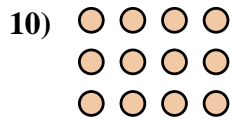
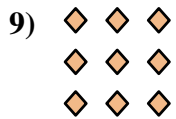
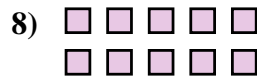
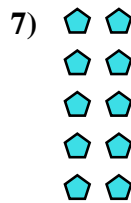
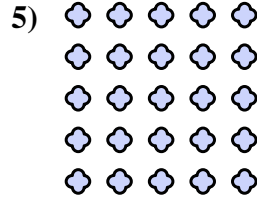

10. _____

11. _____

12. _____

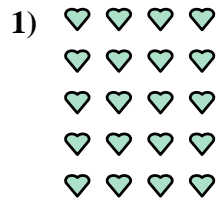

13. _____

14. _____





Écrivez chaque tableau sous la forme d'un problème d'addition et résolvez-le.

Réponses

Ex. $4+4+4+4=16$

1. $4+4+4+4+4=20$

2. $5+5+5+5=20$

3. $3+3=6$

4. $3+3+3+3=12$

5. $5+5+5+5+5=25$

6. $5+5+5=15$

7. $2+2+2+2+2=10$

8. $5+5=10$

9. $3+3+3=9$


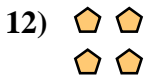

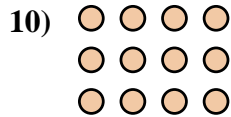
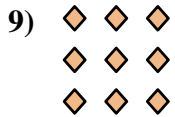
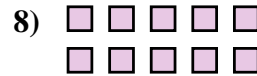
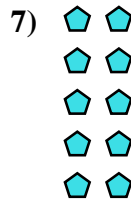
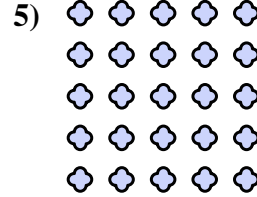
10. $4+4+4=12$

11. $2+2+2+2=8$

12. $2+2=4$

13. $2+2+2=6$

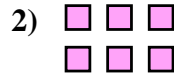
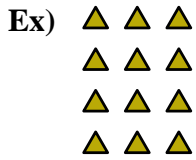
14. $4+4=8$





Écrivez chaque tableau sous la forme d'un problème d'addition et résolvez-le.

Réponses



Ex. 3+3+3+3=12

1. _____

2. _____

3. _____

4. _____

5. _____

6. _____

7. _____

8. _____

9. _____




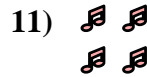
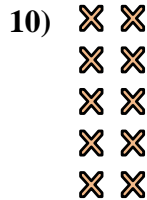
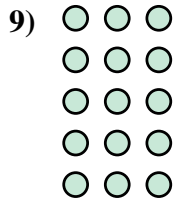
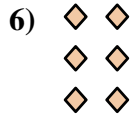
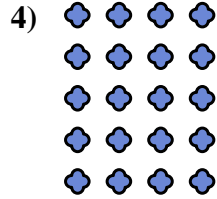
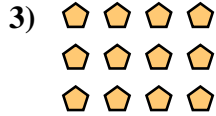
10. _____

11. _____

12. _____

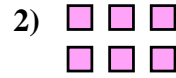
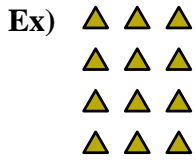
13. _____

14. _____





Écrivez chaque tableau sous la forme d'un problème d'addition et résolvez-le.

**Réponses**

Ex. $3+3+3+3=12$

1. $3+3+3=9$

2. $3+3=6$

3. $4+4+4=12$

4. $4+4+4+4+4=20$

5. $5+5=10$

6. $2+2+2=6$

7. $4+4=8$

8. $4+4+4+4=16$

9. $3+3+3+3+3=15$




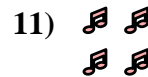



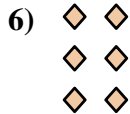
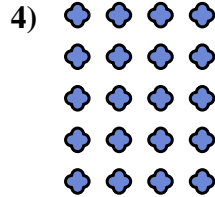

10. $2+2+2+2+2=10$

11. $2+2=4$

12. $5+5+5+5=20$

13. $5+5+5=15$


14. $2+2+2+2=8$





Écrivez chaque tableau sous la forme d'un problème d'addition et résolvez-le.

Réponses

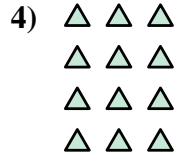



Ex. 4+4+4=12

1. _____

2. _____

3. _____

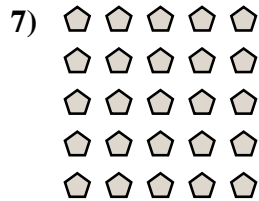


4. _____

5. _____

6. _____

7. _____

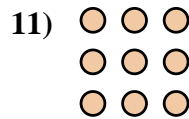

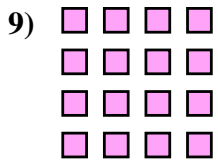


8. _____

9. _____

10. _____

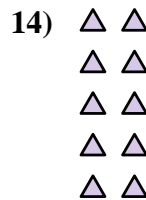
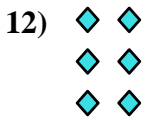
11. _____



12. _____


13. _____

14. _____





Écrivez chaque tableau sous la forme d'un problème d'addition et résolvez-le.



Ex. 4+4+4=12

1. 5+5=10

2. 5+5+5=15

3. 5+5+5+5=20

4. 3+3+3+3=12

5. 3+3+3+3+3=15

6. 3+3=6

7. 5+5+5+5+5=25

8. 2+2=4

9. 4+4+4+4=16

10. 2+2+2+2=8

11. 3+3+3=9

12. 2+2+2=6

13. 4+4=8

14. 2+2+2+2+2=10

