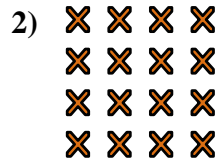





Écrivez chaque tableau sous la forme d'un problème d'addition et résolvez-le.

Réponses



Ex. $3+3+3+3+3=15$

1. _____

2. _____

3. _____

4. _____

5. _____

6. _____

7. _____

8. _____

9. _____

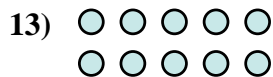
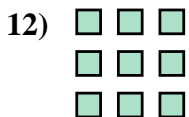

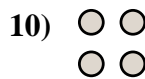
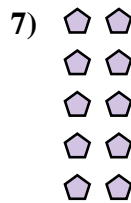
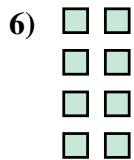
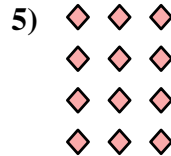

10. _____

11. _____

12. _____



13. _____

14. _____





Écrivez chaque tableau sous la forme d'un problème d'addition et résolvez-le.



Ex. $3+3+3+3+3=15$

1. $2+2+2=6$

2. $4+4+4+4=16$

3. $3+3=6$

4. $4+4+4+4+4=20$

5. $3+3+3+3=12$

6. $2+2+2+2=8$

7. $2+2+2+2+2=10$

8. $5+5+5=15$

9. $5+5+5+5=20$

10. $2+2=4$

11. $5+5+5+5+5=25$

12. $3+3+3=9$

13. $5+5=10$

14. $4+4=8$

