





Utilisez les rectangles pour résoudre chaque problème.


1)  $11 \times 10 =$




2)  $17 \times 10 =$




3)  $10 \times 13 =$




4)  $10 \times 17 =$



5)  $10 \times 19 =$



6)  $10 \times 15 =$



**Réponses**

1. \_\_\_\_\_

2. \_\_\_\_\_

3. \_\_\_\_\_

4. \_\_\_\_\_

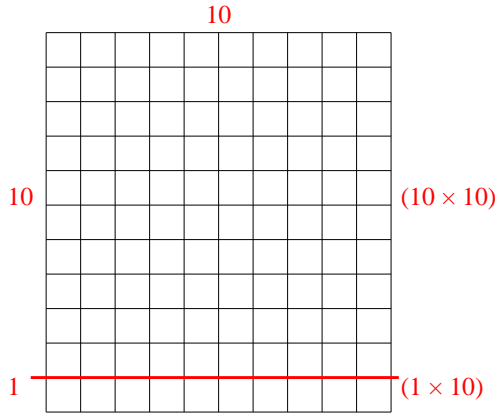
5. \_\_\_\_\_

6. \_\_\_\_\_

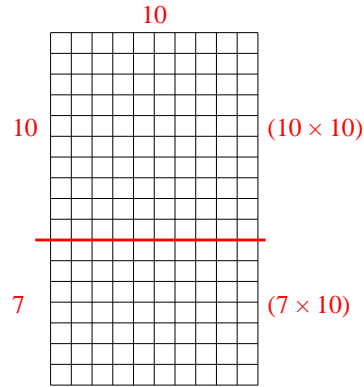


Utilisez les rectangles pour résoudre chaque problème.

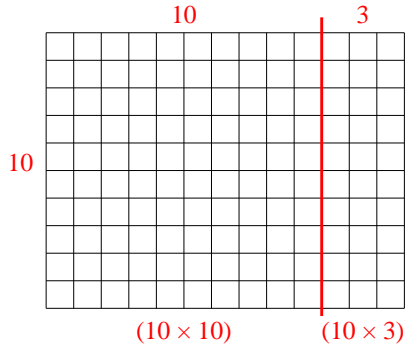
1)  $11 \times 10 =$



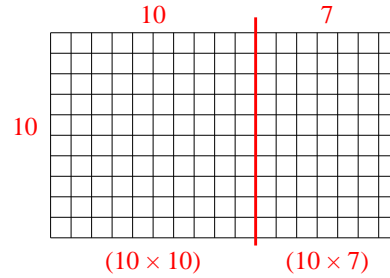
2)  $17 \times 10 =$



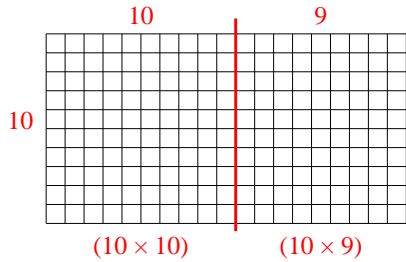
3)  $10 \times 13 =$



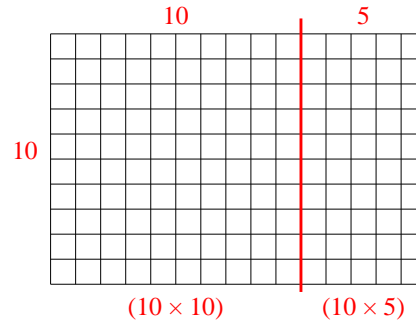
4)  $10 \times 17 =$



5)  $10 \times 19 =$



6)  $10 \times 15 =$



**Réponses**

1. **110**

2. **170**

3. **130**

4. **170**

5. **190**

6. **150**