





Utilisez les rectangles pour résoudre chaque problème.


1) $33 \times 20 =$




2) $22 \times 20 =$




3) $10 \times 13 =$




4) $15 \times 10 =$



5) $10 \times 14 =$



6) $12 \times 10 =$



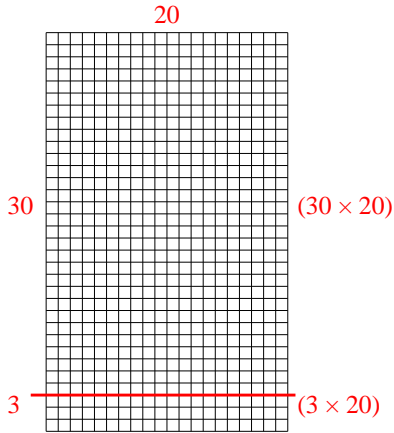
Réponses

- 1. _____
- 2. _____
- 3. _____
- 4. _____
- 5. _____
- 6. _____

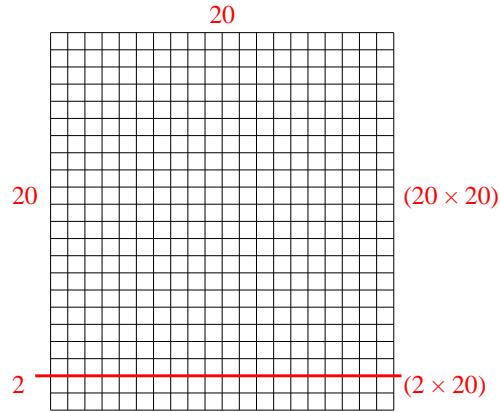


Utilisez les rectangles pour résoudre chaque problème.

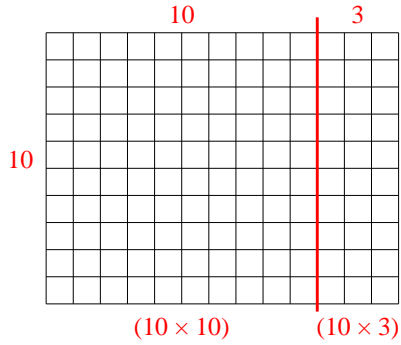
1) $33 \times 20 =$



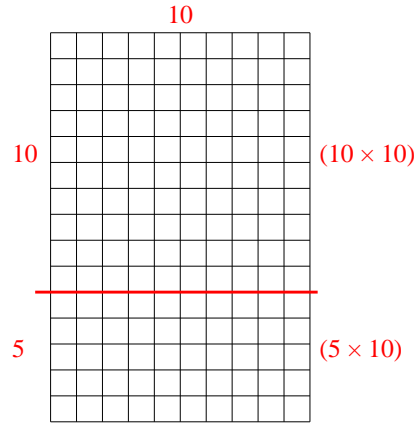
2) $22 \times 20 =$



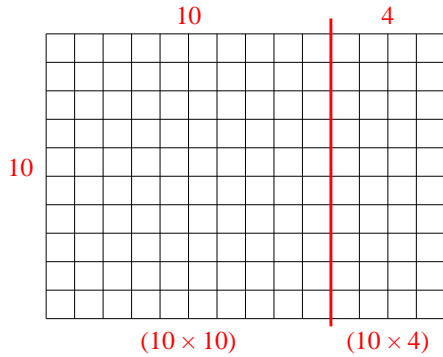
3) $10 \times 13 =$



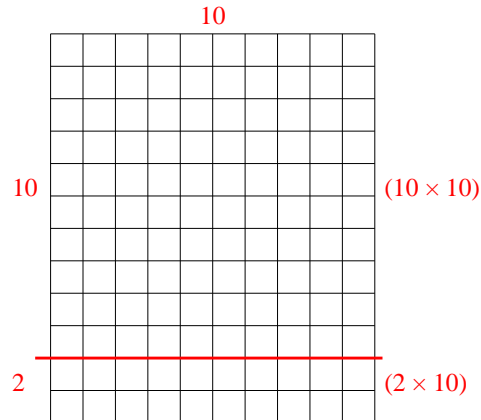
4) $15 \times 10 =$



5) $10 \times 14 =$



6) $12 \times 10 =$



Réponses

1. **660**

2. **440**

3. **130**

4. **150**

5. **140**

6. **120**