





Utilisez les rectangles pour résoudre chaque problème.


1)  $10 \times 13 =$




2)  $18 \times 10 =$




3)  $14 \times 10 =$




4)  $16 \times 10 =$



5)  $10 \times 15 =$



6)  $10 \times 14 =$



**Réponses**

1. \_\_\_\_\_

2. \_\_\_\_\_

3. \_\_\_\_\_

4. \_\_\_\_\_

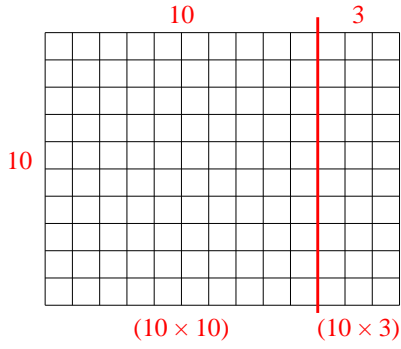
5. \_\_\_\_\_

6. \_\_\_\_\_

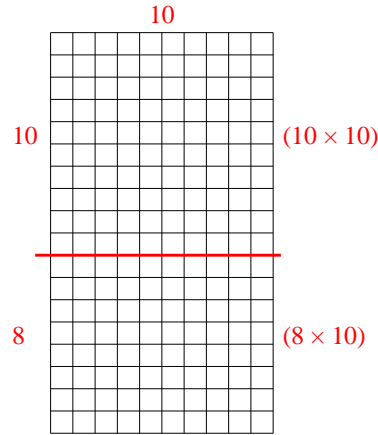


Utilisez les rectangles pour résoudre chaque problème.

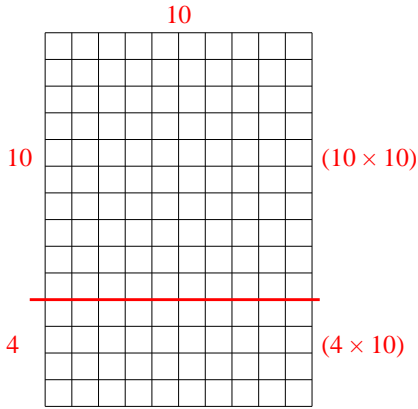
1)  $10 \times 13 =$



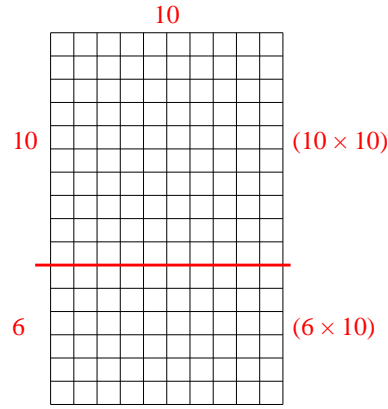
2)  $18 \times 10 =$



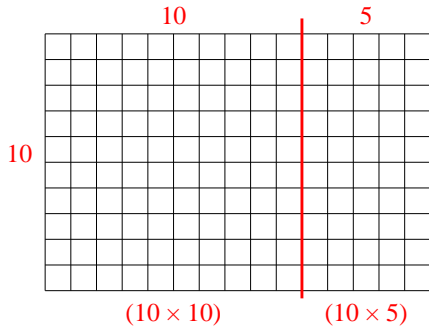
3)  $14 \times 10 =$



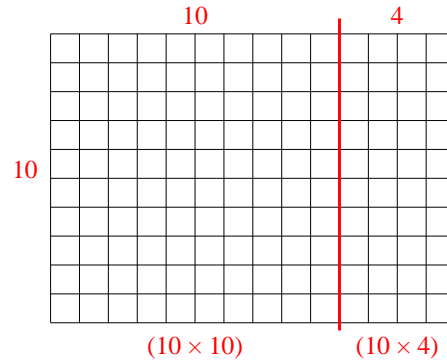
4)  $16 \times 10 =$



5)  $10 \times 15 =$



6)  $10 \times 14 =$



**Réponses**

1. 130

2. 180

3. 140

4. 160

5. 150

6. 140