





Utilisez les rectangles pour résoudre chaque problème.


1) $16 \times 10 =$




2) $10 \times 17 =$




3) $10 \times 15 =$




4) $18 \times 10 =$



5) $12 \times 10 =$



6) $19 \times 10 =$



Réponses

1. _____

2. _____

3. _____

4. _____

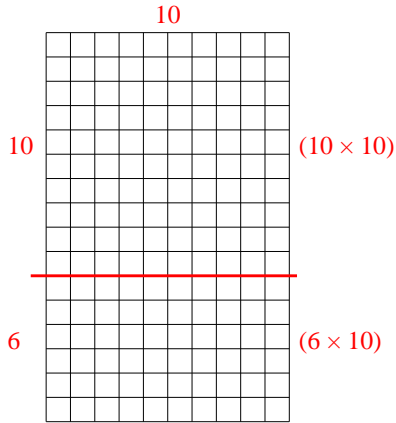
5. _____

6. _____

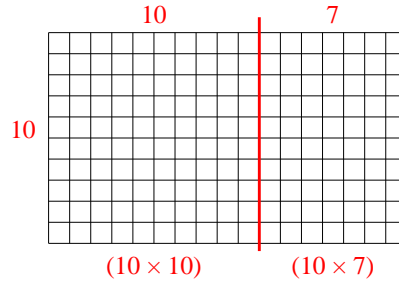


Utilisez les rectangles pour résoudre chaque problème.

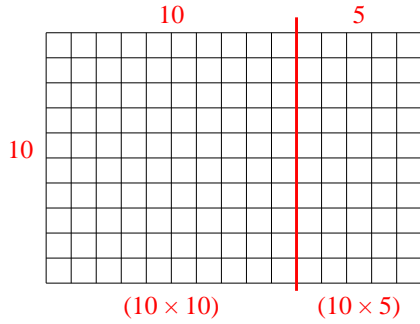
1) $16 \times 10 =$



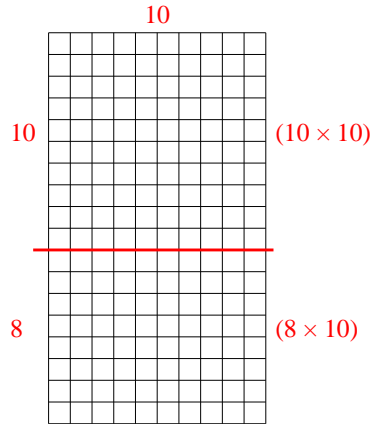
2) $10 \times 17 =$



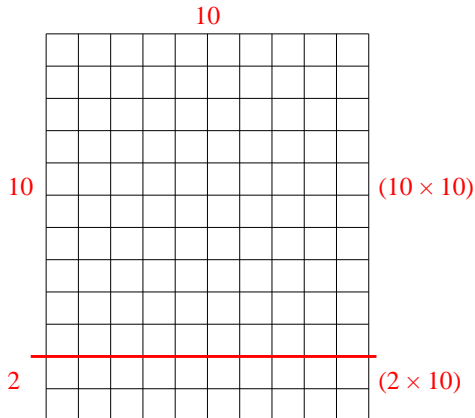
3) $10 \times 15 =$



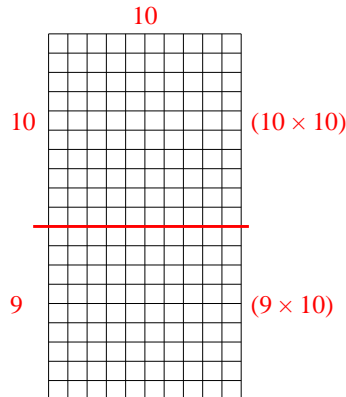
4) $18 \times 10 =$



5) $12 \times 10 =$



6) $19 \times 10 =$



Réponses

1. **160**

2. **170**

3. **150**

4. **180**

5. **120**

6. **190**