





Utilisez les rectangles pour résoudre chaque problème.


1) $11 \times 20 =$




2) $18 \times 10 =$




3) $10 \times 16 =$




4) $14 \times 10 =$



5) $12 \times 10 =$



6) $10 \times 12 =$



Réponses

1. _____

2. _____

3. _____

4. _____

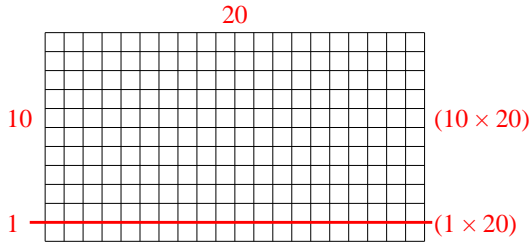
5. _____

6. _____

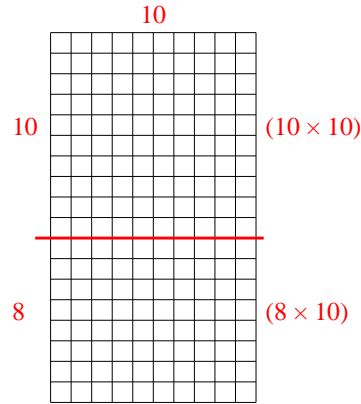


Utilisez les rectangles pour résoudre chaque problème.

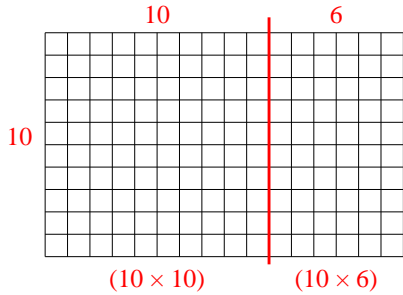
1) $11 \times 20 =$



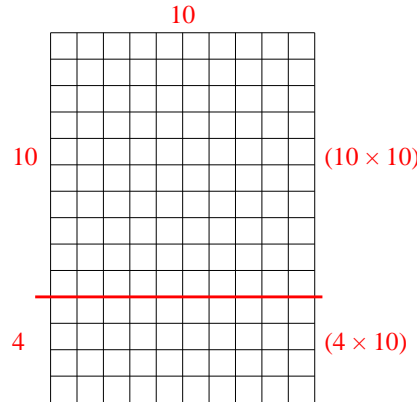
2) $18 \times 10 =$



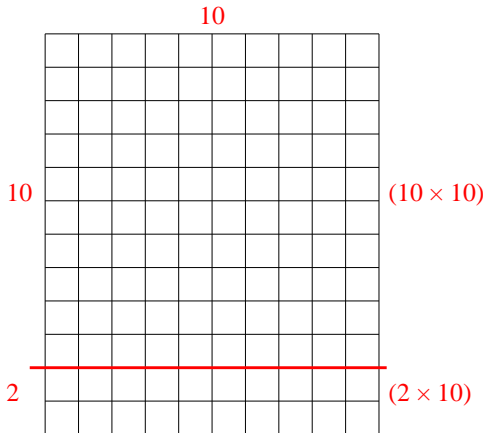
3) $10 \times 16 =$



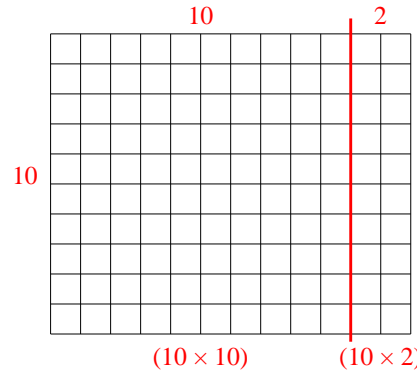
4) $14 \times 10 =$



5) $12 \times 10 =$



6) $10 \times 12 =$



Réponses

1. 220

2. 180

3. 160

4. 140

5. 120

6. 120