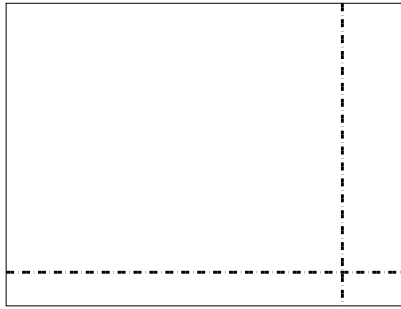


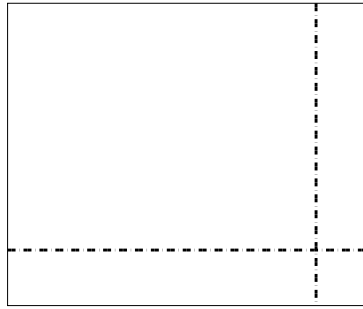


Utilisez les rectangles pour résoudre chaque problème.


1)  $45 \times 59 =$




2)  $49 \times 59 =$




3)  $39 \times 16 =$




4)  $37 \times 13 =$



5)  $37 \times 48 =$



6)  $37 \times 14 =$



**Réponses**

1. \_\_\_\_\_

2. \_\_\_\_\_

3. \_\_\_\_\_

4. \_\_\_\_\_

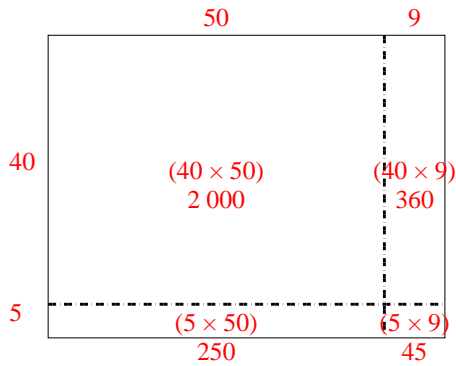
5. \_\_\_\_\_

6. \_\_\_\_\_

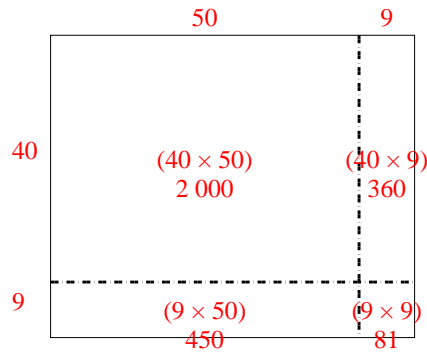


Utilisez les rectangles pour résoudre chaque problème.

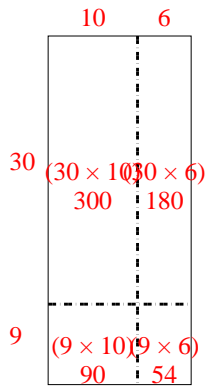
1)  $45 \times 59 =$



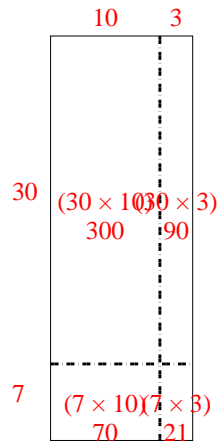
2)  $49 \times 59 =$



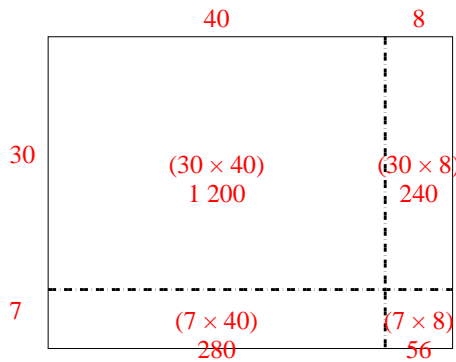
3)  $39 \times 16 =$



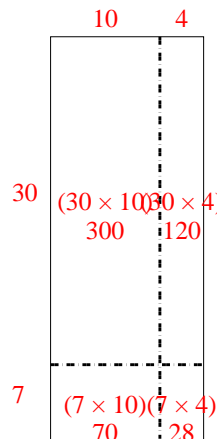
4)  $37 \times 13 =$



5)  $37 \times 48 =$



6)  $37 \times 14 =$



**Réponses**

1. **2 655**

2. **2 891**

3. **624**

4. **481**

5. **1 776**

6. **518**