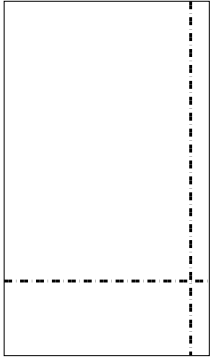




Utilisez les rectangles pour résoudre chaque problème.


1) $38 \times 22 =$




2) $36 \times 44 =$




3) $48 \times 45 =$



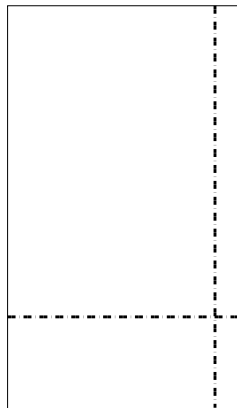
4) $49 \times 54 =$



5) $43 \times 29 =$



6) $39 \times 23 =$



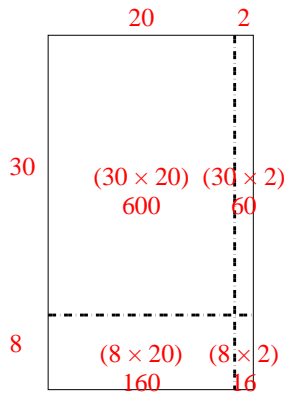
Réponses

- 1. _____
- 2. _____
- 3. _____
- 4. _____
- 5. _____
- 6. _____

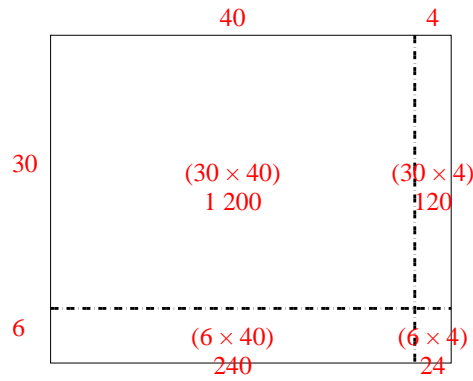


Utilisez les rectangles pour résoudre chaque problème.

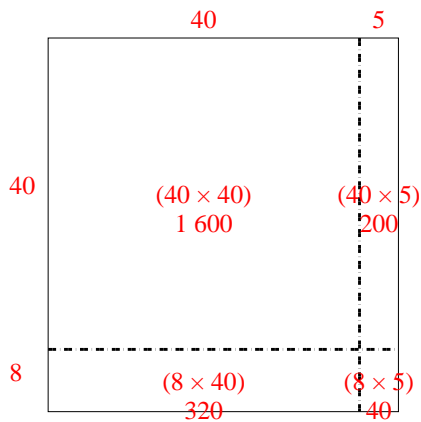
1) $38 \times 22 =$



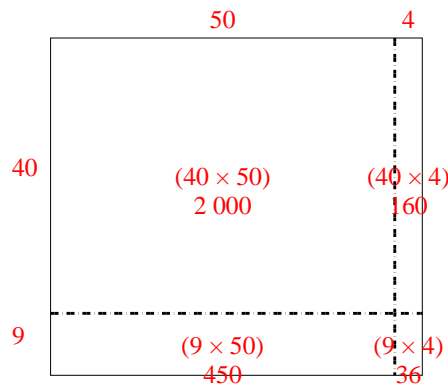
2) $36 \times 44 =$



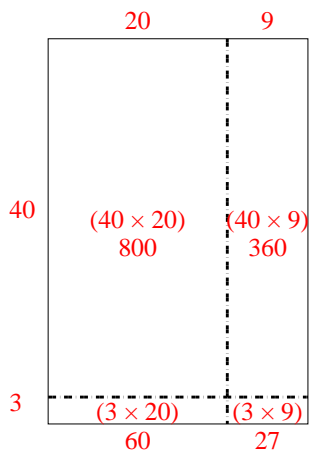
3) $48 \times 45 =$



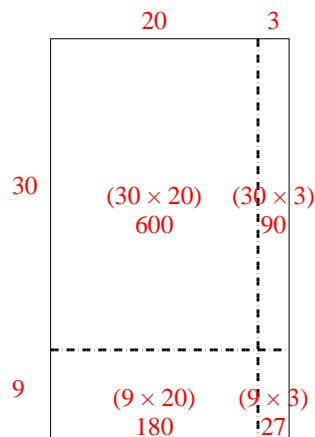
4) $49 \times 54 =$



5) $43 \times 29 =$



6) $39 \times 23 =$



Réponses

1. **836**

2. **1 584**

3. **2 160**

4. **2 646**

5. **1 247**

6. **897**