





Utilisez les rectangles pour résoudre chaque problème.

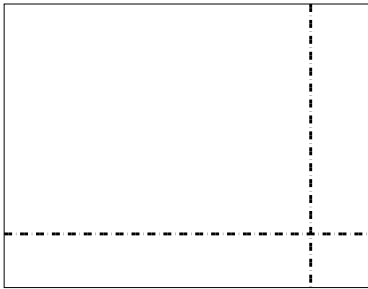
1) $36 \times 55 =$




2) $42 \times 26 =$




3) $37 \times 48 =$




4) $44 \times 59 =$



5) $46 \times 39 =$



6) $47 \times 59 =$



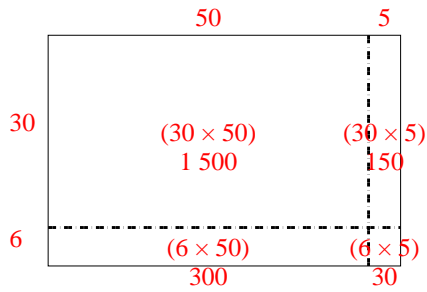
Réponses

- 1. _____
- 2. _____
- 3. _____
- 4. _____
- 5. _____
- 6. _____

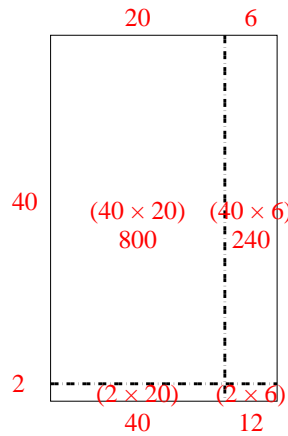


Utilisez les rectangles pour résoudre chaque problème.

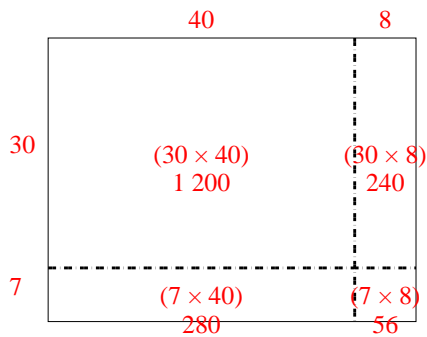
1) $36 \times 55 =$



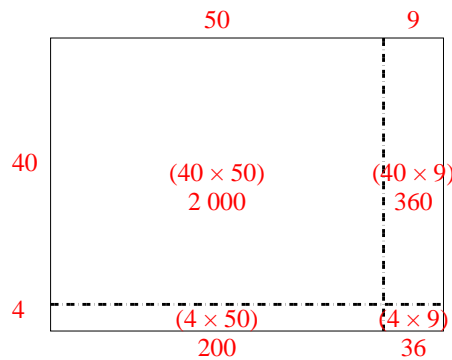
2) $42 \times 26 =$



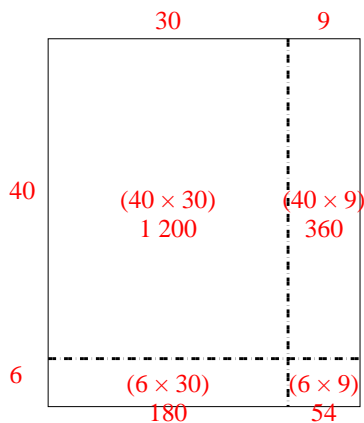
3) $37 \times 48 =$



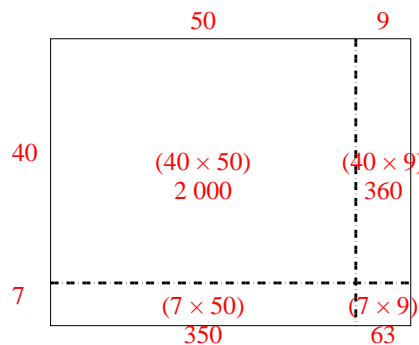
4) $44 \times 59 =$



5) $46 \times 39 =$



6) $47 \times 59 =$



Réponses

1. **1 980**

2. **1 092**

3. **1 776**

4. **2 596**

5. **1 794**

6. **2 773**