





Utilisez les rectangles pour résoudre chaque problème.

**Réponses**

1)  $36 \times 55 =$



2)  $42 \times 26 =$



1. \_\_\_\_\_

2. \_\_\_\_\_

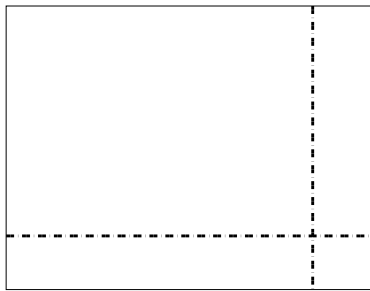
3. \_\_\_\_\_

4. \_\_\_\_\_


5. \_\_\_\_\_

6. \_\_\_\_\_


3)  $37 \times 48 =$




4)  $44 \times 59 =$



5)  $46 \times 39 =$



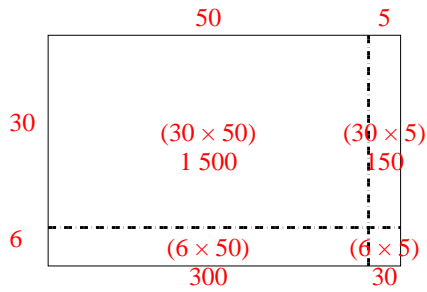
6)  $47 \times 59 =$



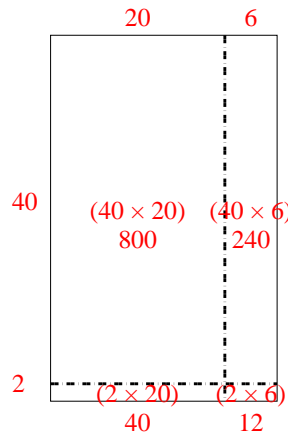


Utilisez les rectangles pour résoudre chaque problème.

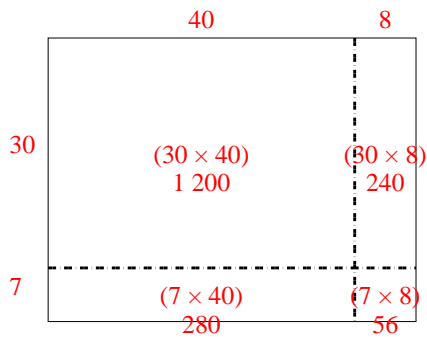
1)  $36 \times 55 =$



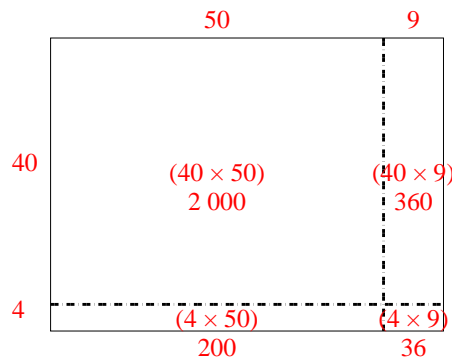
2)  $42 \times 26 =$



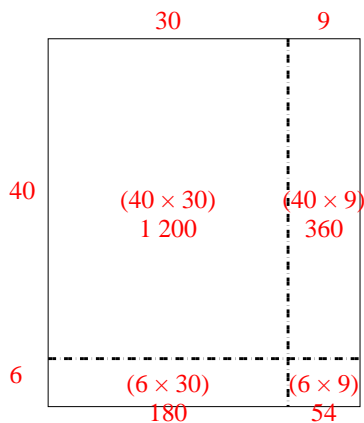
3)  $37 \times 48 =$



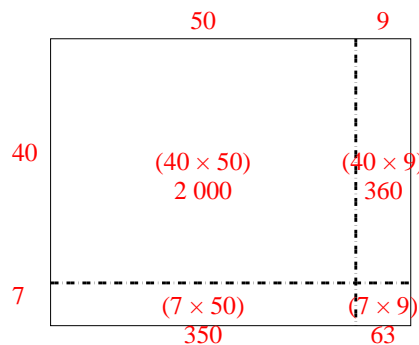
4)  $44 \times 59 =$



5)  $46 \times 39 =$



6)  $47 \times 59 =$



**Réponses**

1. **1 980**

2. **1 092**

3. **1 776**

4. **2 596**

5. **1 794**

6. **2 773**