





Utilisez les rectangles pour résoudre chaque problème.

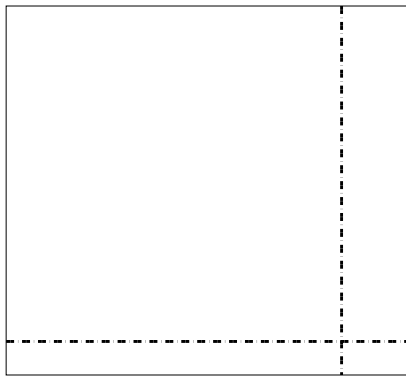
1) $48 \times 23 =$




2) $45 \times 44 =$



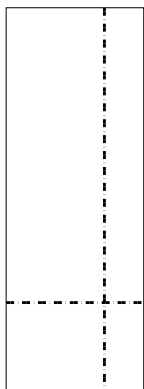
3) $33 \times 36 =$




4) $37 \times 24 =$



5) $39 \times 14 =$



6) $35 \times 12 =$



Réponses

1. _____

2. _____

3. _____

4. _____

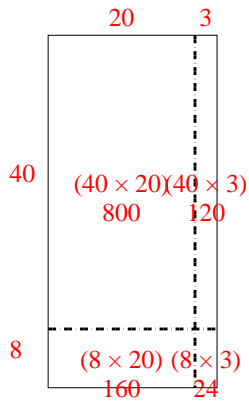
5. _____

6. _____

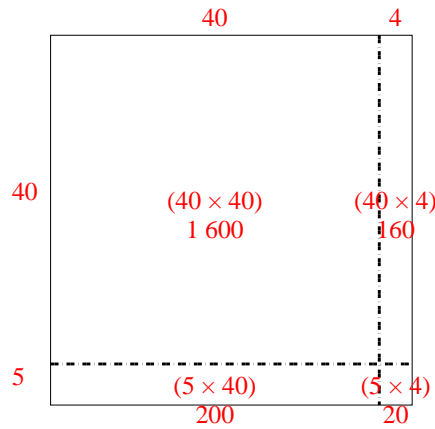


Utilisez les rectangles pour résoudre chaque problème.

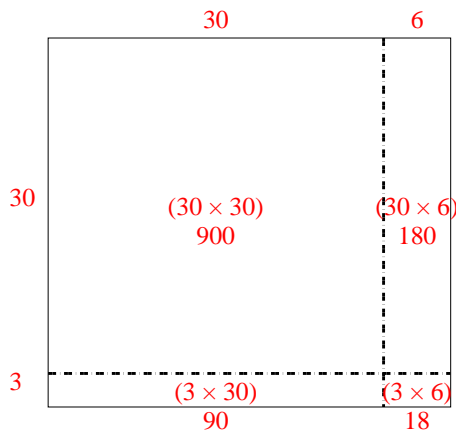
1) $48 \times 23 =$



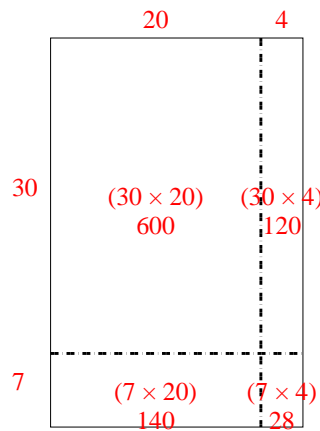
2) $45 \times 44 =$



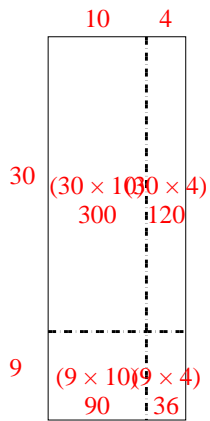
3) $33 \times 36 =$



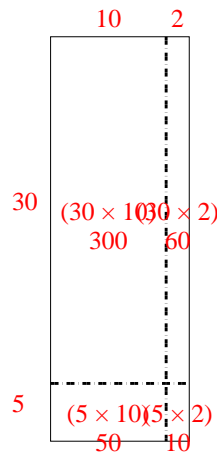
4) $37 \times 24 =$



5) $39 \times 14 =$



6) $35 \times 12 =$



Réponses

1. **1 104**

2. **1 980**

3. **1 188**

4. **888**

5. **546**

6. **420**