





Utilisez les rectangles pour résoudre chaque problème.


1) $66 \times 64 =$




2) $48 \times 63 =$




3) $32 \times 43 =$



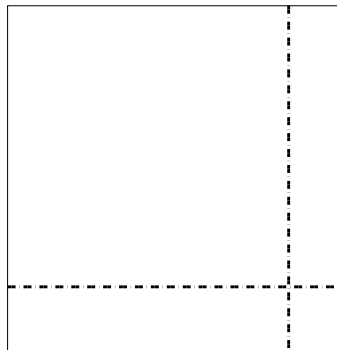
4) $35 \times 46 =$



5) $39 \times 27 =$



6) $37 \times 36 =$



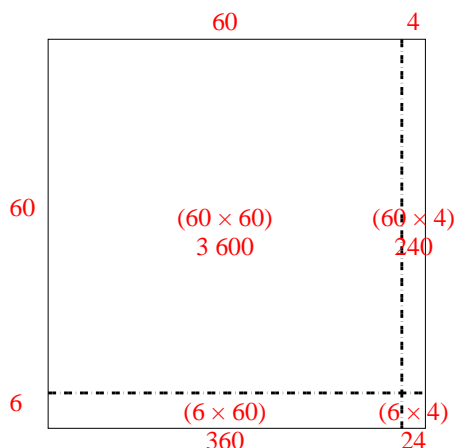
Réponses

- 1. _____
- 2. _____
- 3. _____
- 4. _____
- 5. _____
- 6. _____

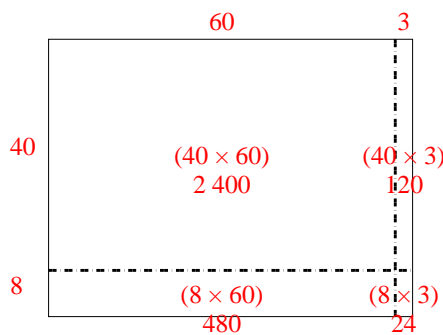


Utilisez les rectangles pour résoudre chaque problème.

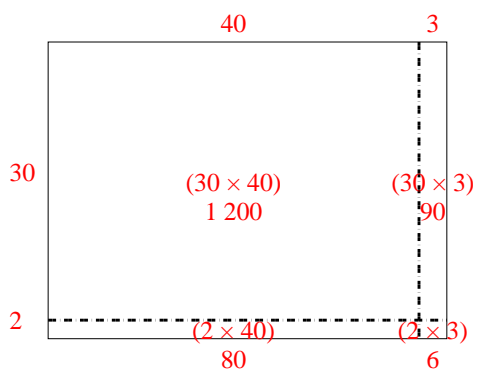
1) $66 \times 64 =$



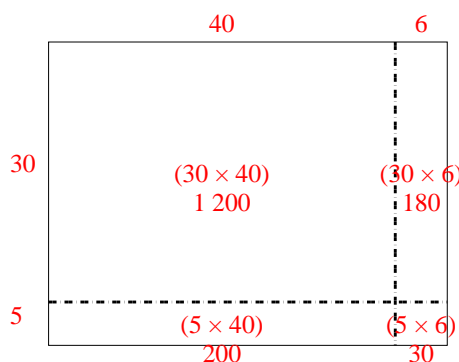
2) $48 \times 63 =$



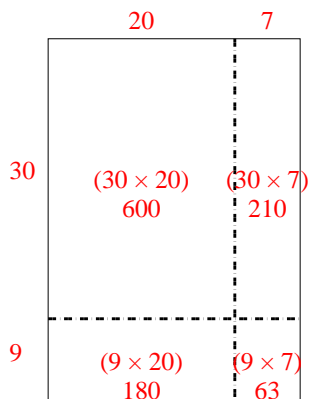
3) $32 \times 43 =$



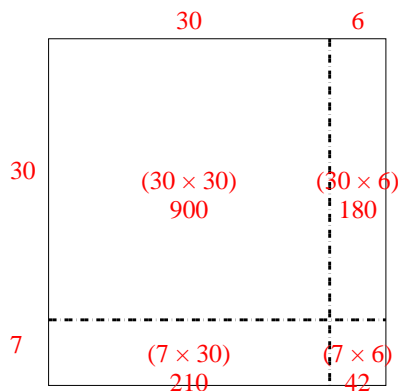
4) $35 \times 46 =$



5) $39 \times 27 =$



6) $37 \times 36 =$



Réponses

1. **4 224**

2. **3 024**

3. **1 376**

4. **1 610**

5. **1 053**

6. **1 332**