





Utilisez les rectangles pour résoudre chaque problème.


1) $68 \times 48 =$




2) $35 \times 16 =$



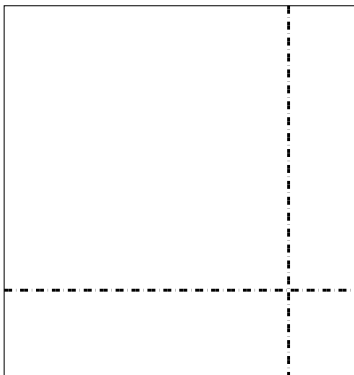
3) $32 \times 48 =$



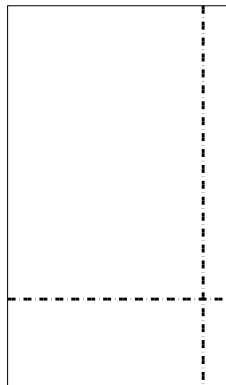
4) $36 \times 23 =$



5) $39 \times 37 =$



6) $39 \times 23 =$



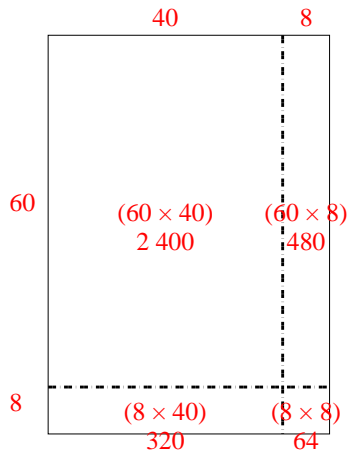
Réponses

- 1. _____
- 2. _____
- 3. _____
- 4. _____
- 5. _____
- 6. _____

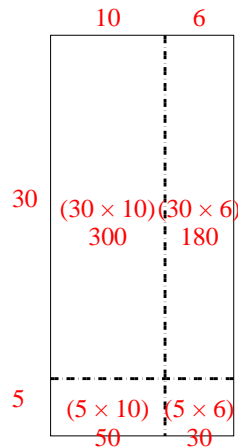


Utilisez les rectangles pour résoudre chaque problème.

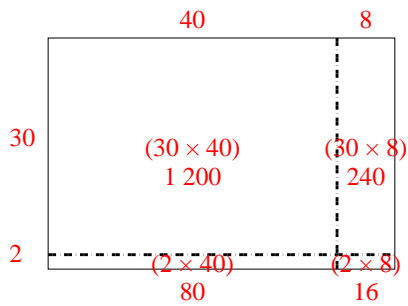
1) $68 \times 48 =$



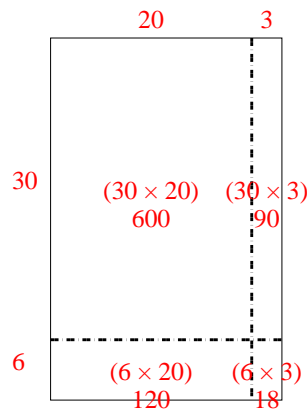
2) $35 \times 16 =$



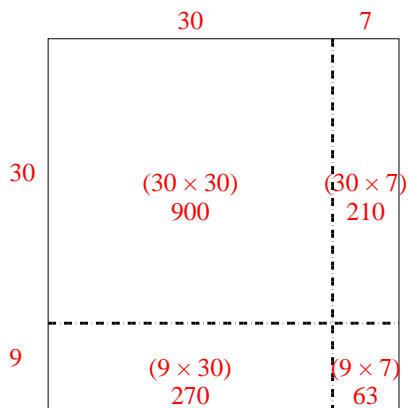
3) $32 \times 48 =$



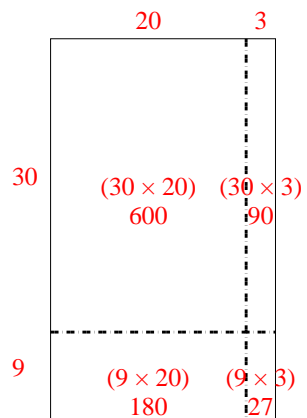
4) $36 \times 23 =$



5) $39 \times 37 =$



6) $39 \times 23 =$



Réponses

1. **3 264**

2. **560**

3. **1 536**

4. **828**

5. **1 443**

6. **897**