





Utilisez les rectangles pour résoudre chaque problème.


1)  $39 \times 30 =$




2)  $28 \times 20 =$




3)  $21 \times 20 =$




4)  $27 \times 20 =$



5)  $20 \times 28 =$



6)  $20 \times 21 =$



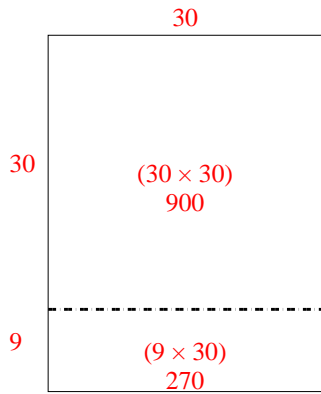
**Réponses**

- 1. \_\_\_\_\_
- 2. \_\_\_\_\_
- 3. \_\_\_\_\_
- 4. \_\_\_\_\_
- 5. \_\_\_\_\_
- 6. \_\_\_\_\_

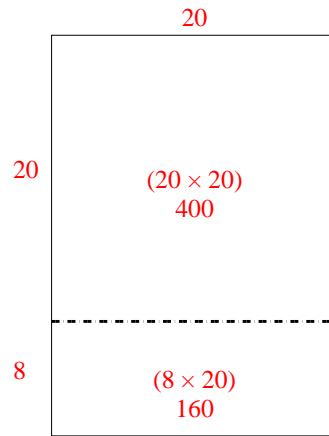


Utilisez les rectangles pour résoudre chaque problème.

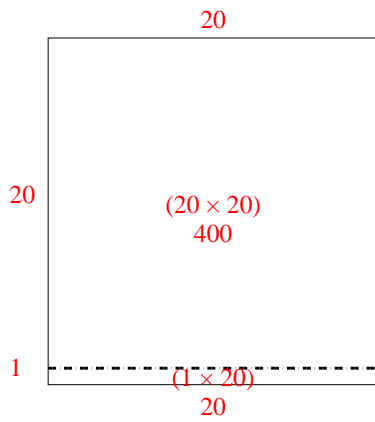
1)  $39 \times 30 =$



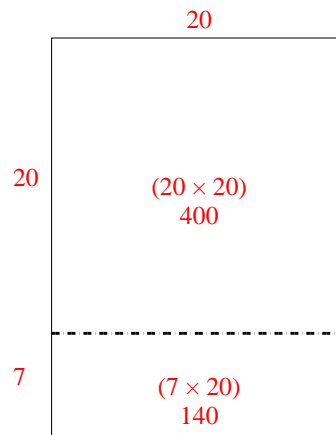
2)  $28 \times 20 =$



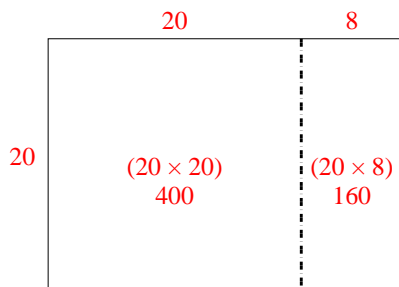
3)  $21 \times 20 =$



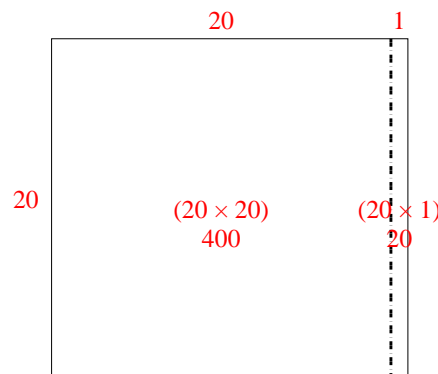
4)  $27 \times 20 =$



5)  $20 \times 28 =$



6)  $20 \times 21 =$



**Réponses**

1. 1 170

2. 560

3. 420

4. 540

5. 560

6. 420