





Utilisez les rectangles pour résoudre chaque problème.


1) $20 \times 23 =$




2) $28 \times 20 =$




3) $24 \times 20 =$




4) $26 \times 20 =$



5) $20 \times 25 =$



6) $20 \times 24 =$



Réponses

1. _____

2. _____

3. _____

4. _____

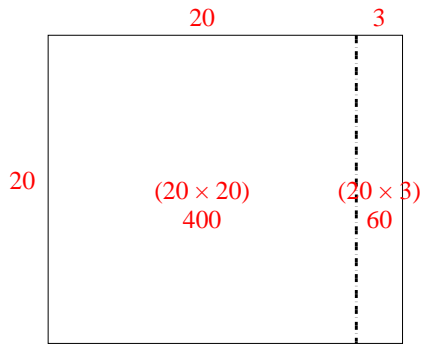
5. _____

6. _____

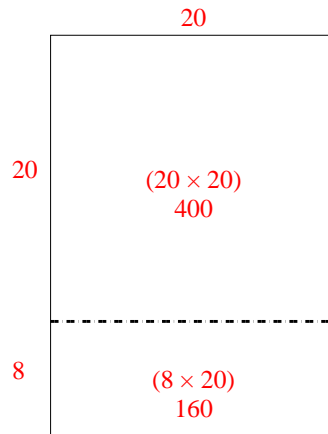


Utilisez les rectangles pour résoudre chaque problème.

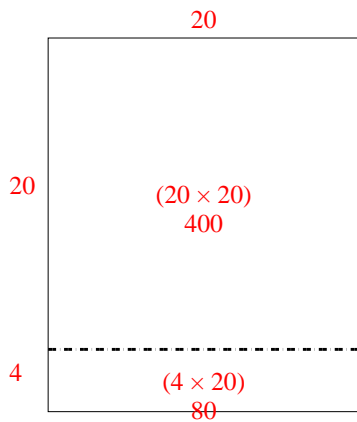
1) $20 \times 23 =$



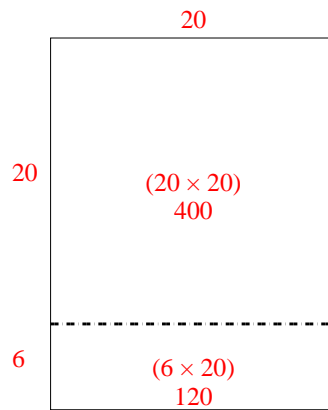
2) $28 \times 20 =$



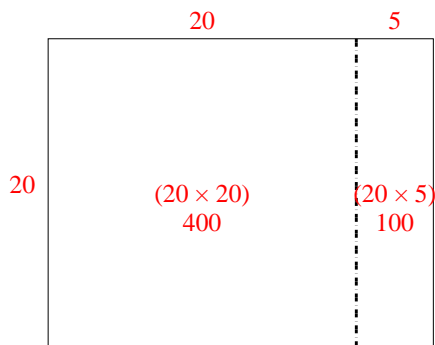
3) $24 \times 20 =$



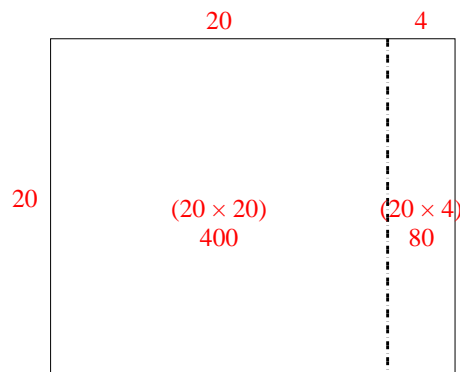
4) $26 \times 20 =$



5) $20 \times 25 =$



6) $20 \times 24 =$



Réponses

1. 460

2. 560

3. 480

4. 520

5. 500

6. 480