




Utilisez les rectangles pour résoudre chaque problème.


1)  $30 \times 32 =$




2)  $20 \times 23 =$




3)  $25 \times 20 =$




4)  $26 \times 20 =$



5)  $22 \times 20 =$



6)  $20 \times 21 =$



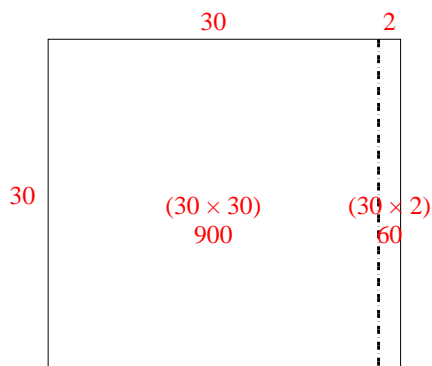
**Réponses**

- 1. \_\_\_\_\_
- 2. \_\_\_\_\_
- 3. \_\_\_\_\_
- 4. \_\_\_\_\_
- 5. \_\_\_\_\_
- 6. \_\_\_\_\_

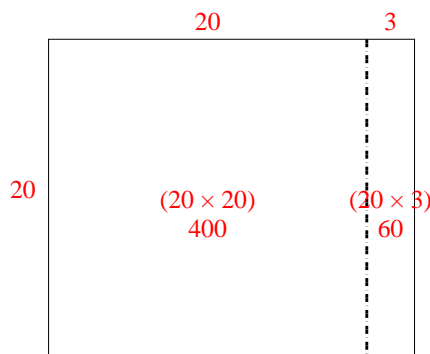


Utilisez les rectangles pour résoudre chaque problème.

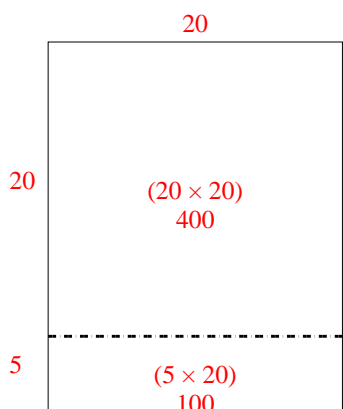
1)  $30 \times 32 =$



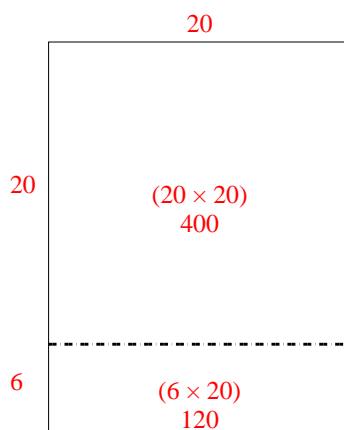
2)  $20 \times 23 =$



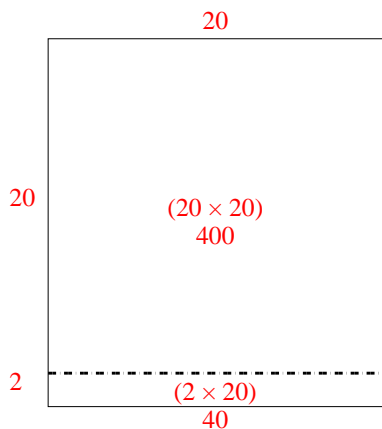
3)  $25 \times 20 =$



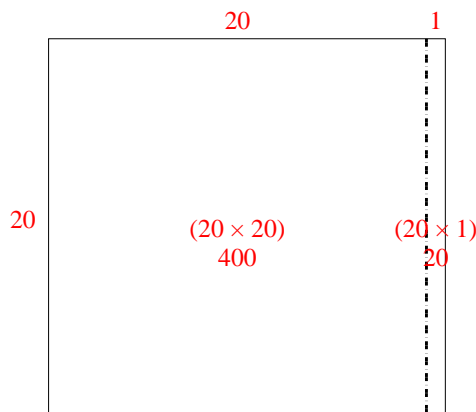
4)  $26 \times 20 =$



5)  $22 \times 20 =$



6)  $20 \times 21 =$



**Réponses**

1. 960

2. 460

3. 500

4. 520

5. 440

6. 420