





Utilisez les rectangles pour résoudre chaque problème.


1)  $32 \times 20 =$




2)  $30 \times 37 =$




3)  $20 \times 22 =$




4)  $20 \times 29 =$



5)  $23 \times 20 =$



6)  $28 \times 20 =$



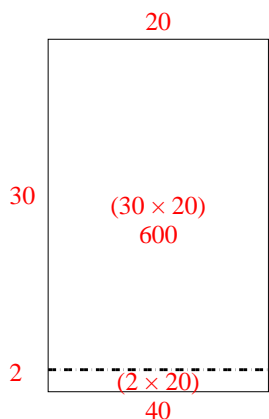
**Réponses**

- 1. \_\_\_\_\_
- 2. \_\_\_\_\_
- 3. \_\_\_\_\_
- 4. \_\_\_\_\_
- 5. \_\_\_\_\_
- 6. \_\_\_\_\_

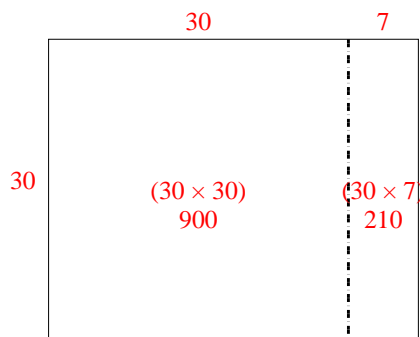


Utilisez les rectangles pour résoudre chaque problème.

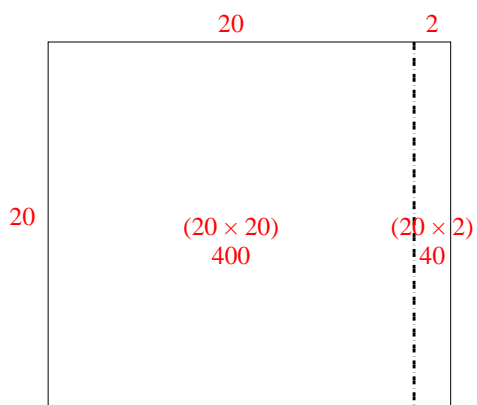
1)  $32 \times 20 =$



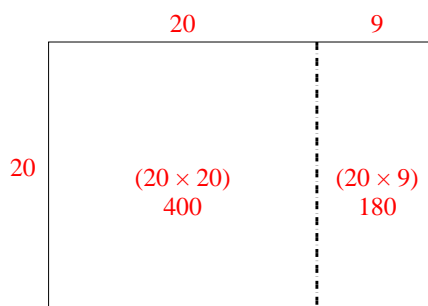
2)  $30 \times 37 =$



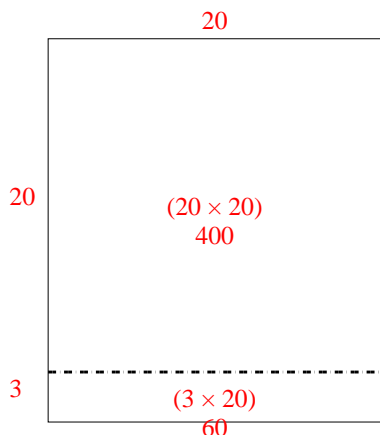
3)  $20 \times 22 =$



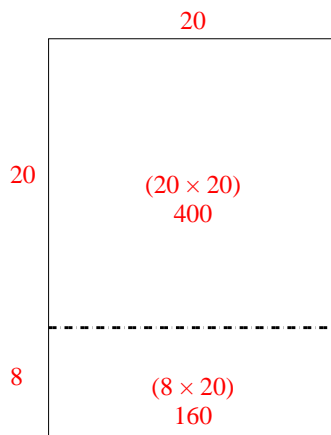
4)  $20 \times 29 =$



5)  $23 \times 20 =$



6)  $28 \times 20 =$



**Réponses**

1. 640

2. 1 110

3. 440

4. 580

5. 460

6. 560