





Utilisez les rectangles pour résoudre chaque problème.


1) $30 \times 37 =$




2) $33 \times 30 =$




3) $39 \times 30 =$




4) $26 \times 30 =$



5) $22 \times 20 =$



6) $29 \times 20 =$



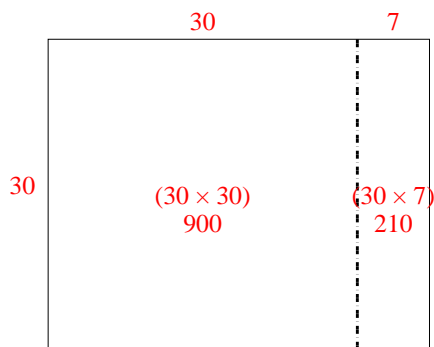
Réponses

- 1. _____
- 2. _____
- 3. _____
- 4. _____
- 5. _____
- 6. _____

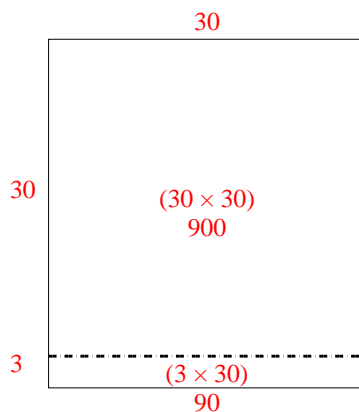


Utilisez les rectangles pour résoudre chaque problème.

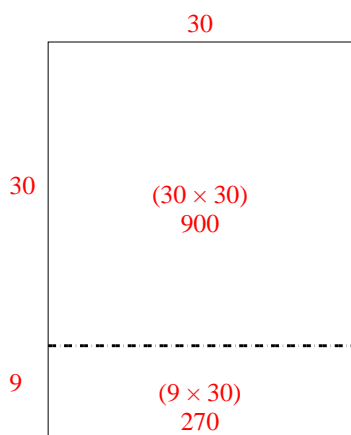
1) $30 \times 37 =$



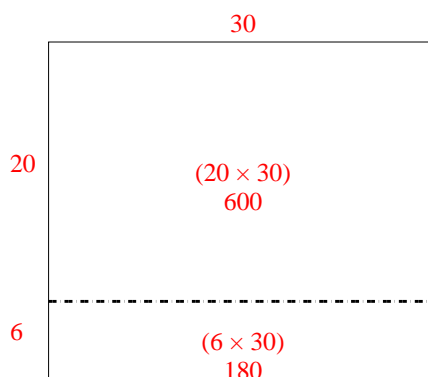
2) $33 \times 30 =$



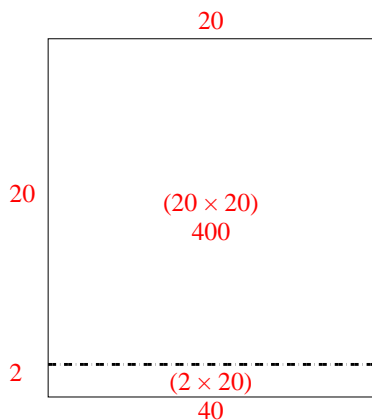
3) $39 \times 30 =$



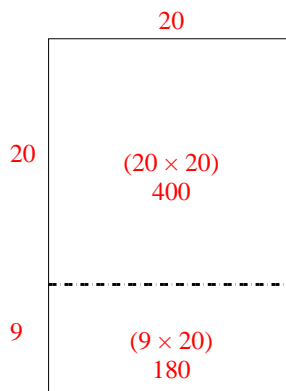
4) $26 \times 30 =$



5) $22 \times 20 =$



6) $29 \times 20 =$



Réponses

1. 1 110

2. 990

3. 1 170

4. 780

5. 440

6. 580