

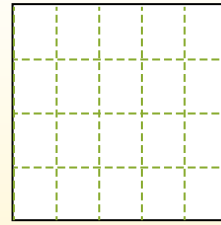
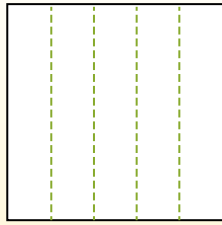
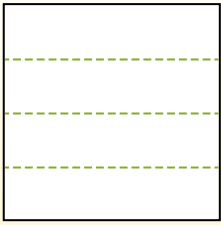


Partitionnez la figure comme indiqué et comptez le nombre de cellules formées.


Las filas van de izquierda a derecha.

Las columnas van de arriba a abajo.

Aqui tem 4 linhas e 5 colunas .
Existem 20 caixas no total.



1) 3 lignes
3 colonnes




2) 3 lignes
2 colonnes




3) 2 lignes
2 colonnes




4) 4 lignes
3 colonnes




5) 4 lignes
2 colonnes




6) 4 lignes
4 colonnes




7) 3 lignes
5 colonnes



8) 2 lignes
5 colonnes



9) 2 lignes
4 colonnes



Réponses

- 1. _____
- 2. _____
- 3. _____
- 4. _____
- 5. _____
- 6. _____
- 7. _____
- 8. _____
- 9. _____

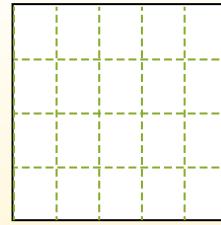
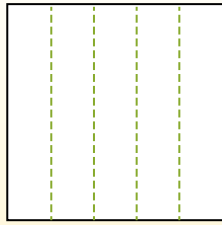
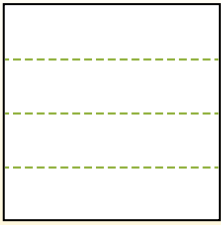


Partitionnez la figure comme indiqué et comptez le nombre de cellules formées.

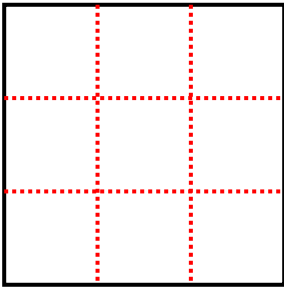
Las filas van de izquierda a derecha.

Las columnas van de arriba a abajo.

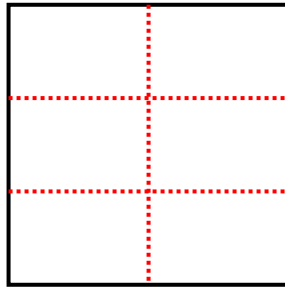
Aqui tem 4 linhas e 5 colunas. Existem 20 caixas no total.



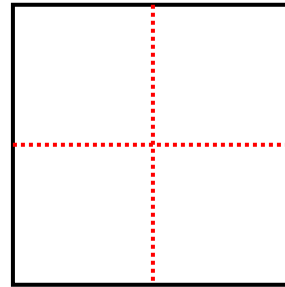
1) 3 lignes
3 colonnes



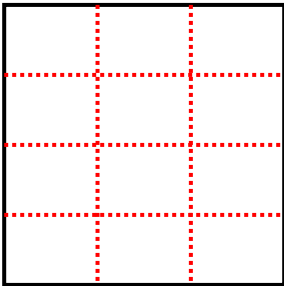
2) 3 lignes
2 colonnes



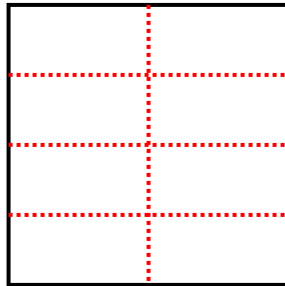
3) 2 lignes
2 colonnes



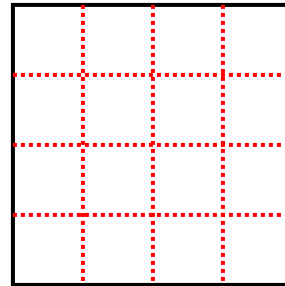
4) 4 lignes
3 colonnes



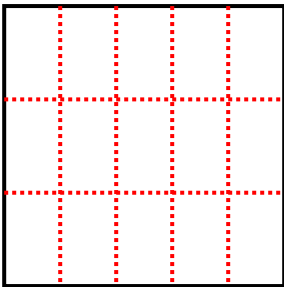
5) 4 lignes
2 colonnes



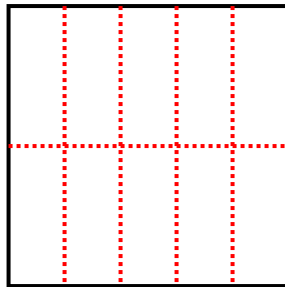
6) 4 lignes
4 colonnes



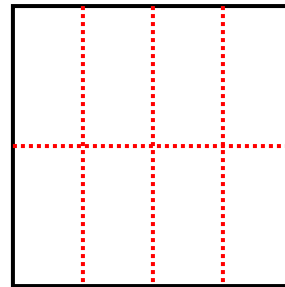
7) 3 lignes
5 colonnes



8) 2 lignes
5 colonnes



9) 2 lignes
4 colonnes



Réponses

1. 9

2. 6

3. 4

4. 12

5. 8

6. 16

7. 15

8. 10

9. 8