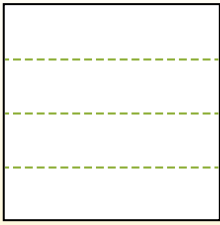


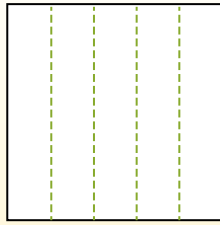


Partitionnez la figure comme indiqué et comptez le nombre de cellules formées.

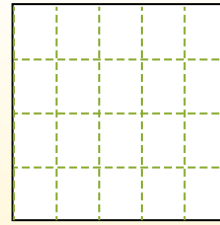
Las filas van de izquierda a derecha.




Las columnas van de arriba a abajo.




Aqui tem 4 linhas e 5 colunas .  
Existem 20 caixas no total.




1) 3 lignes  
3 colonnes




2) 2 lignes  
3 colonnes



3) 4 lignes  
2 colonnes




4) 4 lignes  
4 colonnes




5) 2 lignes  
5 colonnes




6) 2 lignes  
4 colonnes




7) 4 lignes  
3 colonnes



8) 5 lignes  
4 colonnes



9) 5 lignes  
3 colonnes



**Réponses**

- 1. \_\_\_\_\_
- 2. \_\_\_\_\_
- 3. \_\_\_\_\_
- 4. \_\_\_\_\_
- 5. \_\_\_\_\_
- 6. \_\_\_\_\_
- 7. \_\_\_\_\_
- 8. \_\_\_\_\_
- 9. \_\_\_\_\_

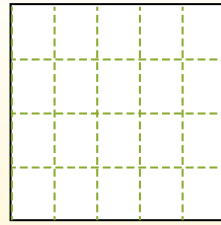
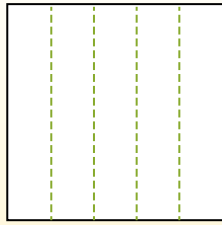
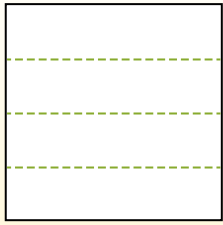


Partitionnez la figure comme indiqué et comptez le nombre de cellules formées.

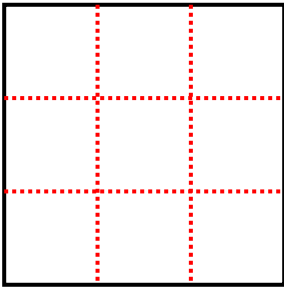
Las filas van de izquierda a derecha.

Las columnas van de arriba a abajo.

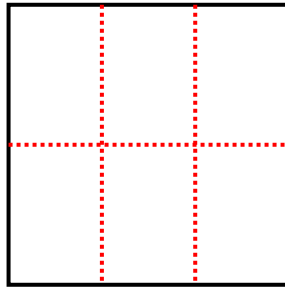
Aqui tem 4 linhas e 5 colunas. Existem 20 caixas no total.



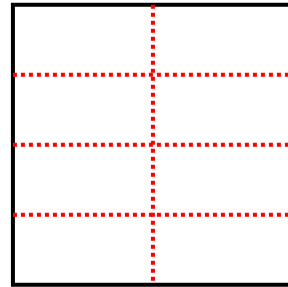
1) 3 lignes  
3 colonnes



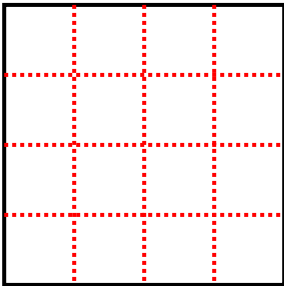
2) 2 lignes  
3 colonnes



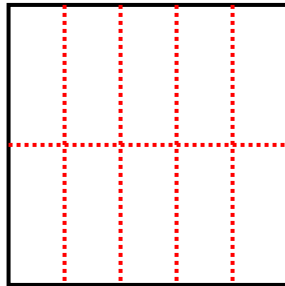
3) 4 lignes  
2 colonnes



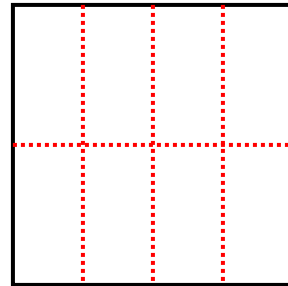
4) 4 lignes  
4 colonnes



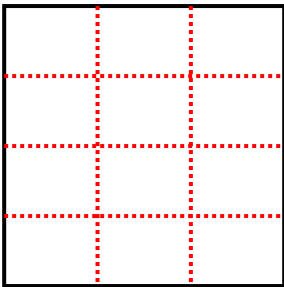
5) 2 lignes  
5 colonnes



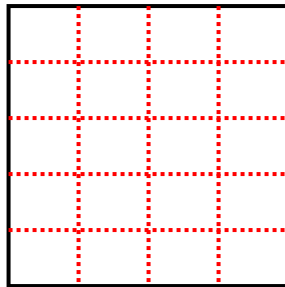
6) 2 lignes  
4 colonnes



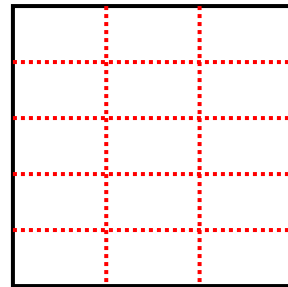
7) 4 lignes  
3 colonnes



8) 5 lignes  
4 colonnes



9) 5 lignes  
3 colonnes



**Réponses**

1. 9

2. 6

3. 8

4. 16

5. 10

6. 8

7. 12

8. 20

9. 15