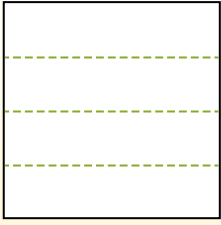


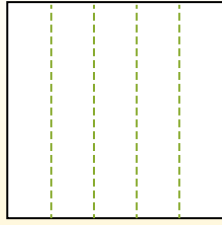


Partitionnez la figure comme indiqué et comptez le nombre de cellules formées.

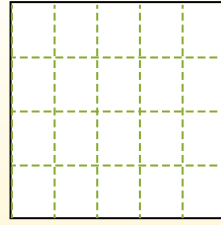
Las filas van de izquierda a derecha.




Las columnas van de arriba a abajo.




Aqui tem 4 linhas e 5 colunas .
Existem 20 caixas no total.




1) 2 lignes
4 colonnes




2) 5 lignes
2 colonnes




3) 3 lignes
4 colonnes




4) 3 lignes
5 colonnes




5) 2 lignes
3 colonnes




6) 4 lignes
3 colonnes




7) 5 lignes
3 colonnes



8) 3 lignes
2 colonnes



9) 3 lignes
3 colonnes



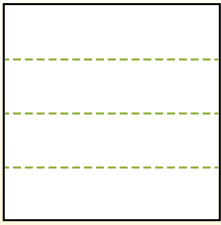
Réponses

- 1. _____
- 2. _____
- 3. _____
- 4. _____
- 5. _____
- 6. _____
- 7. _____
- 8. _____
- 9. _____

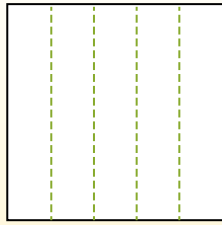


Partitionnez la figure comme indiqué et comptez le nombre de cellules formées.

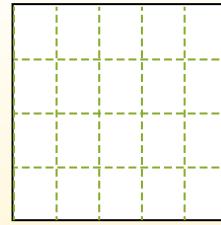
Las filas van de izquierda a derecha.



Las columnas van de arriba a abajo.



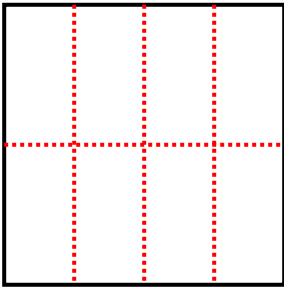
Aqui tem 4 linhas e 5 colunas. Existem 20 caixas no total.



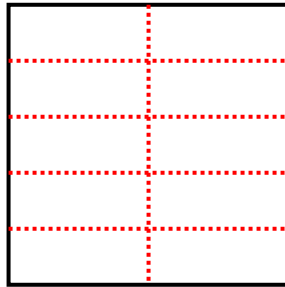
Réponses

- 1. 8
- 2. 10
- 3. 12
- 4. 15
- 5. 6
- 6. 12
- 7. 15
- 8. 6
- 9. 9

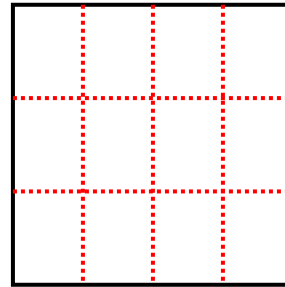
1) 2 lignes
4 colonnes



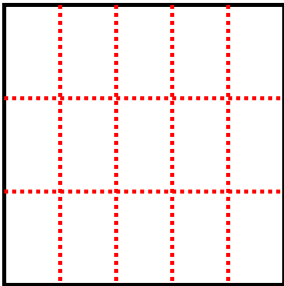
2) 5 lignes
2 colonnes



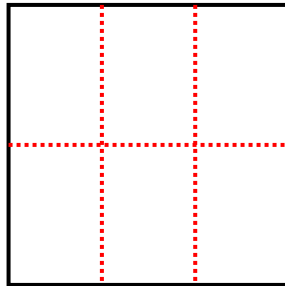
3) 3 lignes
4 colonnes



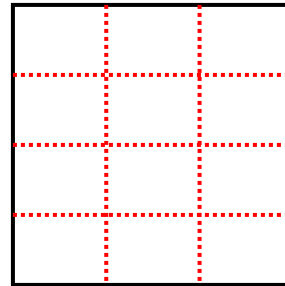
4) 3 lignes
5 colonnes



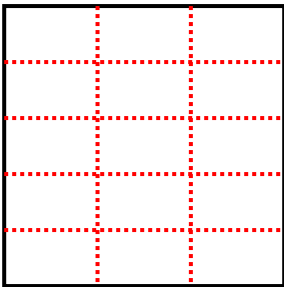
5) 2 lignes
3 colonnes



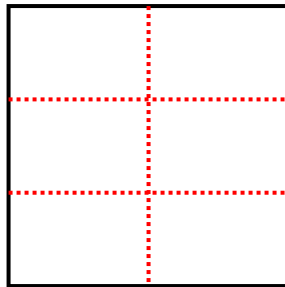
6) 4 lignes
3 colonnes



7) 5 lignes
3 colonnes



8) 3 lignes
2 colonnes



9) 3 lignes
3 colonnes

