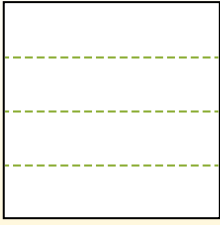


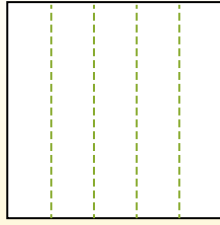


Partitionnez la figure comme indiqué et comptez le nombre de cellules formées.

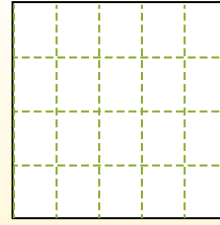
Las filas van de izquierda a derecha.



Las columnas van de arriba a abajo.




Aqui tem 4 linhas e 5 colunas .  
Existem 20 caixas no total.




**Réponses**

- 1. \_\_\_\_\_
- 2. \_\_\_\_\_
- 3. \_\_\_\_\_
- 4. \_\_\_\_\_
- 5. \_\_\_\_\_
- 6. \_\_\_\_\_
- 7. \_\_\_\_\_
- 8. \_\_\_\_\_
- 9. \_\_\_\_\_


1) 5 lignes  
4 colonnes




2) 4 lignes  
4 colonnes




3) 2 lignes  
3 colonnes




4) 4 lignes  
3 colonnes




5) 5 lignes  
5 colonnes




6) 3 lignes  
5 colonnes




7) 5 lignes  
2 colonnes



8) 2 lignes  
5 colonnes



9) 3 lignes  
3 colonnes



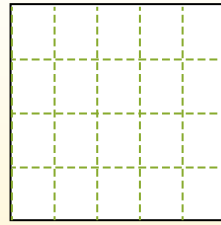
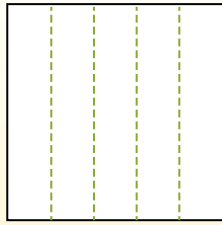
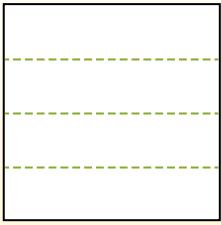


Partitionnez la figure comme indiqué et comptez le nombre de cellules formées.

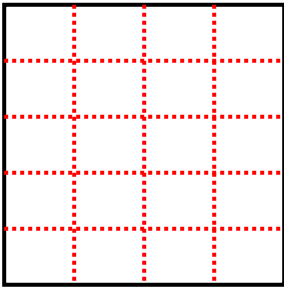
Las filas van de izquierda a derecha.

Las columnas van de arriba a abajo.

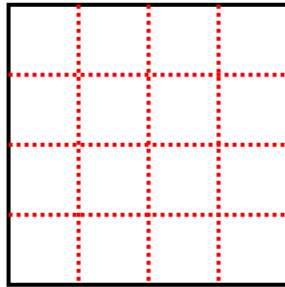
Aqui tem 4 linhas e 5 colunas. Existem 20 caixas no total.



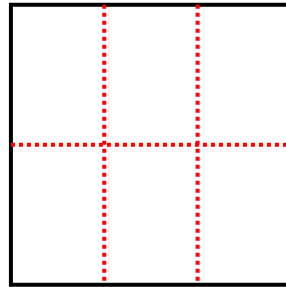
1) 5 lignes  
4 colonnes



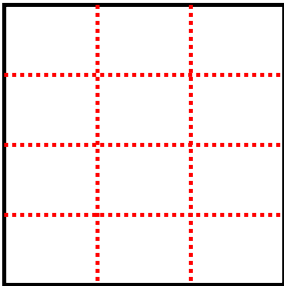
2) 4 lignes  
4 colonnes



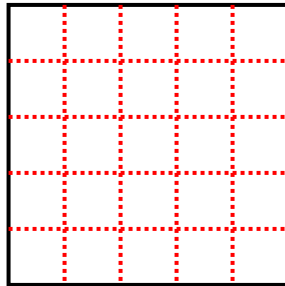
3) 2 lignes  
3 colonnes



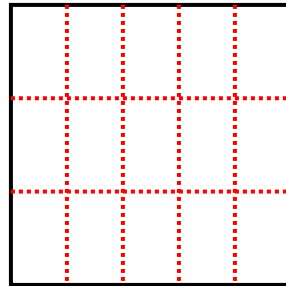
4) 4 lignes  
3 colonnes



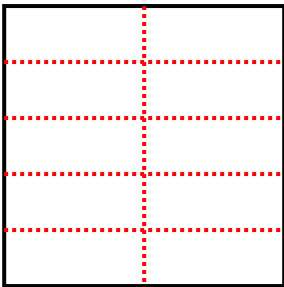
5) 5 lignes  
5 colonnes



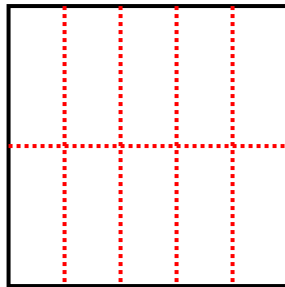
6) 3 lignes  
5 colonnes



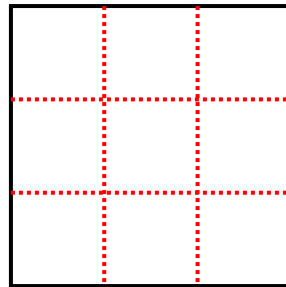
7) 5 lignes  
2 colonnes



8) 2 lignes  
5 colonnes



9) 3 lignes  
3 colonnes



**Réponses**

1. **20**

2. **16**

3. **6**

4. **12**

5. **25**

6. **15**

7. **10**

8. **10**

9. **9**