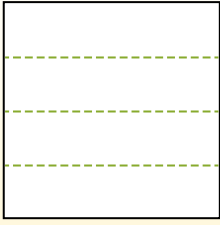


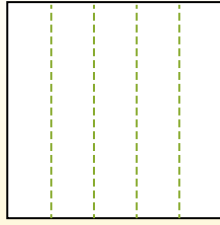


Partitionnez la figure comme indiqué et comptez le nombre de cellules formées.

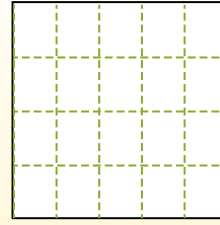
Las filas van de izquierda a derecha.



Las columnas van de arriba a abajo.




Aqui tem 4 linhas e 5 colunas .
Existem 20 caixas no total.




Réponses

- 1. _____
- 2. _____
- 3. _____
- 4. _____
- 5. _____
- 6. _____
- 7. _____
- 8. _____
- 9. _____


1) 3 lignes
3 colonnes




2) 2 lignes
3 colonnes




3) 4 lignes
3 colonnes




4) 5 lignes
4 colonnes




5) 2 lignes
5 colonnes




6) 3 lignes
2 colonnes




7) 2 lignes
4 colonnes



8) 4 lignes
4 colonnes



9) 5 lignes
3 colonnes



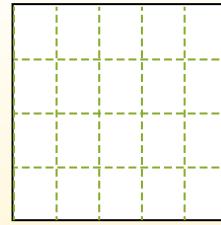
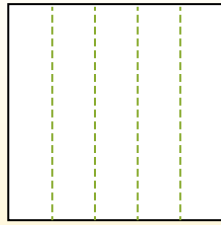
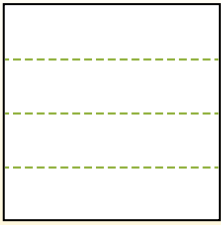


Partitionnez la figure comme indiqué et comptez le nombre de cellules formées.

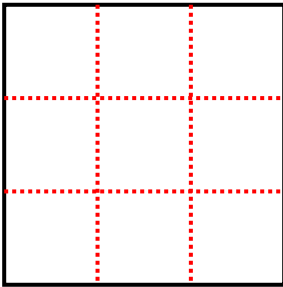
Las filas van de izquierda a derecha.

Las columnas van de arriba a abajo.

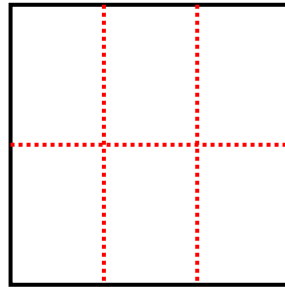
Aqui tem 4 linhas e 5 colunas. Existem 20 caixas no total.



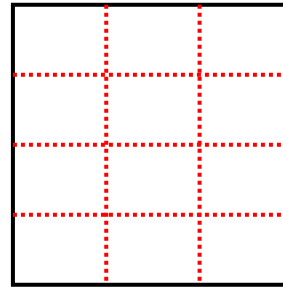
1) 3 lignes
3 colonnes



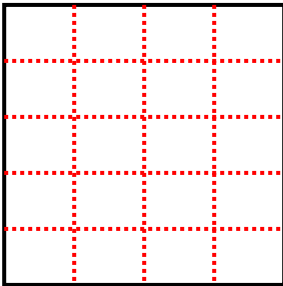
2) 2 lignes
3 colonnes



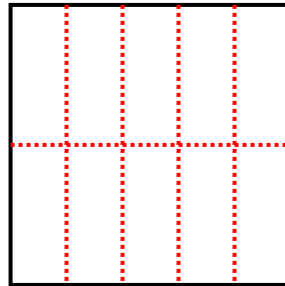
3) 4 lignes
3 colonnes



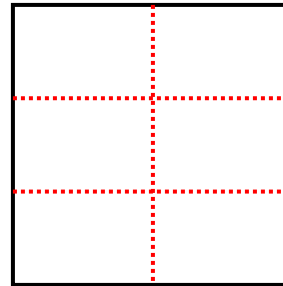
4) 5 lignes
4 colonnes



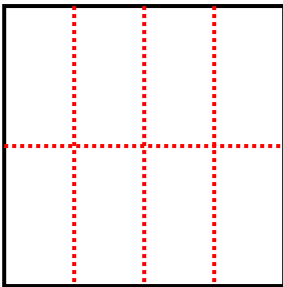
5) 2 lignes
5 colonnes



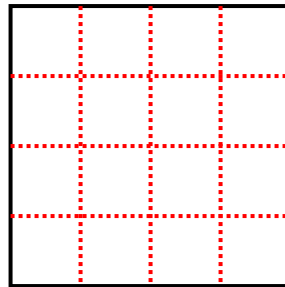
6) 3 lignes
2 colonnes



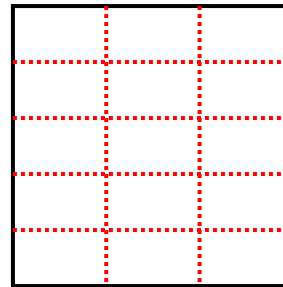
7) 2 lignes
4 colonnes



8) 4 lignes
4 colonnes



9) 5 lignes
3 colonnes



Réponses

1. 9

2. 6

3. 12

4. 20

5. 10

6. 6

7. 8

8. 16

9. 15