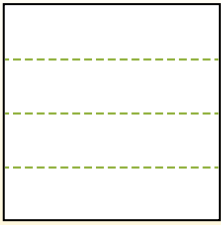


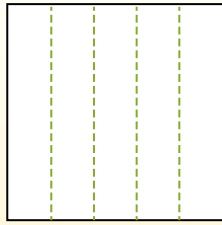


Partitionnez la figure comme indiqué et comptez le nombre de cellules formées.

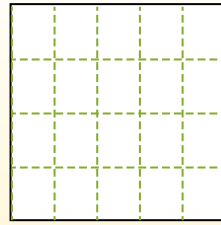
Las filas van de izquierda a derecha.



Las columnas van de arriba a abajo.




Aqui tem 4 linhas e 5 colunas .  
Existem 20 caixas no total.




**Réponses**

- 1. \_\_\_\_\_
- 2. \_\_\_\_\_
- 3. \_\_\_\_\_
- 4. \_\_\_\_\_
- 5. \_\_\_\_\_
- 6. \_\_\_\_\_
- 7. \_\_\_\_\_
- 8. \_\_\_\_\_
- 9. \_\_\_\_\_


1) 3 lignes  
5 colonnes




2) 3 lignes  
3 colonnes




3) 2 lignes  
5 colonnes




4) 3 lignes  
2 colonnes




5) 4 lignes  
3 colonnes




6) 4 lignes  
4 colonnes




7) 4 lignes  
2 colonnes



8) 3 lignes  
4 colonnes



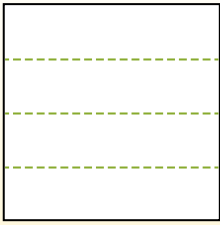
9) 5 lignes  
5 colonnes



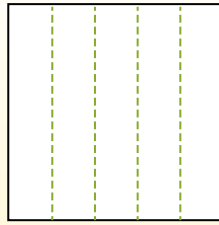


Partitionnez la figure comme indiqué et comptez le nombre de cellules formées.

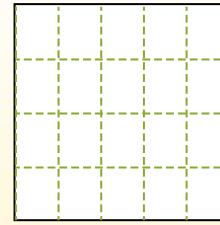
Las filas van de izquierda a derecha.



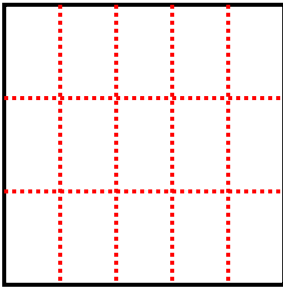
Las columnas van de arriba a abajo.



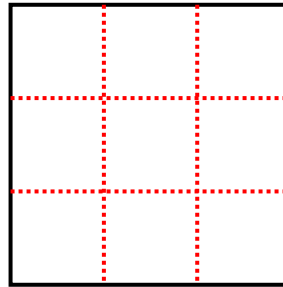
Aqui tem 4 linhas e 5 colunas. Existem 20 caixas no total.



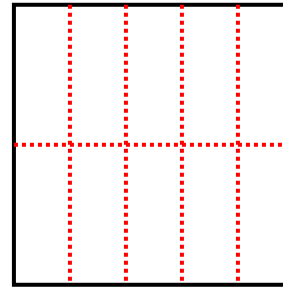
1) 3 lignes  
5 colonnes



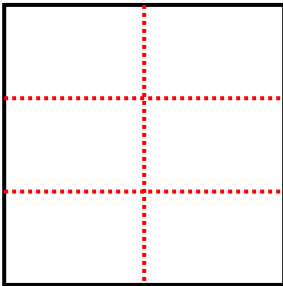
2) 3 lignes  
3 colonnes



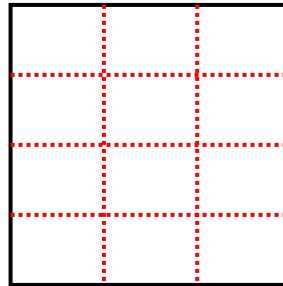
3) 2 lignes  
5 colonnes



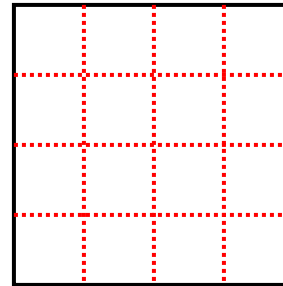
4) 3 lignes  
2 colonnes



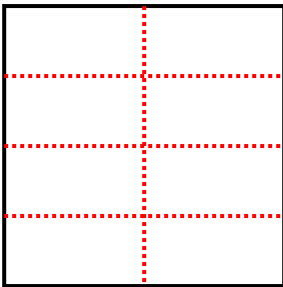
5) 4 lignes  
3 colonnes



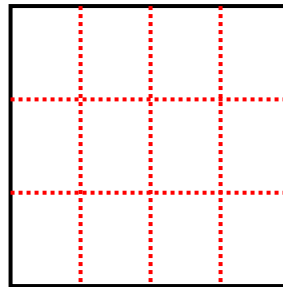
6) 4 lignes  
4 colonnes



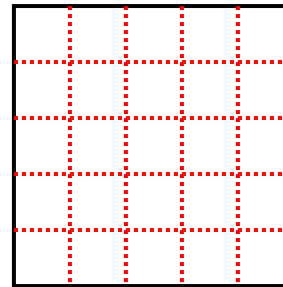
7) 4 lignes  
2 colonnes



8) 3 lignes  
4 colonnes



9) 5 lignes  
5 colonnes



**Réponses**

1. **15**

2. **9**

3. **10**

4. **6**

5. **12**

6. **16**

7. **8**

8. **12**

9. **25**

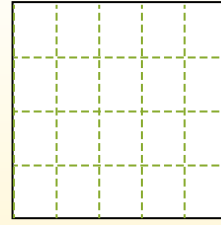
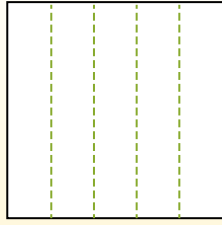
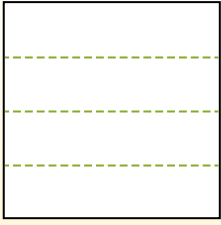


Partitionnez la figure comme indiqué et comptez le nombre de cellules formées.


Las filas van de izquierda a derecha.

Las columnas van de arriba a abajo.


Aqui tem 4 linhas e 5 colunas .  
Existem 20 caixas no total.




1) 3 lignes  
3 colonnes




2) 3 lignes  
2 colonnes




3) 2 lignes  
2 colonnes




4) 4 lignes  
3 colonnes




5) 4 lignes  
2 colonnes




6) 4 lignes  
4 colonnes




7) 3 lignes  
5 colonnes



8) 2 lignes  
5 colonnes



9) 2 lignes  
4 colonnes



**Réponses**

- 1. \_\_\_\_\_
- 2. \_\_\_\_\_
- 3. \_\_\_\_\_
- 4. \_\_\_\_\_
- 5. \_\_\_\_\_
- 6. \_\_\_\_\_
- 7. \_\_\_\_\_
- 8. \_\_\_\_\_
- 9. \_\_\_\_\_

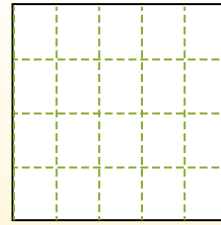
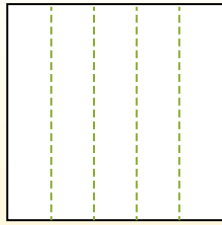
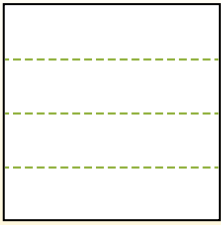


Partitionnez la figure comme indiqué et comptez le nombre de cellules formées.

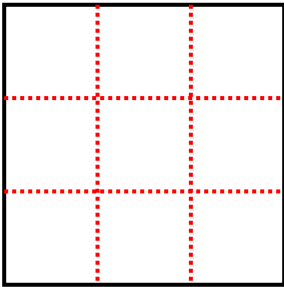
Las filas van de izquierda a derecha.

Las columnas van de arriba a abajo.

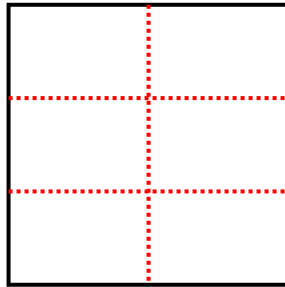
Aqui tem 4 linhas e 5 colunas. Existem 20 caixas no total.



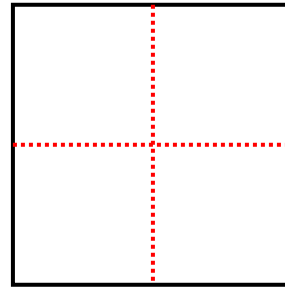
1) 3 lignes  
3 colonnes



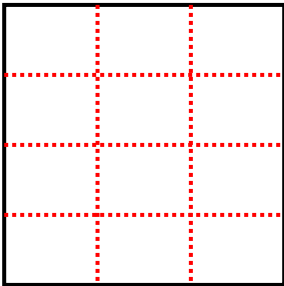
2) 3 lignes  
2 colonnes



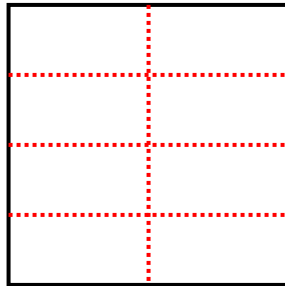
3) 2 lignes  
2 colonnes



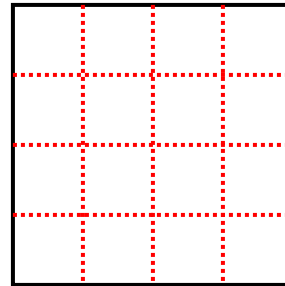
4) 4 lignes  
3 colonnes



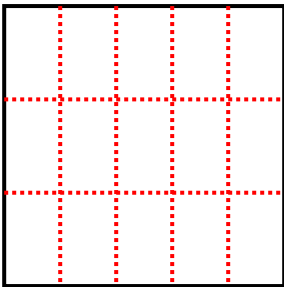
5) 4 lignes  
2 colonnes



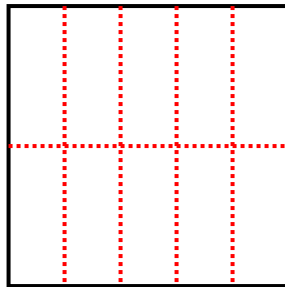
6) 4 lignes  
4 colonnes



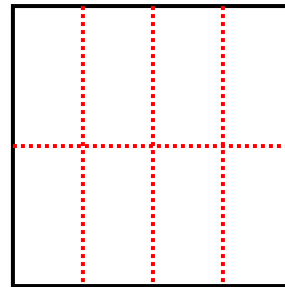
7) 3 lignes  
5 colonnes



8) 2 lignes  
5 colonnes



9) 2 lignes  
4 colonnes



**Réponses**

1. 9

2. 6

3. 4

4. 12

5. 8

6. 16

7. 15

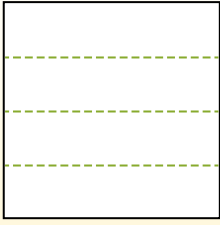
8. 10

9. 8

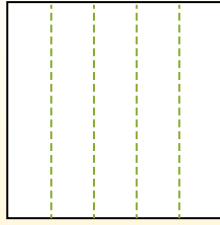


Partitionnez la figure comme indiqué et comptez le nombre de cellules formées.

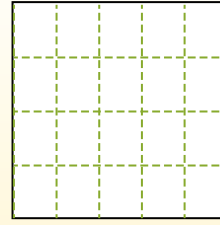
Las filas van de izquierda a derecha.



Las columnas van de arriba a abajo.




Aqui tem 4 linhas e 5 colunas .  
Existem 20 caixas no total.




**Réponses**

- 1. \_\_\_\_\_
- 2. \_\_\_\_\_
- 3. \_\_\_\_\_
- 4. \_\_\_\_\_
- 5. \_\_\_\_\_
- 6. \_\_\_\_\_
- 7. \_\_\_\_\_
- 8. \_\_\_\_\_
- 9. \_\_\_\_\_


1) 3 lignes  
2 colonnes




2) 4 lignes  
2 colonnes




3) 2 lignes  
3 colonnes




4) 5 lignes  
4 colonnes




5) 5 lignes  
2 colonnes




6) 2 lignes  
2 colonnes




7) 3 lignes  
4 colonnes



8) 5 lignes  
5 colonnes



9) 4 lignes  
3 colonnes



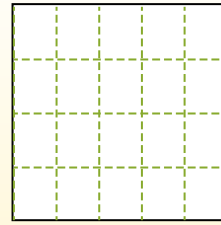
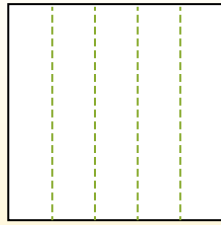
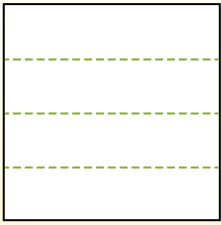


Partitionnez la figure comme indiqué et comptez le nombre de cellules formées.

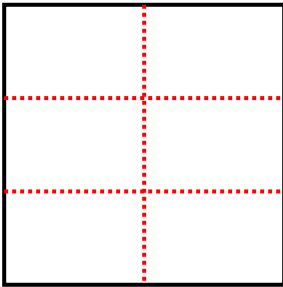
Las filas van de izquierda a derecha.

Las columnas van de arriba a abajo.

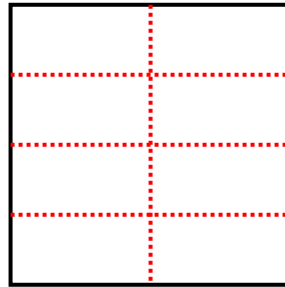
Aqui tem 4 linhas e 5 colunas. Existem 20 caixas no total.



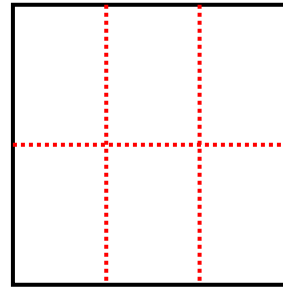
1) 3 lignes  
2 colonnes



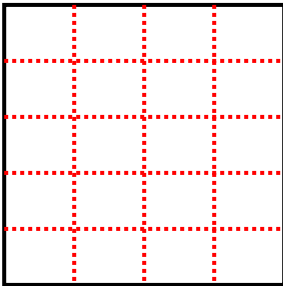
2) 4 lignes  
2 colonnes



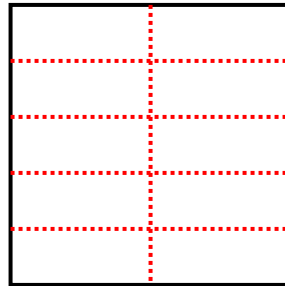
3) 2 lignes  
3 colonnes



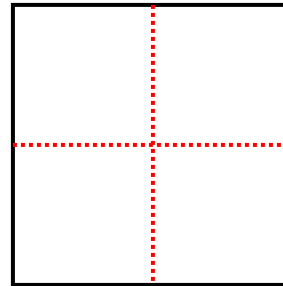
4) 5 lignes  
4 colonnes



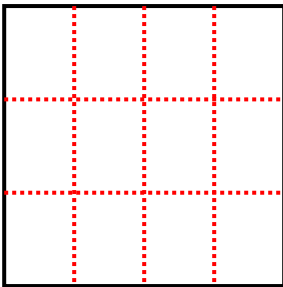
5) 5 lignes  
2 colonnes



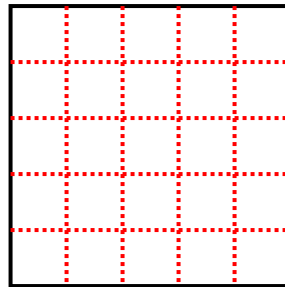
6) 2 lignes  
2 colonnes



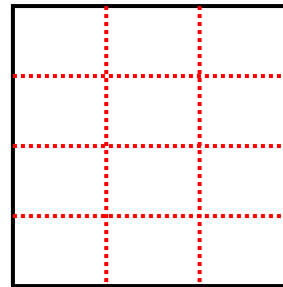
7) 3 lignes  
4 colonnes



8) 5 lignes  
5 colonnes



9) 4 lignes  
3 colonnes



**Réponses**

1. 6

2. 8

3. 6

4. 20

5. 10

6. 4

7. 12

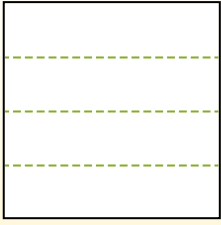
8. 25

9. 12

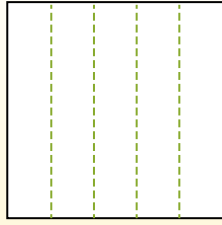


Partitionnez la figure comme indiqué et comptez le nombre de cellules formées.

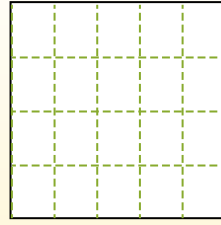
Las filas van de izquierda a derecha.



Las columnas van de arriba a abajo.




Aqui tem 4 linhas e 5 colunas .  
Existem 20 caixas no total.




**Réponses**

- 1. \_\_\_\_\_
- 2. \_\_\_\_\_
- 3. \_\_\_\_\_
- 4. \_\_\_\_\_
- 5. \_\_\_\_\_
- 6. \_\_\_\_\_
- 7. \_\_\_\_\_
- 8. \_\_\_\_\_
- 9. \_\_\_\_\_


1) 3 lignes  
3 colonnes




2) 2 lignes  
3 colonnes




3) 4 lignes  
2 colonnes




4) 4 lignes  
4 colonnes




5) 2 lignes  
5 colonnes




6) 2 lignes  
4 colonnes




7) 4 lignes  
3 colonnes



8) 5 lignes  
4 colonnes



9) 5 lignes  
3 colonnes



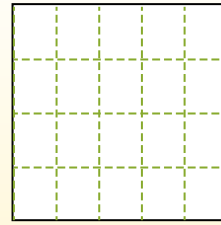
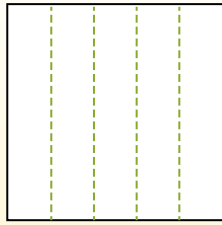
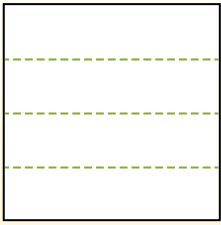


Partitionnez la figure comme indiqué et comptez le nombre de cellules formées.

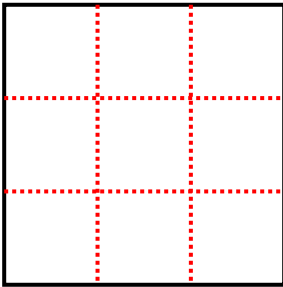
Las filas van de izquierda a derecha.

Las columnas van de arriba a abajo.

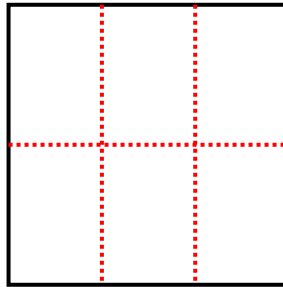
Aqui tem 4 linhas e 5 colunas .  
Existem 20 caixas no total.



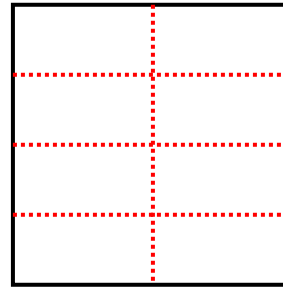
1) 3 lignes  
3 colonnes



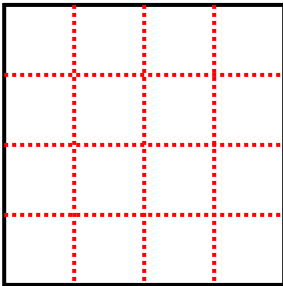
2) 2 lignes  
3 colonnes



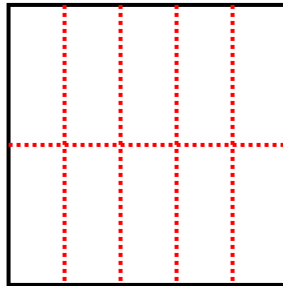
3) 4 lignes  
2 colonnes



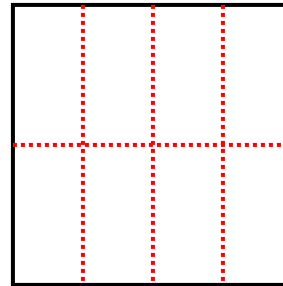
4) 4 lignes  
4 colonnes



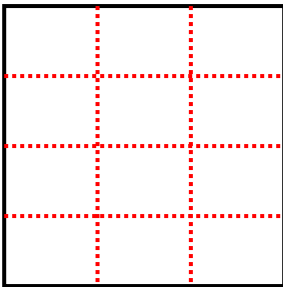
5) 2 lignes  
5 colonnes



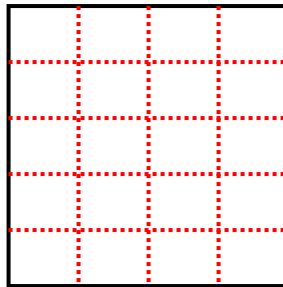
6) 2 lignes  
4 colonnes



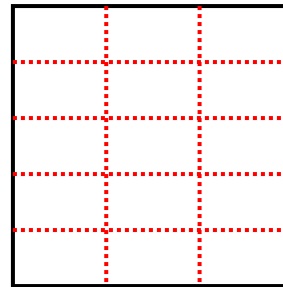
7) 4 lignes  
3 colonnes



8) 5 lignes  
4 colonnes



9) 5 lignes  
3 colonnes



**Réponses**

1. 9

2. 6

3. 8

4. 16

5. 10

6. 8

7. 12

8. 20

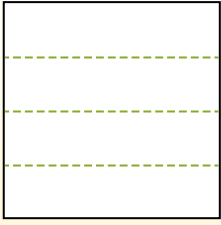
9. 15



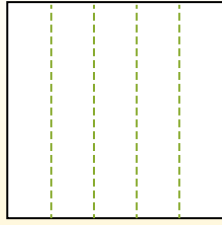


Partitionnez la figure comme indiqué et comptez le nombre de cellules formées.

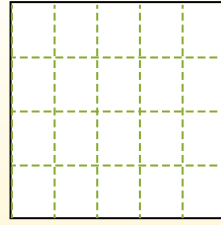
Las filas van de izquierda a derecha.



Las columnas van de arriba a abajo.




Aqui tem 4 linhas e 5 colunas .  
Existem 20 caixas no total.




**Réponses**

- 1. \_\_\_\_\_
- 2. \_\_\_\_\_
- 3. \_\_\_\_\_
- 4. \_\_\_\_\_
- 5. \_\_\_\_\_
- 6. \_\_\_\_\_
- 7. \_\_\_\_\_
- 8. \_\_\_\_\_
- 9. \_\_\_\_\_


1) 5 lignes  
2 colonnes




2) 3 lignes  
3 colonnes




3) 2 lignes  
3 colonnes




4) 3 lignes  
4 colonnes




5) 2 lignes  
2 colonnes




6) 5 lignes  
4 colonnes




7) 3 lignes  
2 colonnes



8) 5 lignes  
3 colonnes



9) 2 lignes  
5 colonnes



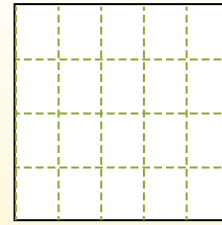
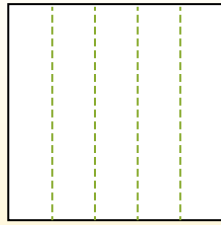
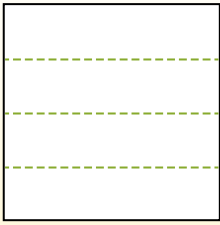


Partitionnez la figure comme indiqué et comptez le nombre de cellules formées.

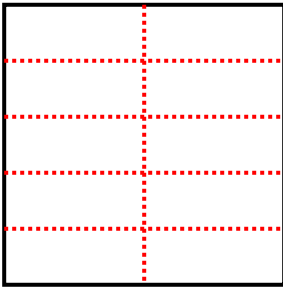
Las filas van de izquierda a derecha.

Las columnas van de arriba a abajo.

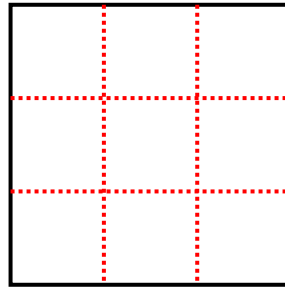
Aqui tem 4 linhas e 5 colunas. Existem 20 caixas no total.



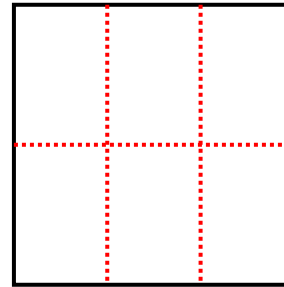
1) 5 lignes  
2 colonnes



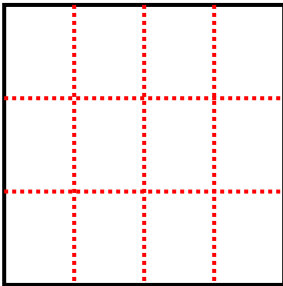
2) 3 lignes  
3 colonnes



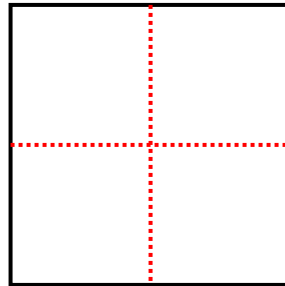
3) 2 lignes  
3 colonnes



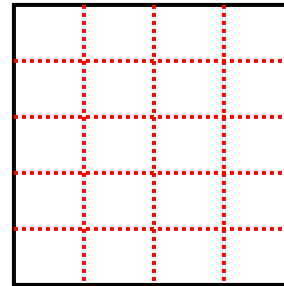
4) 3 lignes  
4 colonnes



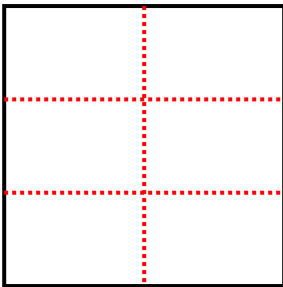
5) 2 lignes  
2 colonnes



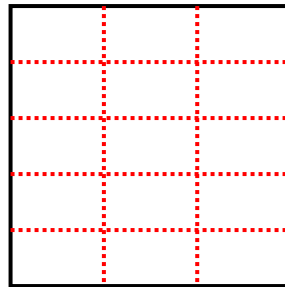
6) 5 lignes  
4 colonnes



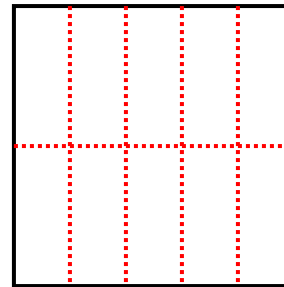
7) 3 lignes  
2 colonnes



8) 5 lignes  
3 colonnes



9) 2 lignes  
5 colonnes



**Réponses**

1. **10**

2. **9**

3. **6**

4. **12**

5. **4**

6. **20**

7. **6**

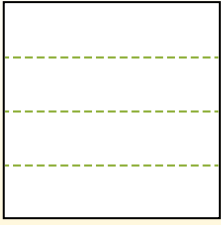
8. **15**

9. **10**

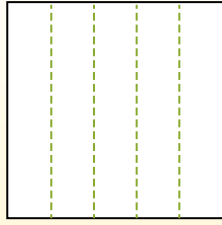


Partitionnez la figure comme indiqué et comptez le nombre de cellules formées.

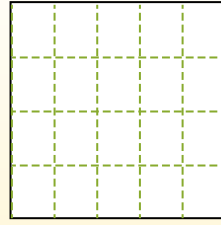
Las filas van de izquierda a derecha.




Las columnas van de arriba a abajo.




Aqui tem 4 linhas e 5 colunas .  
Existem 20 caixas no total.




1) 2 lignes  
4 colonnes




2) 5 lignes  
2 colonnes




3) 3 lignes  
4 colonnes




4) 3 lignes  
5 colonnes




5) 2 lignes  
3 colonnes




6) 4 lignes  
3 colonnes




7) 5 lignes  
3 colonnes



8) 3 lignes  
2 colonnes



9) 3 lignes  
3 colonnes



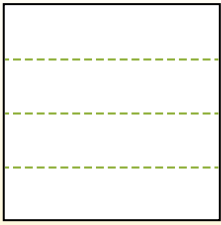
Réponses

- 1. \_\_\_\_\_
- 2. \_\_\_\_\_
- 3. \_\_\_\_\_
- 4. \_\_\_\_\_
- 5. \_\_\_\_\_
- 6. \_\_\_\_\_
- 7. \_\_\_\_\_
- 8. \_\_\_\_\_
- 9. \_\_\_\_\_

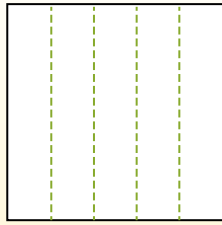


Partitionnez la figure comme indiqué et comptez le nombre de cellules formées.

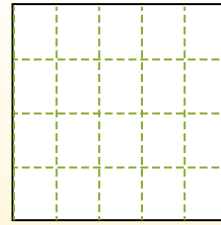
Las filas van de izquierda a derecha.



Las columnas van de arriba a abajo.



Aqui tem 4 linhas e 5 colunas. Existem 20 caixas no total.



**Réponses**

1. 8

2. 10

3. 12

4. 15

5. 6

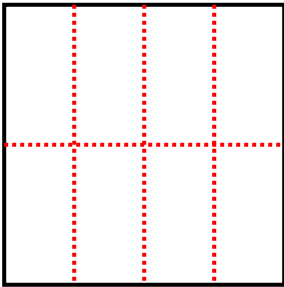
6. 12

7. 15

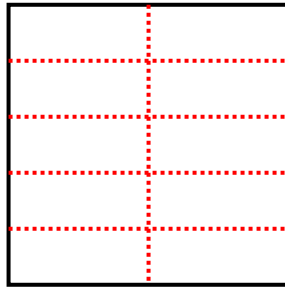
8. 6

9. 9

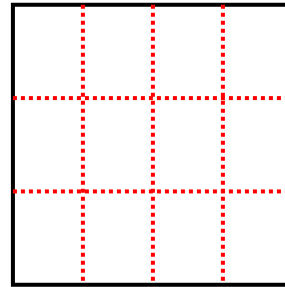
1) 2 lignes  
4 colonnes



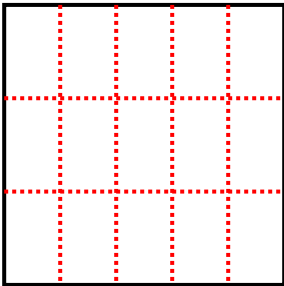
2) 5 lignes  
2 colonnes



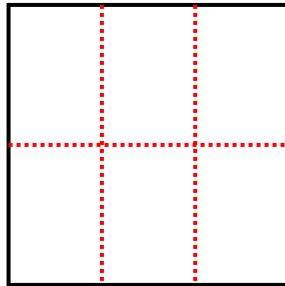
3) 3 lignes  
4 colonnes



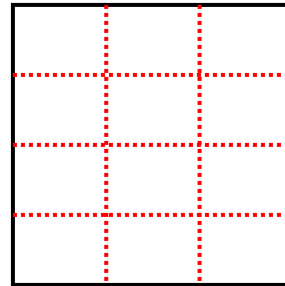
4) 3 lignes  
5 colonnes



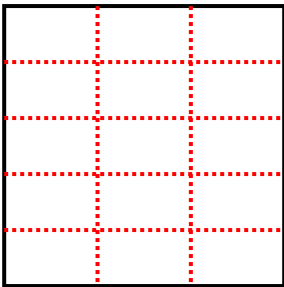
5) 2 lignes  
3 colonnes



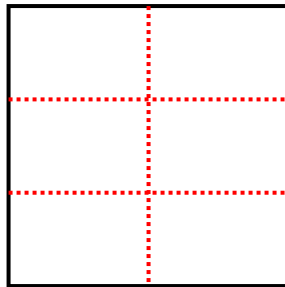
6) 4 lignes  
3 colonnes



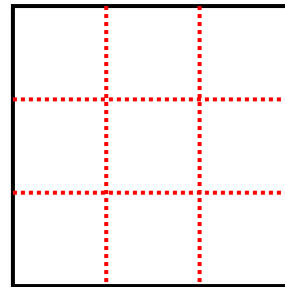
7) 5 lignes  
3 colonnes



8) 3 lignes  
2 colonnes



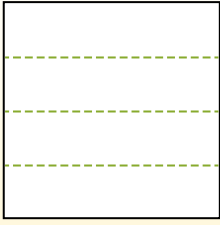
9) 3 lignes  
3 colonnes



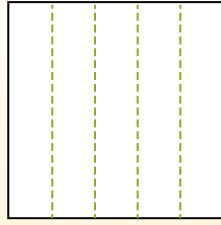


Partitionnez la figure comme indiqué et comptez le nombre de cellules formées.

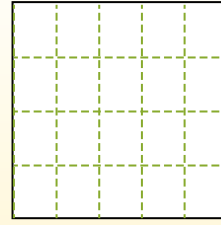
Las filas van de izquierda a derecha.



Las columnas van de arriba a abajo.




Aqui tem 4 linhas e 5 colunas .  
Existem 20 caixas no total.




**Réponses**

- 1. \_\_\_\_\_
- 2. \_\_\_\_\_
- 3. \_\_\_\_\_
- 4. \_\_\_\_\_
- 5. \_\_\_\_\_
- 6. \_\_\_\_\_
- 7. \_\_\_\_\_
- 8. \_\_\_\_\_
- 9. \_\_\_\_\_


1) 4 lignes  
2 colonnes




2) 2 lignes  
2 colonnes




3) 5 lignes  
3 colonnes




4) 5 lignes  
4 colonnes




5) 3 lignes  
2 colonnes




6) 4 lignes  
3 colonnes




7) 5 lignes  
2 colonnes



8) 4 lignes  
4 colonnes



9) 3 lignes  
3 colonnes



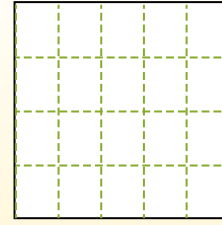
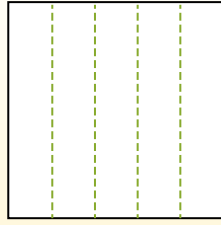
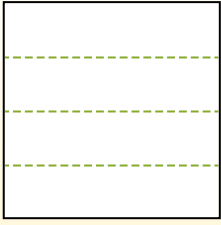


Partitionnez la figure comme indiqué et comptez le nombre de cellules formées.

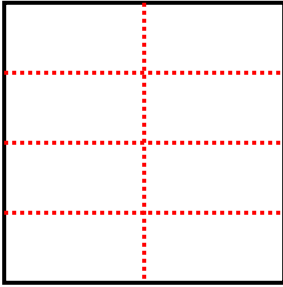
Las filas van de izquierda a derecha.

Las columnas van de arriba a abajo.

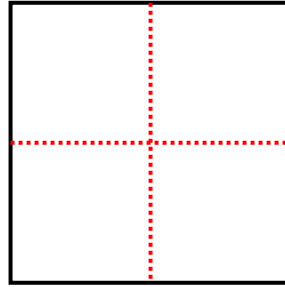
Aqui tem 4 linhas e 5 colunas. Existem 20 caixas no total.



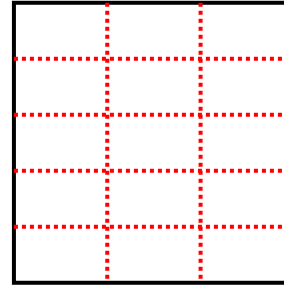
1) 4 lignes  
2 colonnes



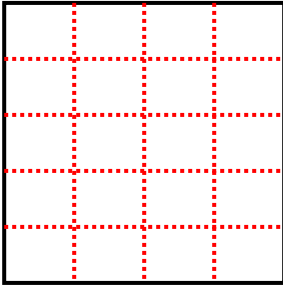
2) 2 lignes  
2 colonnes



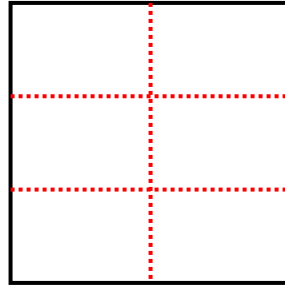
3) 5 lignes  
3 colonnes



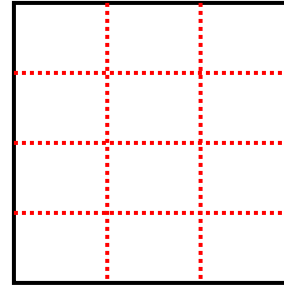
4) 5 lignes  
4 colonnes



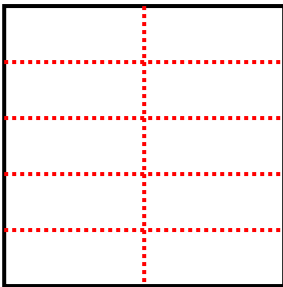
5) 3 lignes  
2 colonnes



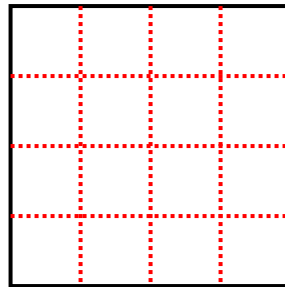
6) 4 lignes  
3 colonnes



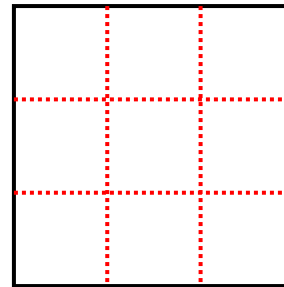
7) 5 lignes  
2 colonnes



8) 4 lignes  
4 colonnes



9) 3 lignes  
3 colonnes



**Réponses**

1. 8

2. 4

3. 15

4. 20

5. 6

6. 12

7. 10

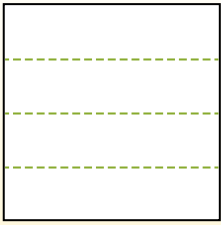
8. 16

9. 9

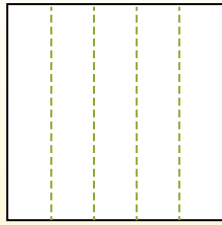


Partitionnez la figure comme indiqué et comptez le nombre de cellules formées.

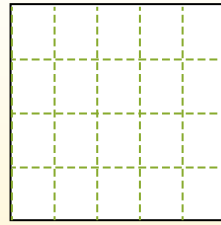
Las filas van de izquierda a derecha.



Las columnas van de arriba a abajo.




Aqui tem 4 linhas e 5 colunas .  
Existem 20 caixas no total.




**Réponses**

- 1. \_\_\_\_\_
- 2. \_\_\_\_\_
- 3. \_\_\_\_\_
- 4. \_\_\_\_\_
- 5. \_\_\_\_\_
- 6. \_\_\_\_\_
- 7. \_\_\_\_\_
- 8. \_\_\_\_\_
- 9. \_\_\_\_\_


1) 5 lignes  
4 colonnes




2) 4 lignes  
4 colonnes



3) 2 lignes  
3 colonnes




4) 4 lignes  
3 colonnes




5) 5 lignes  
5 colonnes




6) 3 lignes  
5 colonnes




7) 5 lignes  
2 colonnes



8) 2 lignes  
5 colonnes



9) 3 lignes  
3 colonnes



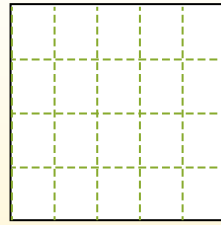
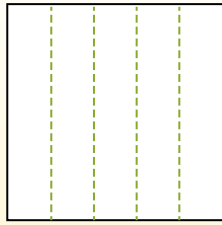
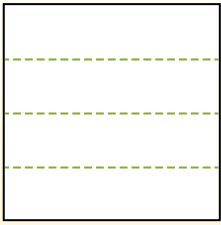


Partitionnez la figure comme indiqué et comptez le nombre de cellules formées.

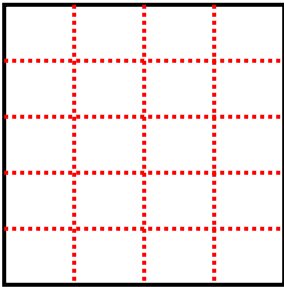
Las filas van de izquierda a derecha.

Las columnas van de arriba a abajo.

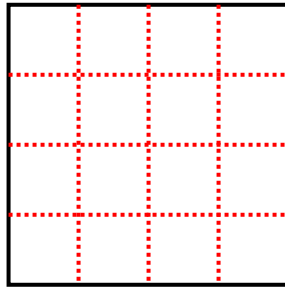
Aqui tem 4 linhas e 5 colunas. Existem 20 caixas no total.



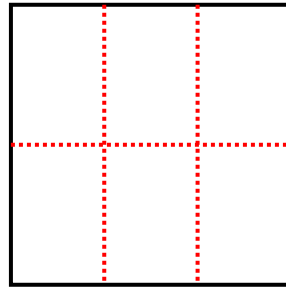
1) 5 lignes  
4 colonnes



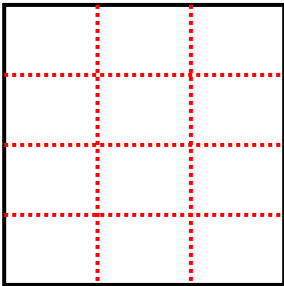
2) 4 lignes  
4 colonnes



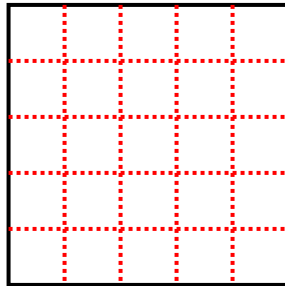
3) 2 lignes  
3 colonnes



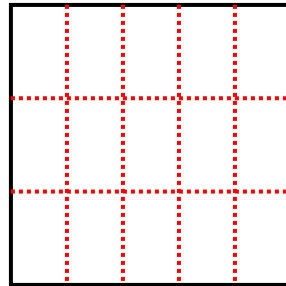
4) 4 lignes  
3 colonnes



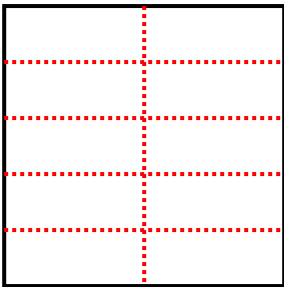
5) 5 lignes  
5 colonnes



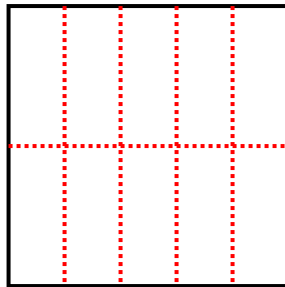
6) 3 lignes  
5 colonnes



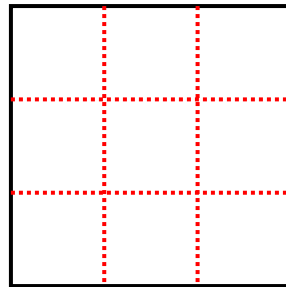
7) 5 lignes  
2 colonnes



8) 2 lignes  
5 colonnes



9) 3 lignes  
3 colonnes



**Réponses**

1. **20**

2. **16**

3. **6**

4. **12**

5. **25**

6. **15**

7. **10**

8. **10**

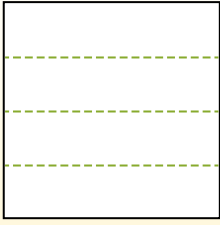
9. **9**



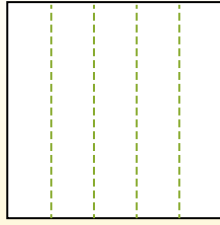


Partitionnez la figure comme indiqué et comptez le nombre de cellules formées.

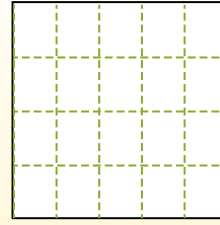
Las filas van de izquierda a derecha.



Las columnas van de arriba a abajo.




Aqui tem 4 linhas e 5 colunas .  
Existem 20 caixas no total.




**Réponses**

- 1. \_\_\_\_\_
- 2. \_\_\_\_\_
- 3. \_\_\_\_\_
- 4. \_\_\_\_\_
- 5. \_\_\_\_\_
- 6. \_\_\_\_\_
- 7. \_\_\_\_\_
- 8. \_\_\_\_\_
- 9. \_\_\_\_\_


1) 3 lignes  
3 colonnes




2) 2 lignes  
3 colonnes




3) 4 lignes  
3 colonnes




4) 5 lignes  
4 colonnes




5) 2 lignes  
5 colonnes




6) 3 lignes  
2 colonnes




7) 2 lignes  
4 colonnes



8) 4 lignes  
4 colonnes



9) 5 lignes  
3 colonnes



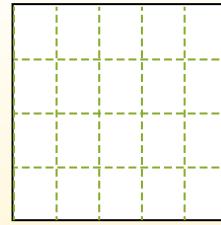
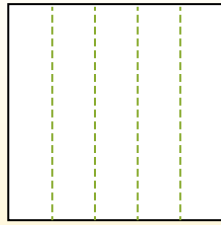
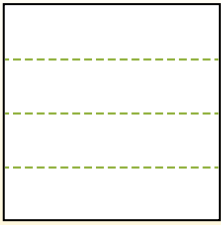


Partitionnez la figure comme indiqué et comptez le nombre de cellules formées.

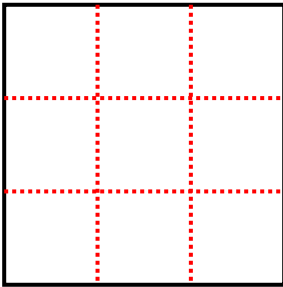
Las filas van de izquierda a derecha.

Las columnas van de arriba a abajo.

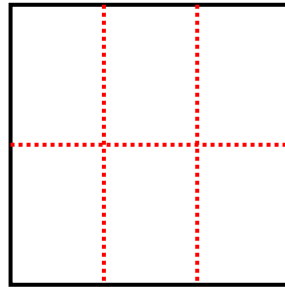
Aqui tem 4 linhas e 5 colunas .  
Existem 20 caixas no total.



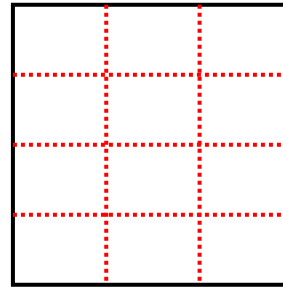
1) 3 lignes  
3 colonnes



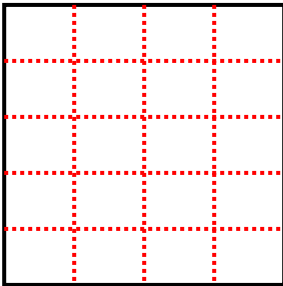
2) 2 lignes  
3 colonnes



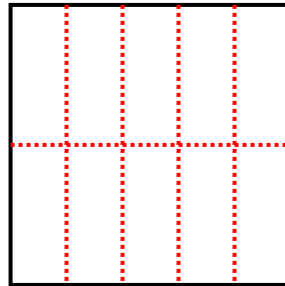
3) 4 lignes  
3 colonnes



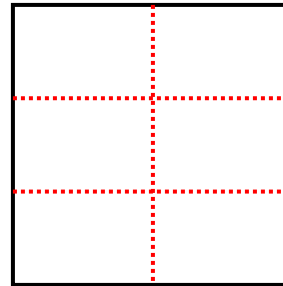
4) 5 lignes  
4 colonnes



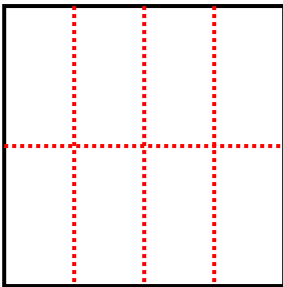
5) 2 lignes  
5 colonnes



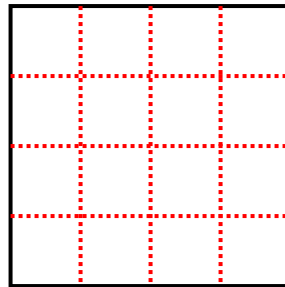
6) 3 lignes  
2 colonnes



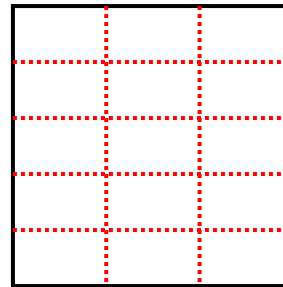
7) 2 lignes  
4 colonnes



8) 4 lignes  
4 colonnes



9) 5 lignes  
3 colonnes



**Réponses**

1. 9

2. 6

3. 12

4. 20

5. 10

6. 6

7. 8

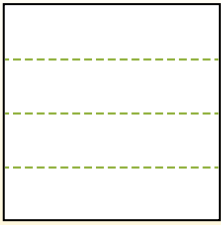
8. 16

9. 15

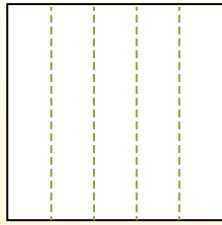


Partitionnez la figure comme indiqué et comptez le nombre de cellules formées.

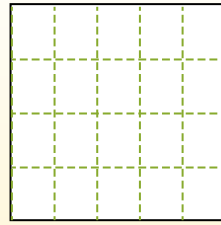
Las filas van de izquierda a derecha.



Las columnas van de arriba a abajo.




Aqui tem 4 linhas e 5 colunas .  
Existem 20 caixas no total.



**Réponses**

- 1. \_\_\_\_\_
- 2. \_\_\_\_\_
- 3. \_\_\_\_\_
- 4. \_\_\_\_\_
- 5. \_\_\_\_\_
- 6. \_\_\_\_\_
- 7. \_\_\_\_\_
- 8. \_\_\_\_\_
- 9. \_\_\_\_\_


1) 2 lignes  
5 colonnes




2) 3 lignes  
5 colonnes




3) 5 lignes  
5 colonnes




4) 4 lignes  
3 colonnes




5) 5 lignes  
3 colonnes




6) 2 lignes  
3 colonnes




7) 5 lignes  
4 colonnes



8) 2 lignes  
2 colonnes



9) 4 lignes  
4 colonnes



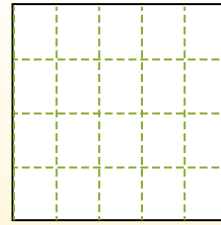
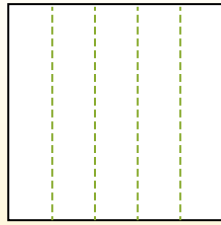
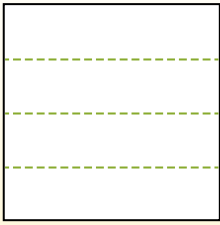


Partitionnez la figure comme indiqué et comptez le nombre de cellules formées.

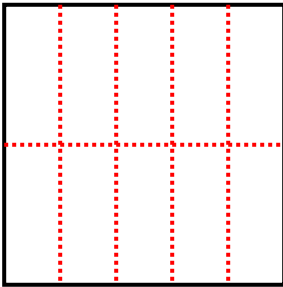
Las filas van de izquierda a derecha.

Las columnas van de arriba a abajo.

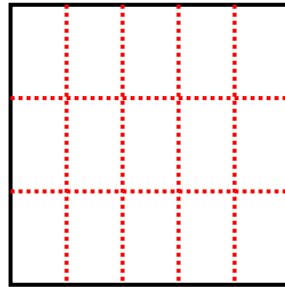
Aqui tem 4 linhas e 5 colunas. Existem 20 caixas no total.



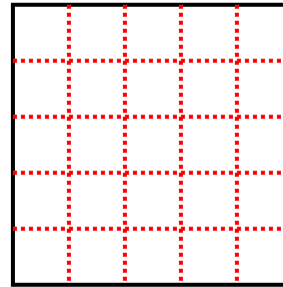
1) 2 lignes  
5 colonnes



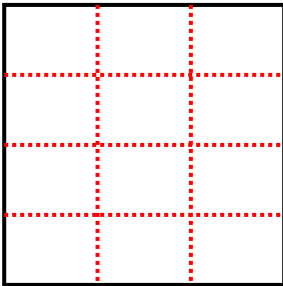
2) 3 lignes  
5 colonnes



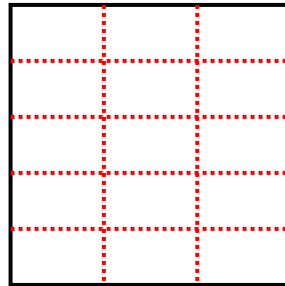
3) 5 lignes  
5 colonnes



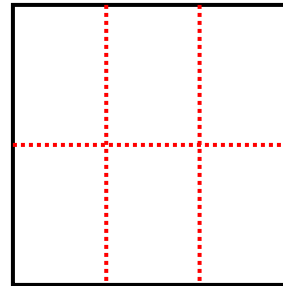
4) 4 lignes  
3 colonnes



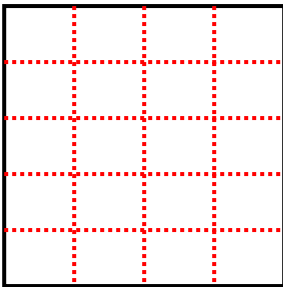
5) 5 lignes  
3 colonnes



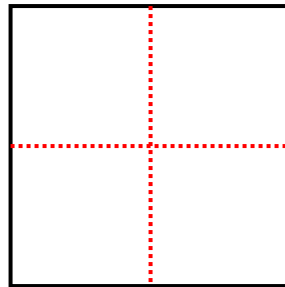
6) 2 lignes  
3 colonnes



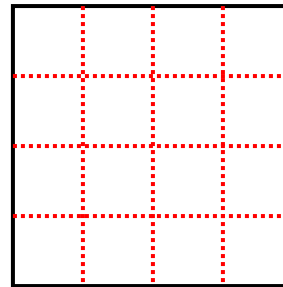
7) 5 lignes  
4 colonnes



8) 2 lignes  
2 colonnes



9) 4 lignes  
4 colonnes



**Réponses**

1. **10**

2. **15**

3. **25**

4. **12**

5. **15**

6. **6**

7. **20**

8. **4**

9. **16**