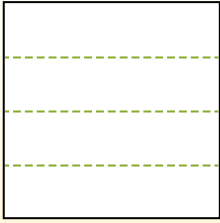


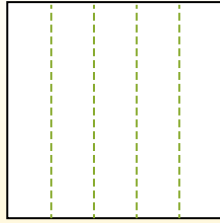


Partitionnez la figure comme indiqué et comptez le nombre de cellules formées.

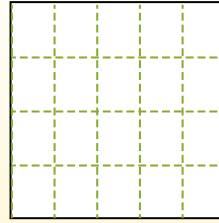
Las filas van de izquierda a derecha.




Las columnas van de arriba a abajo.




Aqui tem 4 linhas e 5 colunas .
Existem 20 caixas no total.




1) 5 lignes
2 colonnes




2) 3 lignes
4 colonnes




3) 3 lignes
3 colonnes




4) 3 lignes
2 colonnes




5) 5 lignes
4 colonnes




6) 2 lignes
4 colonnes




7) 2 lignes
3 colonnes



8) 5 lignes
5 colonnes



9) 4 lignes
3 colonnes



Réponses

- 1. _____
- 2. _____
- 3. _____
- 4. _____
- 5. _____
- 6. _____
- 7. _____
- 8. _____
- 9. _____

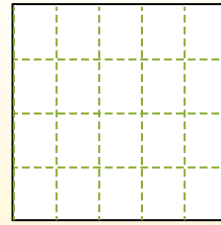
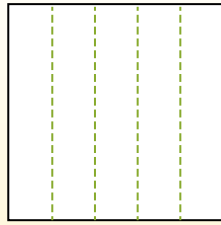
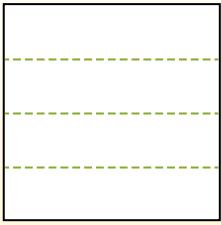


Partitionnez la figure comme indiqué et comptez le nombre de cellules formées.

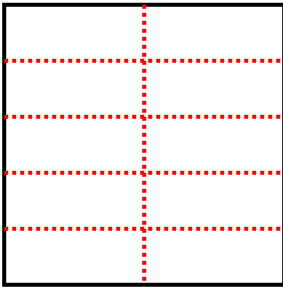
Las filas van de izquierda a derecha.

Las columnas van de arriba a abajo.

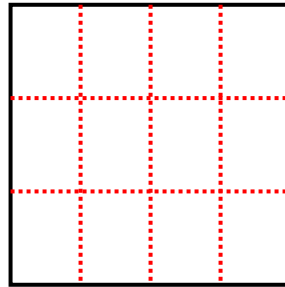
Aqui tem 4 linhas e 5 colunas. Existem 20 caixas no total.



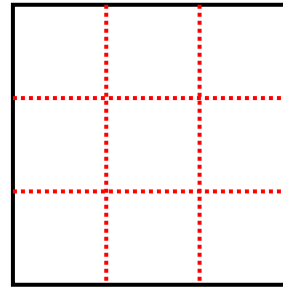
1) 5 lignes
2 colonnes



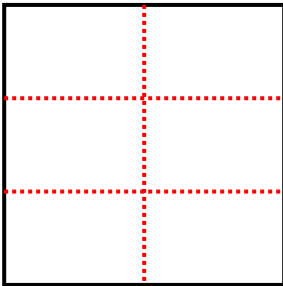
2) 3 lignes
4 colonnes



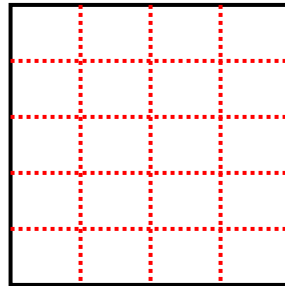
3) 3 lignes
3 colonnes



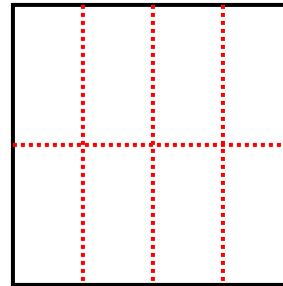
4) 3 lignes
2 colonnes



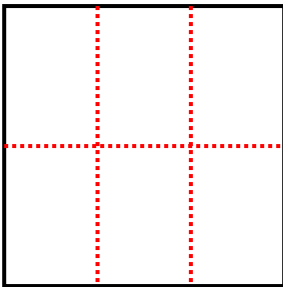
5) 5 lignes
4 colonnes



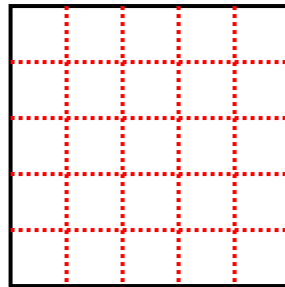
6) 2 lignes
4 colonnes



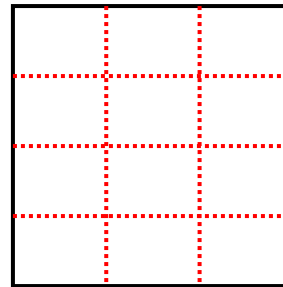
7) 2 lignes
3 colonnes



8) 5 lignes
5 colonnes



9) 4 lignes
3 colonnes



Réponses

1. **10**

2. **12**

3. **9**

4. **6**

5. **20**

6. **8**

7. **6**

8. **25**

9. **12**