



Exprimez chaque groupes d'objets en multiplication.

Réponses

Ex)

Ex. $6 \times 3 = 18$

1)

1. _____

2. _____

3. _____

2)

4. _____

5. _____

6. _____

3)

7. _____

8. _____

4)

5)

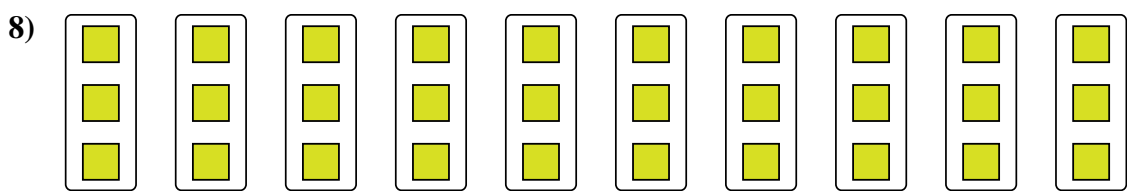

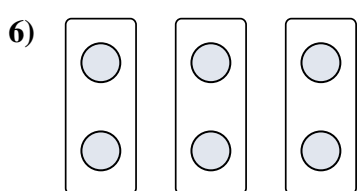
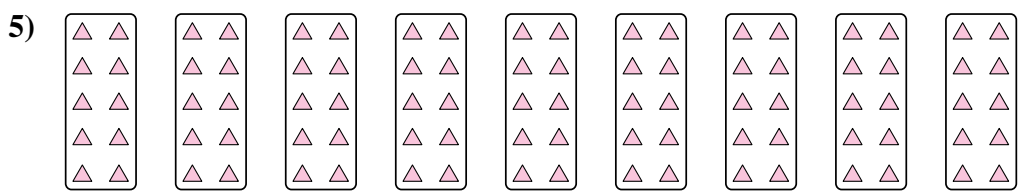
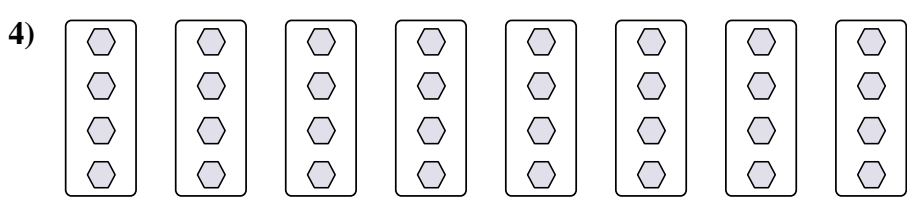

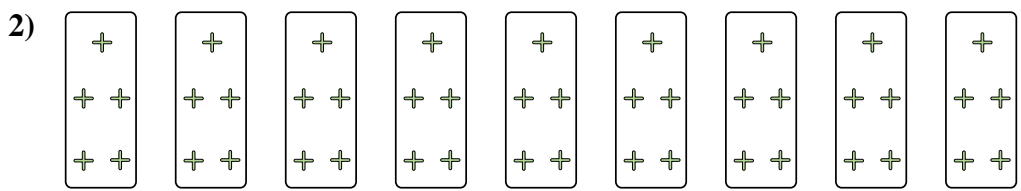
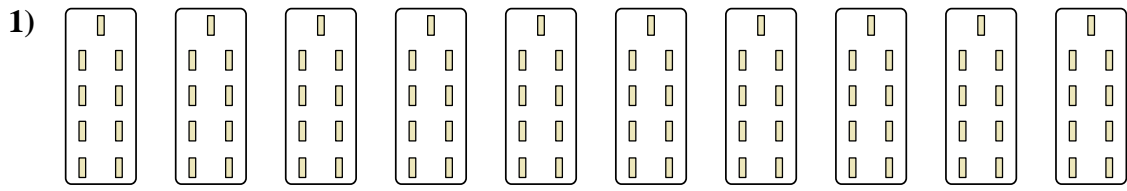

6)

7)

8)



Exprimez chaque groupes d'objets en multiplication.



Réponses

Ex. 6×3=18

1. 10×9=90

2. 9×5=45

3. 5×2=10

4. 8×4=32

5. 9×10=90

6. 3×2=6

7. 4×9=36

8. 10×3=30