



Exprimez chaque groupes d'objets en multiplication.

**Réponses**

Ex)

Ex.  $7 \times 7 = 49$

1)

1. \_\_\_\_\_

2. \_\_\_\_\_

2)

3. \_\_\_\_\_

4. \_\_\_\_\_

3)

5. \_\_\_\_\_

6. \_\_\_\_\_

7. \_\_\_\_\_

4)

8. \_\_\_\_\_

5)

6)


7)

8)

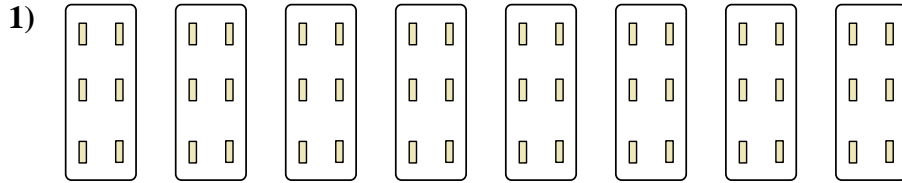


Exprimez chaque groupes d'objets en multiplication.

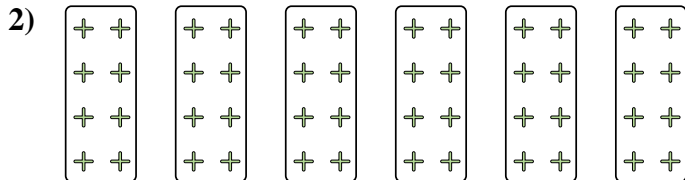
**Réponses**



Ex.  $7 \times 7 = 49$




1.  $8 \times 6 = 48$



2.  $6 \times 8 = 48$

3.  $5 \times 2 = 10$

4.  $10 \times 8 = 80$



5.  $8 \times 2 = 16$

6.  $9 \times 10 = 90$

7.  $3 \times 8 = 24$

8.  $8 \times 9 = 72$

