



Exprimez chaque groupes d'objets en multiplication.

**Réponses**

Ex)

Ex.  $9 \times 5 = 45$

1)

1. \_\_\_\_\_

2. \_\_\_\_\_

2)

3. \_\_\_\_\_

4. \_\_\_\_\_

3)

5. \_\_\_\_\_

6. \_\_\_\_\_

4)

7. \_\_\_\_\_

8. \_\_\_\_\_

5)

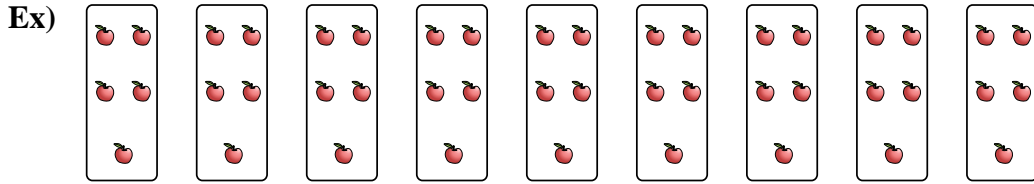
6)

7)

8)

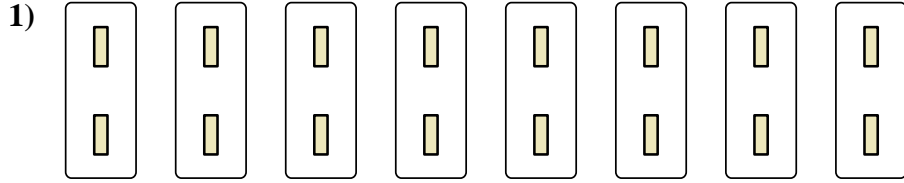


Exprimez chaque groupes d'objets en multiplication.

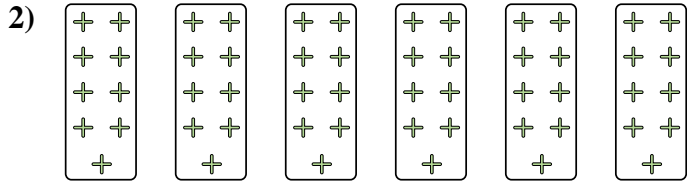


**Réponses**

Ex. 9×5=45




1. 8×2=16



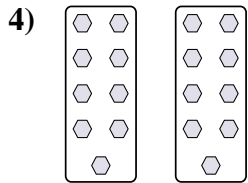
2. 6×9=54

3. 3×7=21



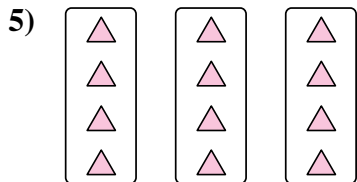
4. 2×9=18

5. 3×4=12



6. 8×10=80

7. 10×9=90



8. 2×10=20

