


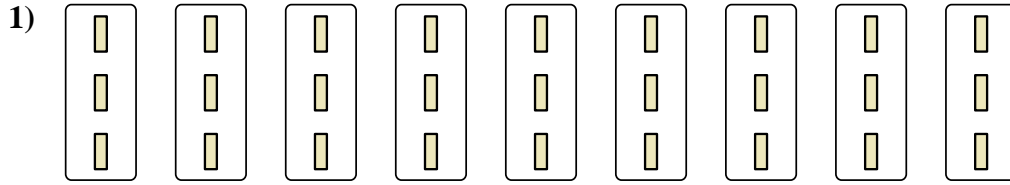


Exprimez chaque groupes d'objets en multiplication.

**Réponses**

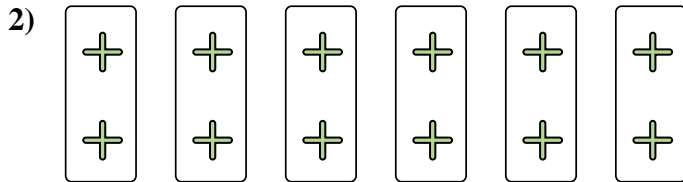


Ex.  $7 \times 9 = 63$




1. \_\_\_\_\_

2. \_\_\_\_\_



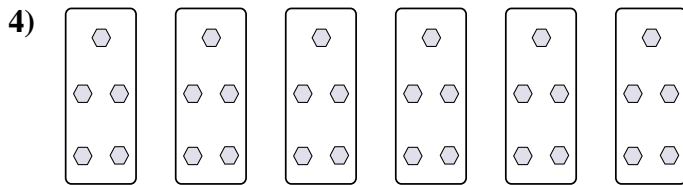
3. \_\_\_\_\_

4. \_\_\_\_\_





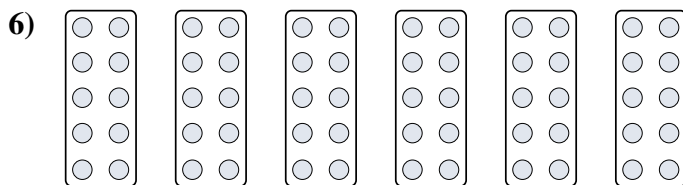
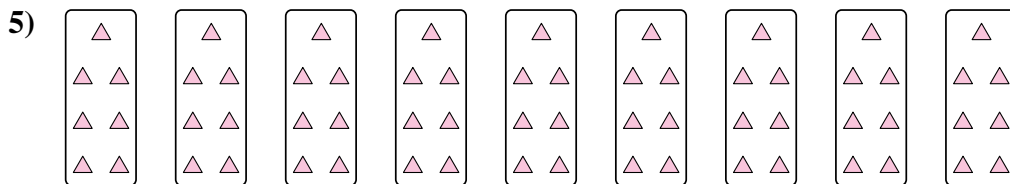
5. \_\_\_\_\_

6. \_\_\_\_\_




7. \_\_\_\_\_

8. \_\_\_\_\_



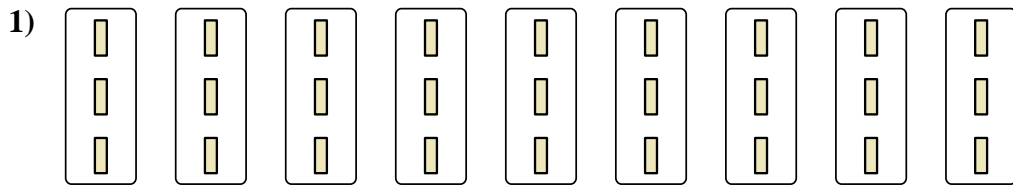


Exprimez chaque groupes d'objets en multiplication.



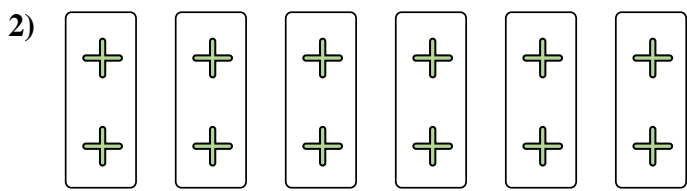
**Réponses**

Ex. 7×9=63




1. 9×3=27

2. 6×2=12



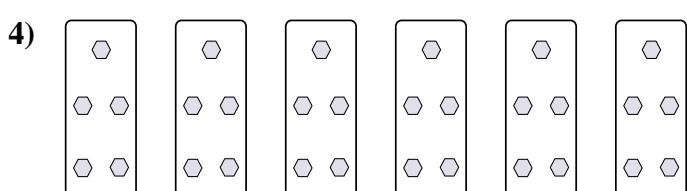
3. 9×4=36

4. 6×5=30





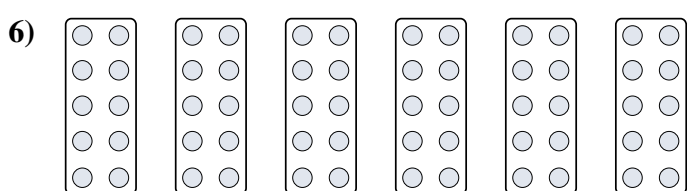
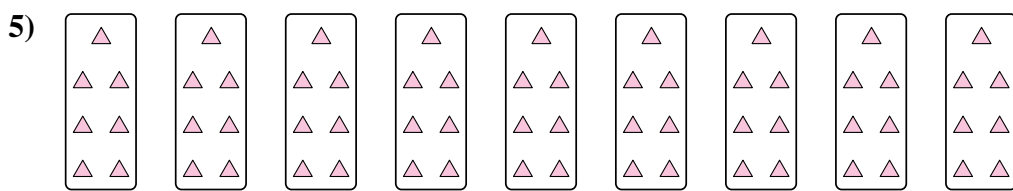
5. 9×7=63

6. 6×10=60



7. 7×6=42


8. 4×10=40



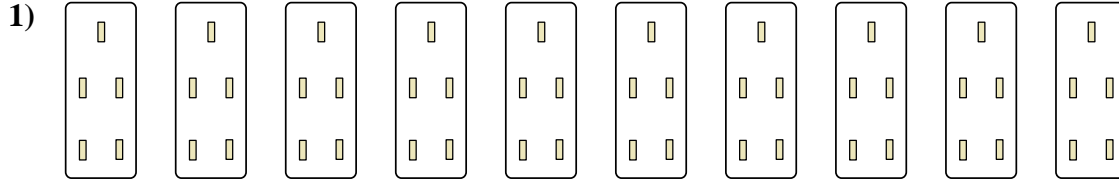


Exprimez chaque groupes d'objets en multiplication.

**Réponses**

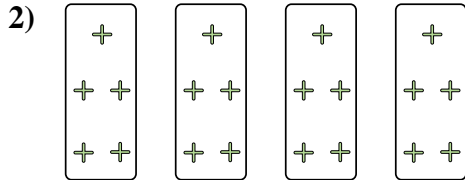


Ex. **5×8=40**




1. \_\_\_\_\_

2. \_\_\_\_\_



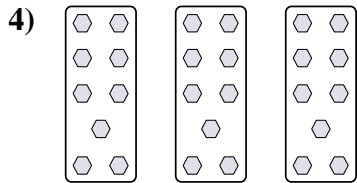
3. \_\_\_\_\_

4. \_\_\_\_\_



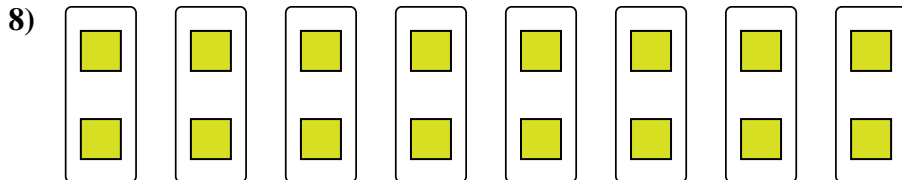
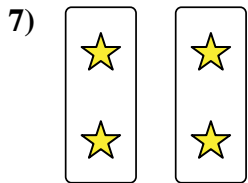
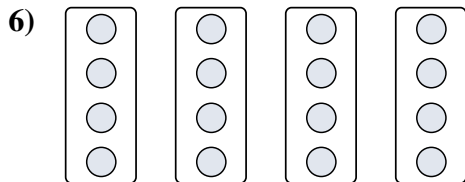
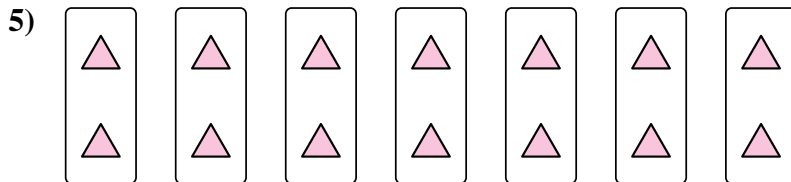
5. \_\_\_\_\_

6. \_\_\_\_\_



7. \_\_\_\_\_


8. \_\_\_\_\_



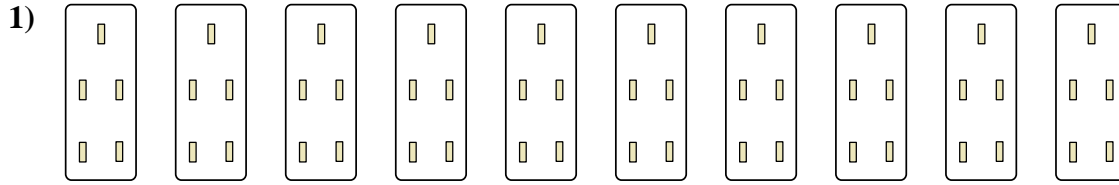


Exprimez chaque groupes d'objets en multiplication.

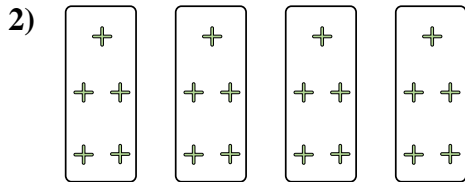
**Réponses**



Ex. 5×8=40




1. 10×5=50



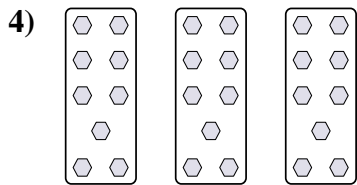
2. 4×5=20

3. 2×8=16



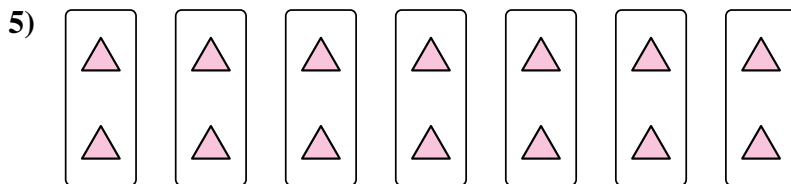
4. 3×9=27

5. 7×2=14

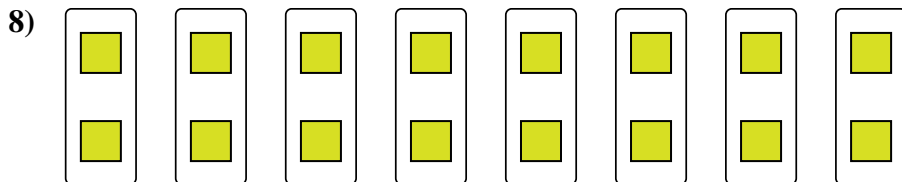
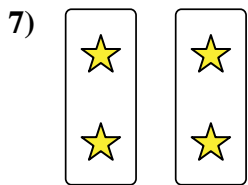
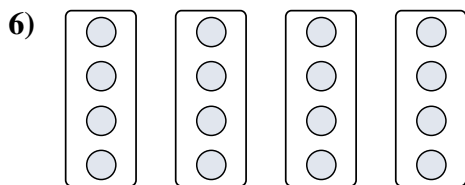


6. 4×4=16

7. 2×2=4



8. 8×2=16






Exprimez chaque groupes d'objets en multiplication.

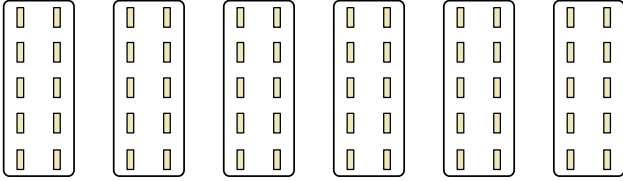
**Réponses**

Ex)



Ex. **2x5=10**

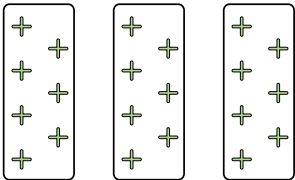
1)



1. \_\_\_\_\_

2. \_\_\_\_\_


2)



3. \_\_\_\_\_

4. \_\_\_\_\_

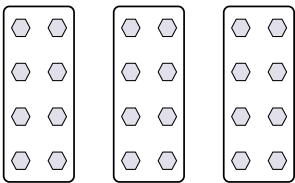
3)



5. \_\_\_\_\_

6. \_\_\_\_\_

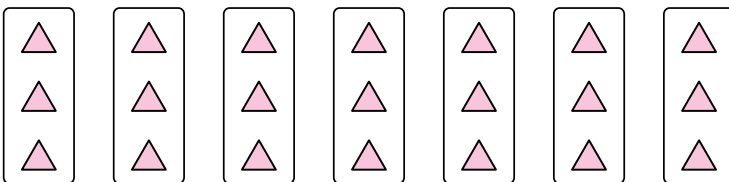
4)



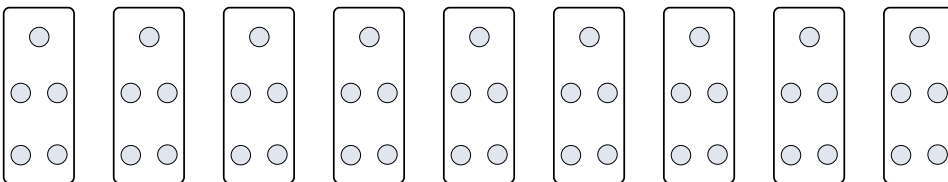
7. \_\_\_\_\_

8. \_\_\_\_\_

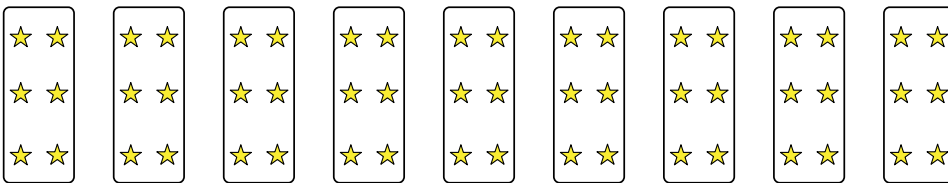
5)



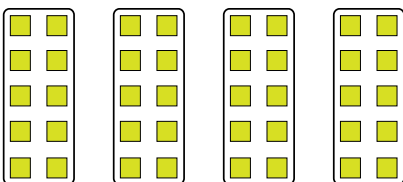
6)



7)



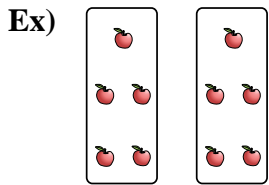
8)



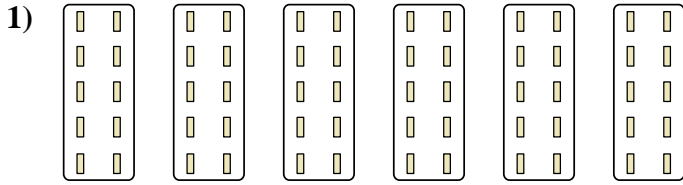


Exprimez chaque groupes d'objets en multiplication.

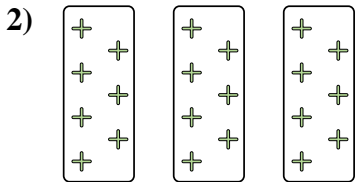
**Réponses**




Ex. 2×5=10



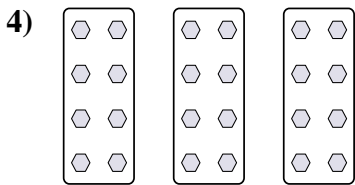
1. 6×10=60



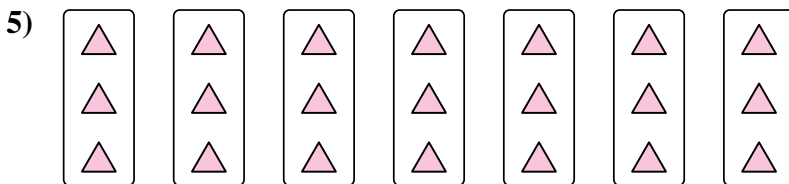
2. 3×7=21



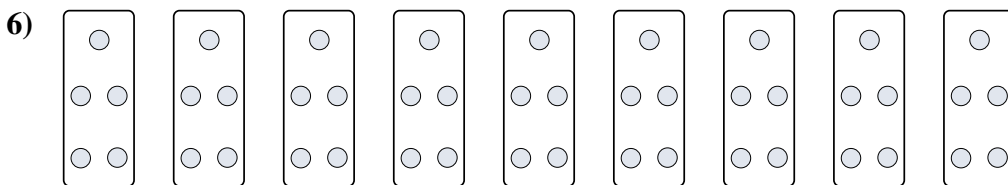
3. 10×3=30




4. 3×8=24



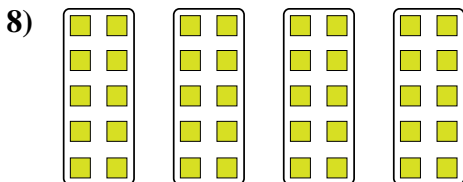
5. 7×3=21



6. 9×5=45



7. 9×6=54



8. 4×10=40



Exprimez chaque groupes d'objets en multiplication.

**Réponses**

Ex)

Ex.  $8 \times 5 = 40$

1)

1. \_\_\_\_\_

2. \_\_\_\_\_

2)

3. \_\_\_\_\_

4. \_\_\_\_\_

3)

5. \_\_\_\_\_

6. \_\_\_\_\_

4)

7. \_\_\_\_\_

8. \_\_\_\_\_

5)


6)

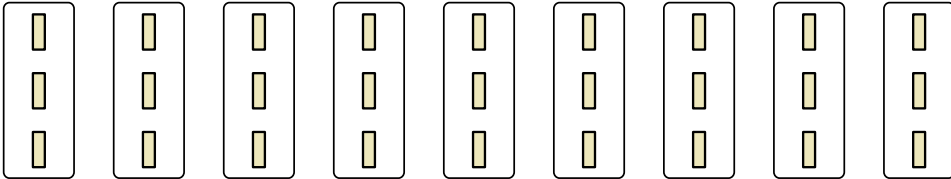
7)

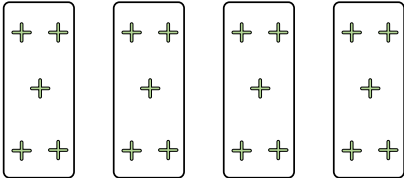
8)




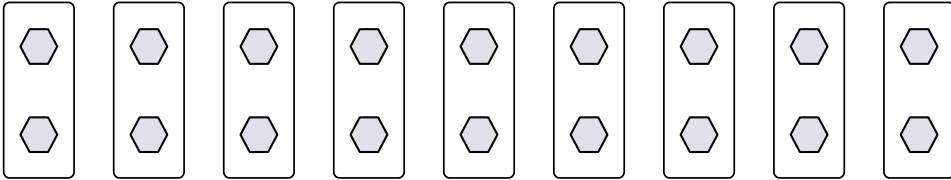
Exprimez chaque groupes d'objets en multiplication.

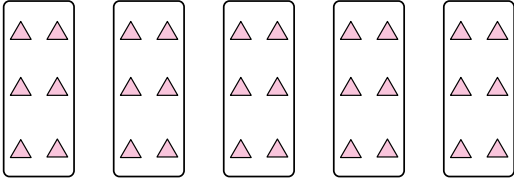
Ex) 

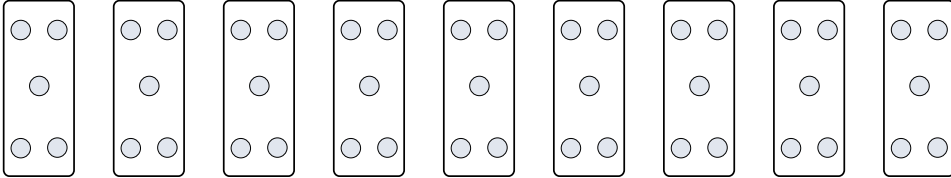
1) 


2) 


3) 

4) 

5) 

6) 

7) 

8) 

**Réponses**

- Ex. 8×5=40
1. 9×3=27
2. 4×5=20
3. 5×8=40
4. 10×2=20
5. 5×6=30
6. 9×5=45
7. 8×2=16
8. 7×8=56





Exprimez chaque groupes d'objets en multiplication.

**Réponses**

Ex)

Ex. 10×10=100

1)

1. \_\_\_\_\_

2. \_\_\_\_\_

3. \_\_\_\_\_

2)

4. \_\_\_\_\_

5. \_\_\_\_\_

3)

6. \_\_\_\_\_

7. \_\_\_\_\_

8. \_\_\_\_\_

4)

5)

6)

7)

8)



Exprimez chaque groupes d'objets en multiplication.

Ex)

1)

2)

3)

4)

5)

6)

7)

8)

**Réponses**

- Ex. 10×10=100
1. 10×7=70
2. 4×7=28
3. 10×6=60
4. 8×2=16
5. 3×6=18
6. 6×2=12
7. 5×2=10
8. 5×7=35



Exprimez chaque groupes d'objets en multiplication.

**Réponses**

Ex)

Ex. **9×6=54**

1)

1. \_\_\_\_\_

2. \_\_\_\_\_

2)

3. \_\_\_\_\_

4. \_\_\_\_\_

3)

5. \_\_\_\_\_

6. \_\_\_\_\_

7. \_\_\_\_\_

4)

8. \_\_\_\_\_

5)

6)

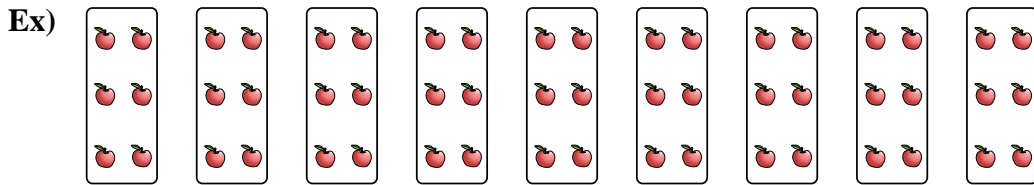
7)

8)

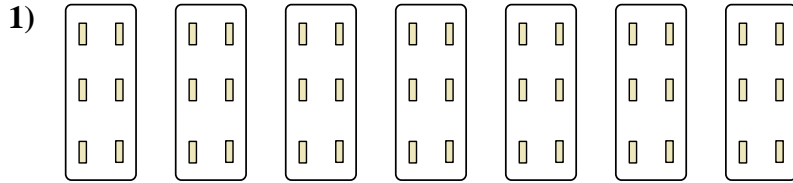


Exprimez chaque groupes d'objets en multiplication.


**Réponses**



Ex. 9×6=54




1. 7×6=42



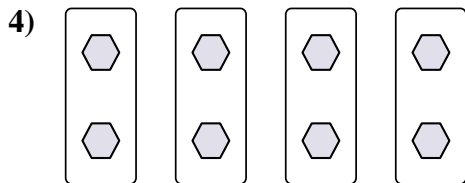
2. 7×10=70

3. 8×2=16



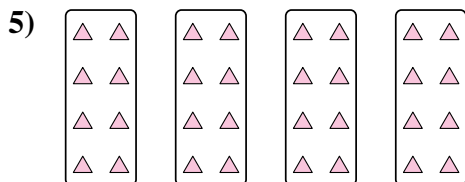
4. 4×2=8

5. 4×8=32



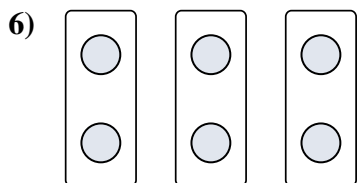


6. 3×2=6

7. 10×7=70



8. 4×10=40





Exprimez chaque groupes d'objets en multiplication.

**Réponses**

Ex)

Ex.  $7 \times 7 = 49$

1)

1. \_\_\_\_\_

2. \_\_\_\_\_

2)

3. \_\_\_\_\_

4. \_\_\_\_\_

3)

5. \_\_\_\_\_

6. \_\_\_\_\_

4)

7. \_\_\_\_\_

8. \_\_\_\_\_

5)


6)

7)

8)

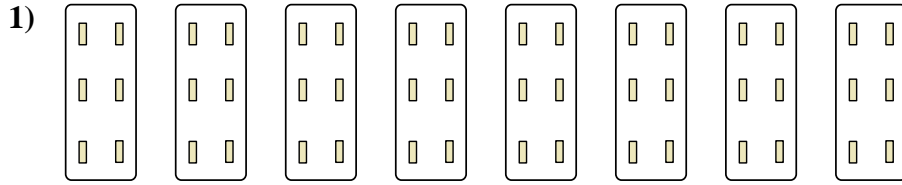


Exprimez chaque groupes d'objets en multiplication.



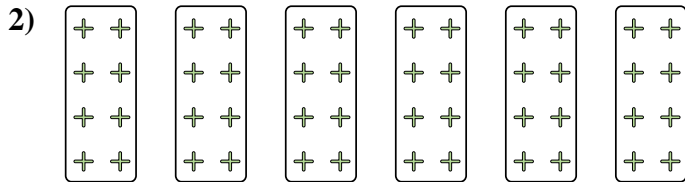
**Réponses**

Ex. 7×7=49




1. 8×6=48

2. 6×8=48



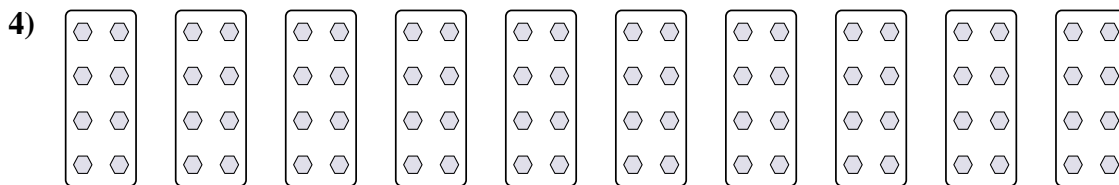
3. 5×2=10

4. 10×8=80



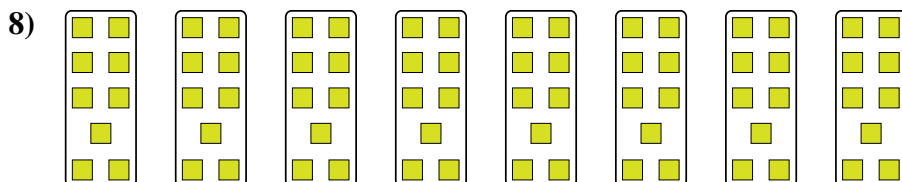

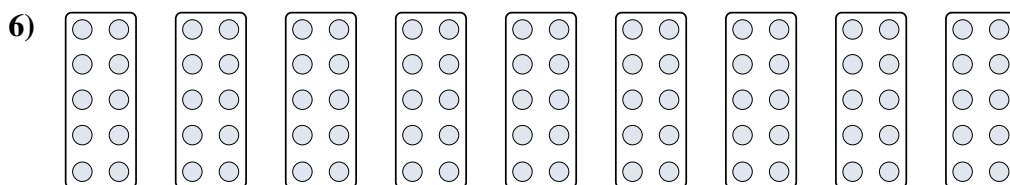
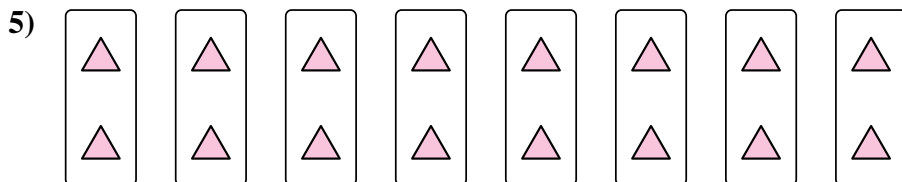
5. 8×2=16

6. 9×10=90



7. 3×8=24

8. 8×9=72





Exprimez chaque groupes d'objets en multiplication.

**Réponses**

Ex)

Ex.  $6 \times 7 = 42$

1)

1. \_\_\_\_\_

2. \_\_\_\_\_

2)

3. \_\_\_\_\_

4. \_\_\_\_\_

3)

5. \_\_\_\_\_

6. \_\_\_\_\_

4)

7. \_\_\_\_\_

8. \_\_\_\_\_

5)

6)


7)

8)

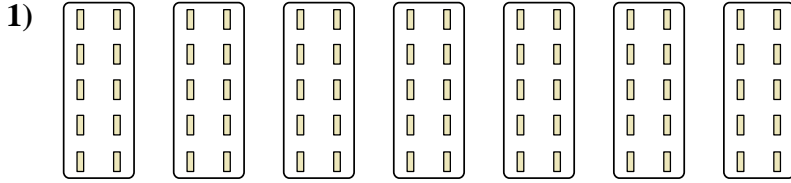


Exprimez chaque groupes d'objets en multiplication.

**Réponses**

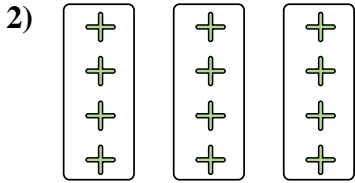


Ex. 6×7=42




1. 7×10=70

2. 3×4=12



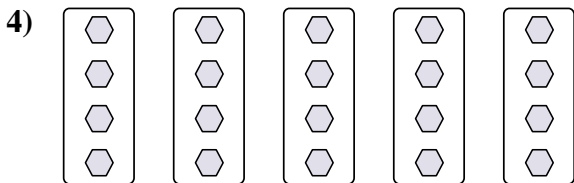
3. 3×7=21

4. 5×4=20





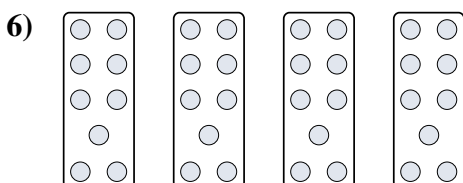
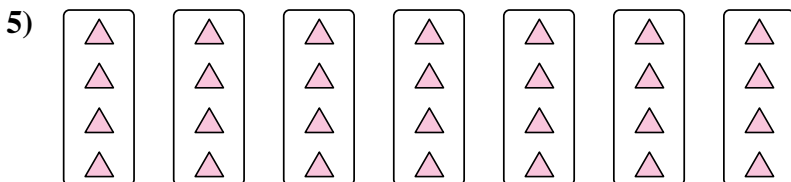
5. 7×4=28

6. 4×9=36



7. 4×10=40

8. 2×8=16







Exprimez chaque groupes d'objets en multiplication.

**Réponses**

Ex)

Ex.  $9 \times 5 = 45$

1)

1. \_\_\_\_\_

2. \_\_\_\_\_

2)

3. \_\_\_\_\_

4. \_\_\_\_\_

3)

5. \_\_\_\_\_

6. \_\_\_\_\_

4)

7. \_\_\_\_\_

8. \_\_\_\_\_

5)

6)

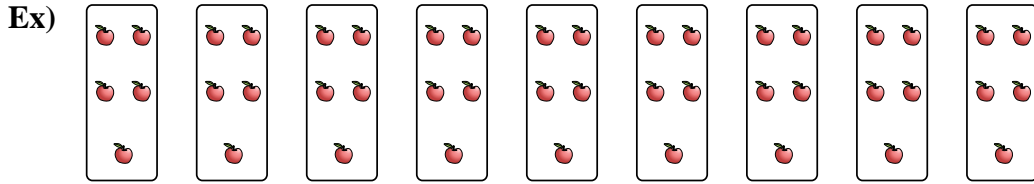
7)

8)

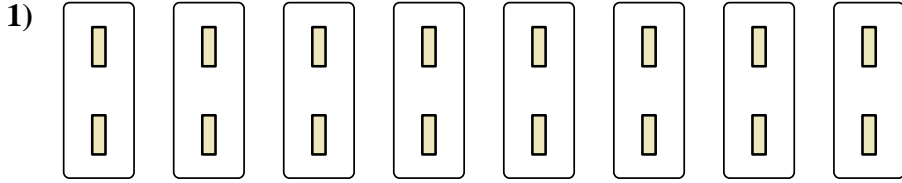


Exprimez chaque groupes d'objets en multiplication.

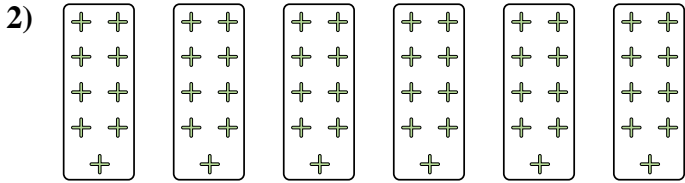
**Réponses**



Ex.  $9 \times 5 = 45$




1.  $8 \times 2 = 16$



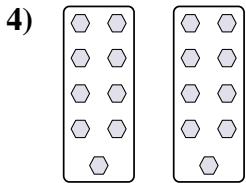
2.  $6 \times 9 = 54$

3.  $3 \times 7 = 21$



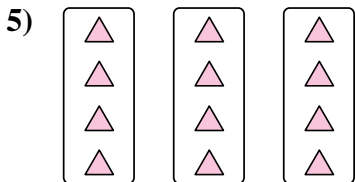
4.  $2 \times 9 = 18$

5.  $3 \times 4 = 12$



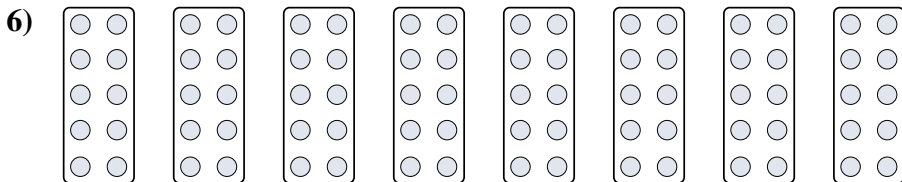


6.  $8 \times 10 = 80$

7.  $10 \times 9 = 90$



8.  $2 \times 10 = 20$





Exprimez chaque groupes d'objets en multiplication.

**Réponses**

Ex)

Ex.  $6 \times 3 = 18$

1. \_\_\_\_\_

1)

2. \_\_\_\_\_

3. \_\_\_\_\_

2)

4. \_\_\_\_\_

5. \_\_\_\_\_

3)

6. \_\_\_\_\_

7. \_\_\_\_\_

4)

8. \_\_\_\_\_

5)

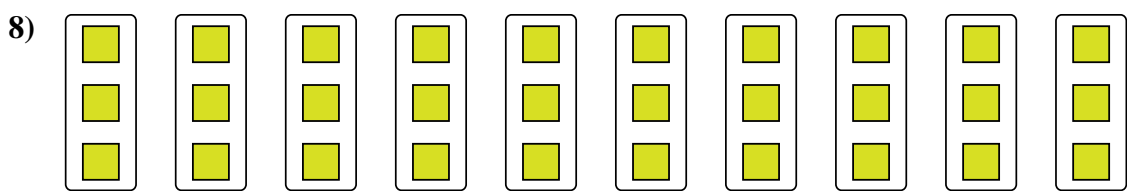

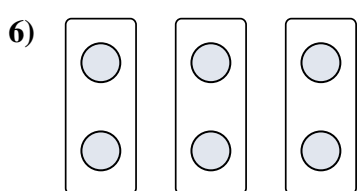
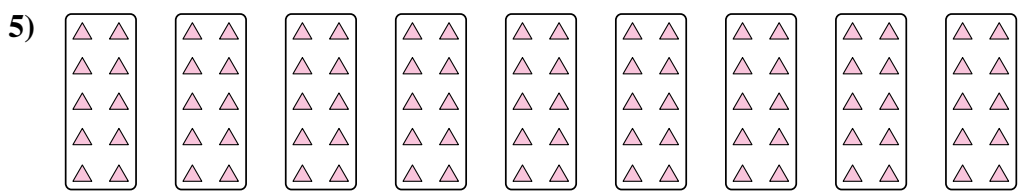
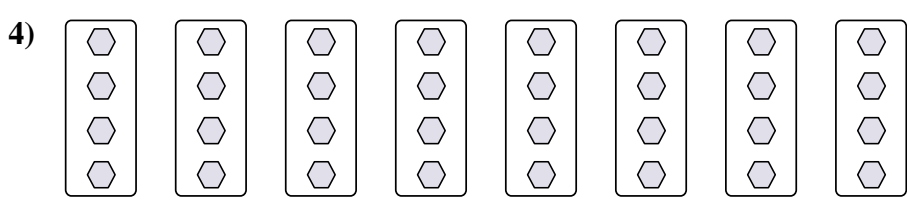

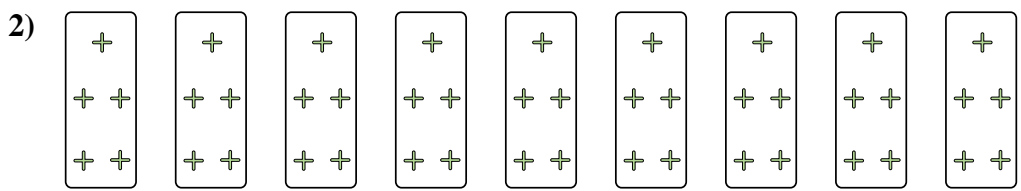
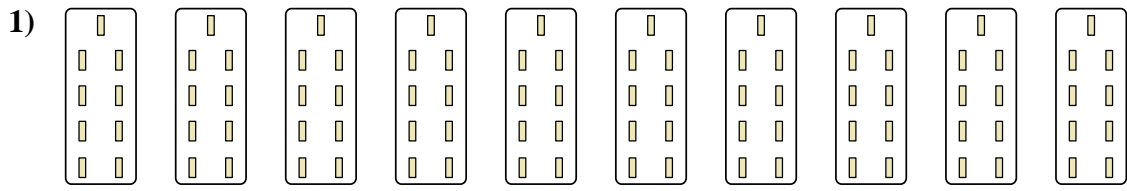

6)

7)

8)



Exprimez chaque groupes d'objets en multiplication.



**Réponses**

Ex. 6×3=18

1. 10×9=90

2. 9×5=45

3. 5×2=10

4. 8×4=32

5. 9×10=90

6. 3×2=6

7. 4×9=36

8. 10×3=30