


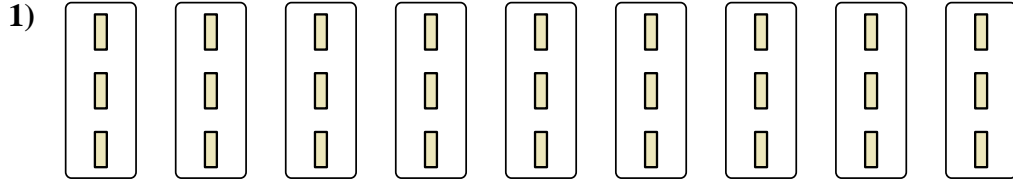


Exprimez chaque groupes d'objets en multiplication.

**Réponses**




Ex. **7×9=63**




1. \_\_\_\_\_

2. \_\_\_\_\_



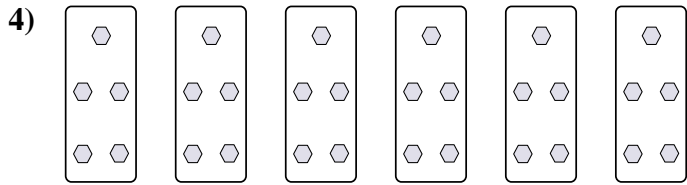
3. \_\_\_\_\_

4. \_\_\_\_\_




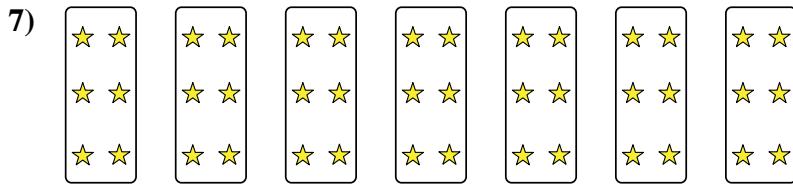
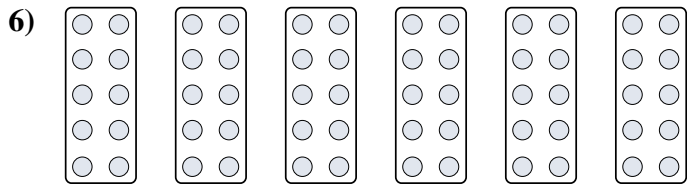
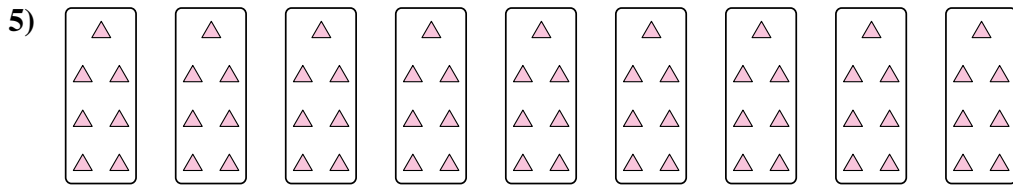
5. \_\_\_\_\_

6. \_\_\_\_\_




7. \_\_\_\_\_

8. \_\_\_\_\_



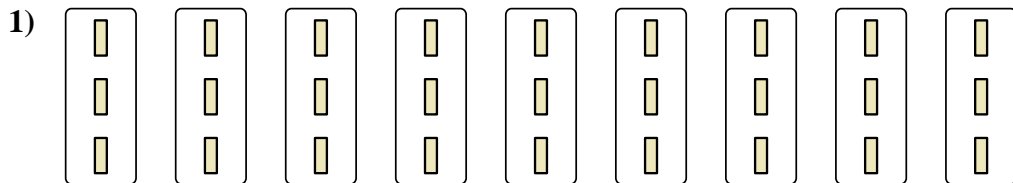


Exprimez chaque groupes d'objets en multiplication.




**Réponses**

Ex. 7×9=63




1. 9×3=27



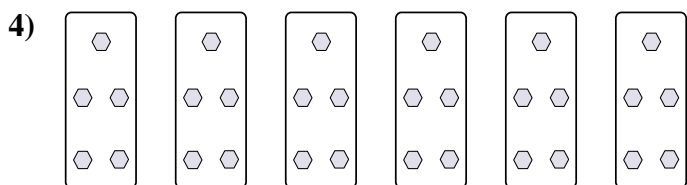
2. 6×2=12

3. 9×4=36



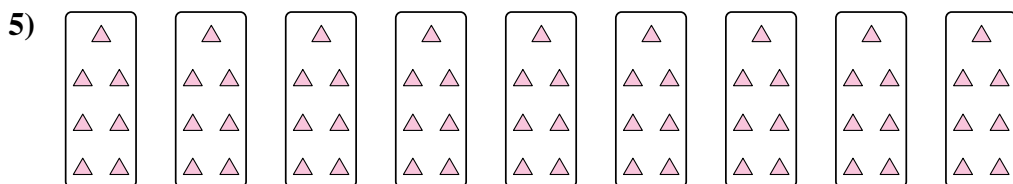
4. 6×5=30

5. 9×7=63



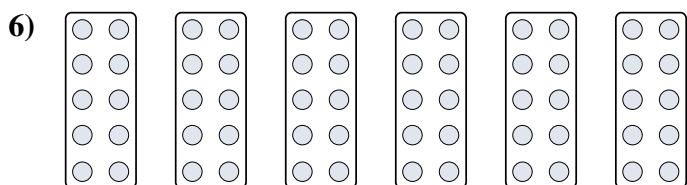


6. 6×10=60

7. 7×6=42




8. 4×10=40



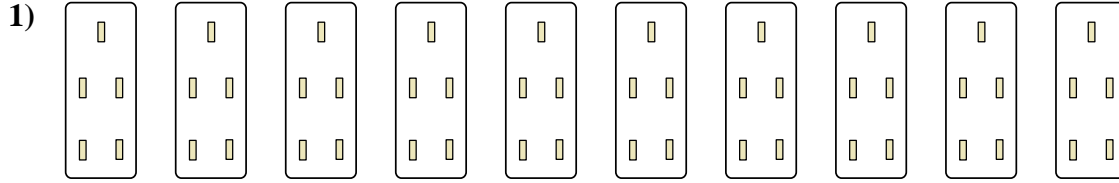


Exprimez chaque groupes d'objets en multiplication.

**Réponses**

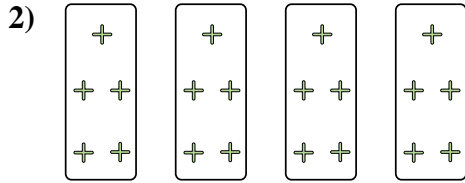


Ex. **5×8=40**




1. \_\_\_\_\_

2. \_\_\_\_\_



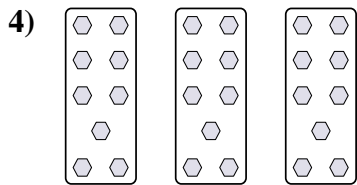
3. \_\_\_\_\_

4. \_\_\_\_\_



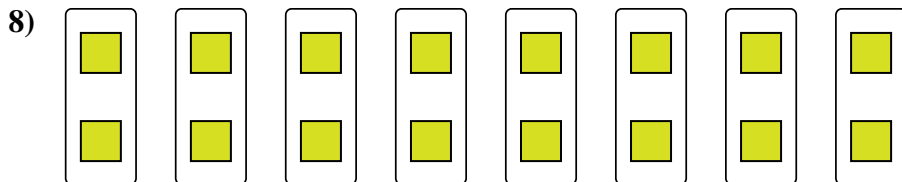
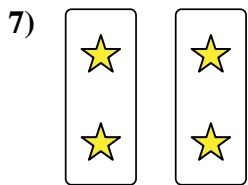
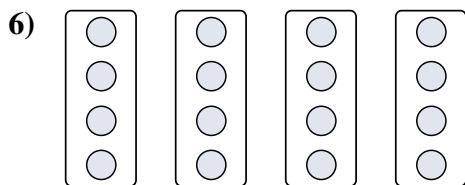
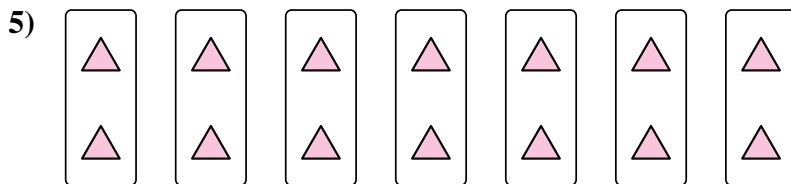
5. \_\_\_\_\_

6. \_\_\_\_\_



7. \_\_\_\_\_


8. \_\_\_\_\_



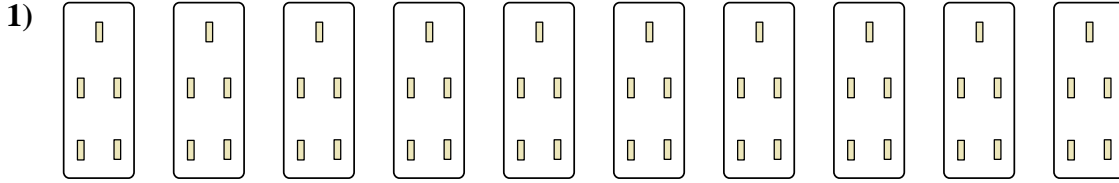


Exprimez chaque groupes d'objets en multiplication.

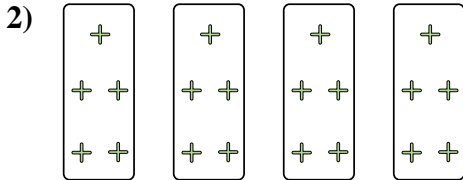
**Réponses**



Ex.  $5 \times 8 = 40$




1.  $10 \times 5 = 50$



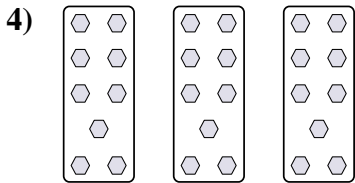
2.  $4 \times 5 = 20$

3.  $2 \times 8 = 16$



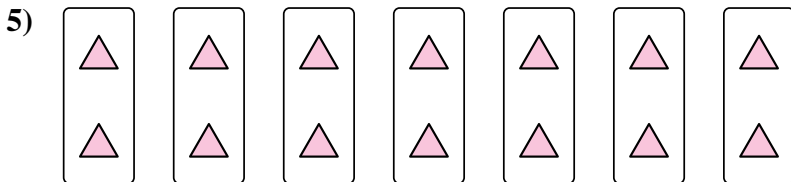
4.  $3 \times 9 = 27$

5.  $7 \times 2 = 14$

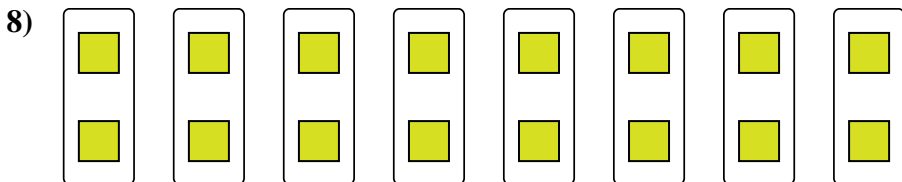
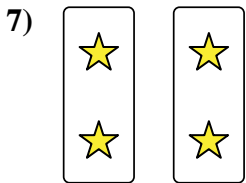
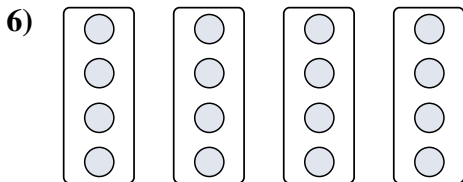


6.  $4 \times 4 = 16$

7.  $2 \times 2 = 4$



8.  $8 \times 2 = 16$






Exprimez chaque groupes d'objets en multiplication.

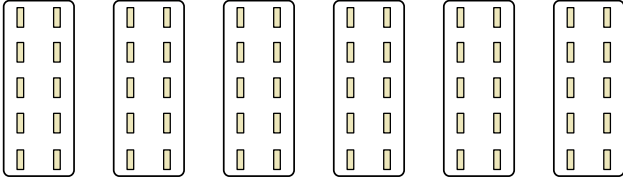
**Réponses**

Ex)



Ex. **2x5=10**

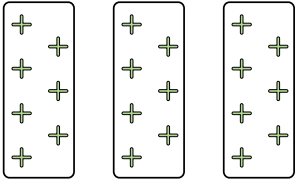
1)



1. \_\_\_\_\_

2. \_\_\_\_\_


2)



3. \_\_\_\_\_

4. \_\_\_\_\_

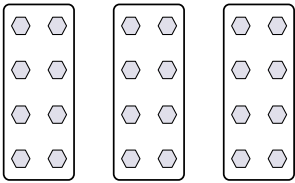
3)



5. \_\_\_\_\_

6. \_\_\_\_\_

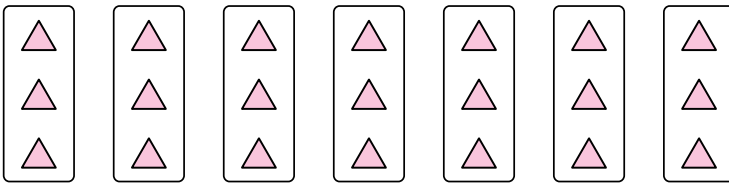
4)



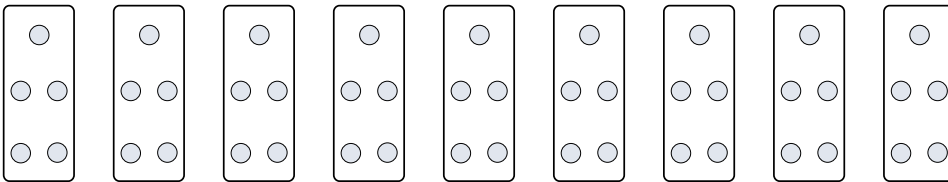
7. \_\_\_\_\_

8. \_\_\_\_\_

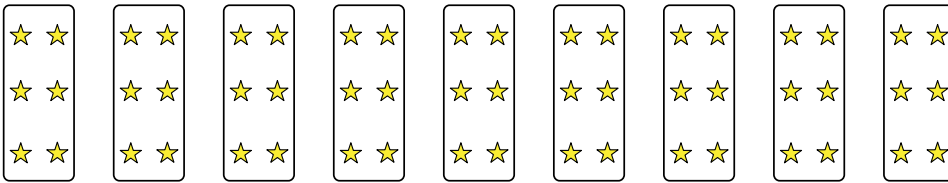
5)



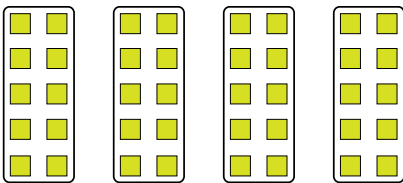
6)



7)



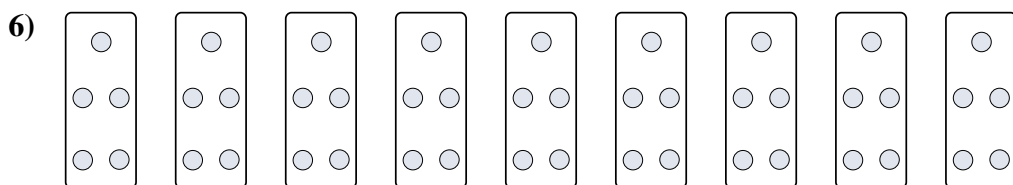
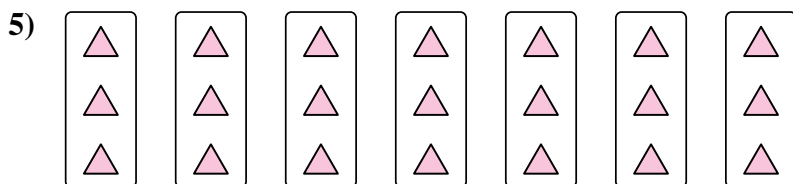
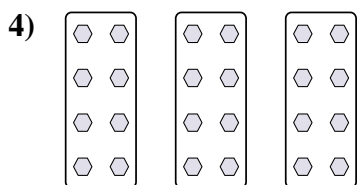

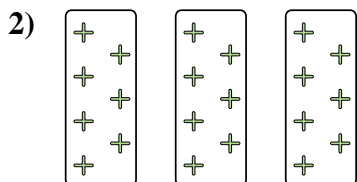
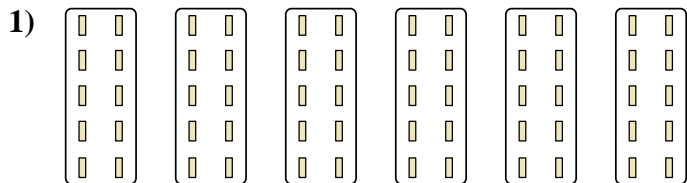
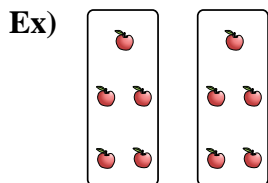


8)





Exprimez chaque groupes d'objets en multiplication.



**Réponses**

Ex. 2×5=10

1. 6×10=60

2. 3×7=21

3. 10×3=30

4. 3×8=24

5. 7×3=21

6. 9×5=45

7. 9×6=54

8. 4×10=40



Exprimez chaque groupes d'objets en multiplication.

**Réponses**

Ex)

Ex.  $8 \times 5 = 40$

1. \_\_\_\_\_

1)

2. \_\_\_\_\_

2)

3. \_\_\_\_\_

4. \_\_\_\_\_

3)

5. \_\_\_\_\_

6. \_\_\_\_\_

4)

7. \_\_\_\_\_

8. \_\_\_\_\_

5)


6)

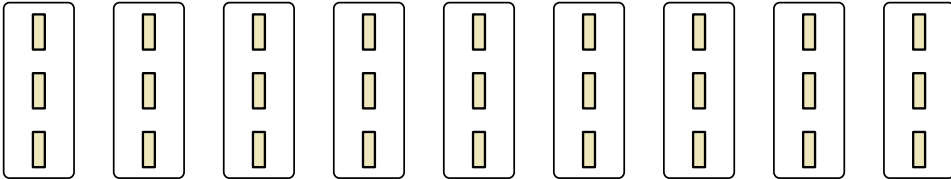
7)

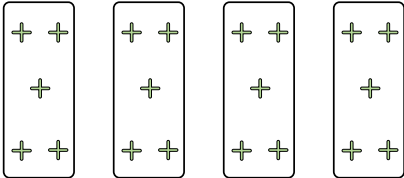
8)




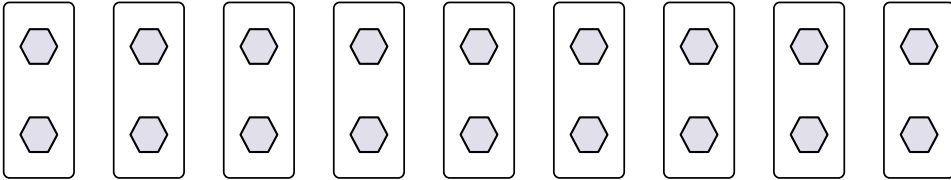
Exprimez chaque groupes d'objets en multiplication.

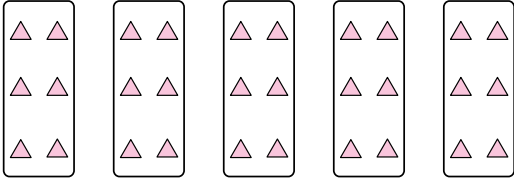
Ex) 

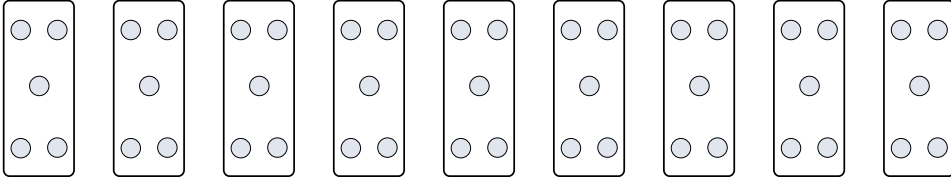
1) 


2) 


3) 

4) 

5) 

6) 

7) 

8) 

**Réponses**

- Ex. 8×5=40
1. 9×3=27
2. 4×5=20
3. 5×8=40
4. 10×2=20
5. 5×6=30
6. 9×5=45
7. 8×2=16
8. 7×8=56





Exprimez chaque groupes d'objets en multiplication.

**Réponses**

Ex)

Ex.  $10 \times 10 = 100$

1)

1. \_\_\_\_\_

2. \_\_\_\_\_

2)

3. \_\_\_\_\_

4. \_\_\_\_\_

3)

5. \_\_\_\_\_

6. \_\_\_\_\_

7. \_\_\_\_\_

8. \_\_\_\_\_

4)

5)

6)

7)

8)



Exprimez chaque groupes d'objets en multiplication.

Ex)

1)

2)

3)

4)

5)

6)

7)

8)

**Réponses**

- Ex. 10×10=100
1. 10×7=70
2. 4×7=28
3. 10×6=60
4. 8×2=16
5. 3×6=18
6. 6×2=12
7. 5×2=10
8. 5×7=35



Exprimez chaque groupes d'objets en multiplication.

**Réponses**

Ex)

Ex. **9×6=54**

1)

1. \_\_\_\_\_

2. \_\_\_\_\_

2)

3. \_\_\_\_\_

4. \_\_\_\_\_

3)

5. \_\_\_\_\_

6. \_\_\_\_\_

7. \_\_\_\_\_

4)

8. \_\_\_\_\_

5)

6)

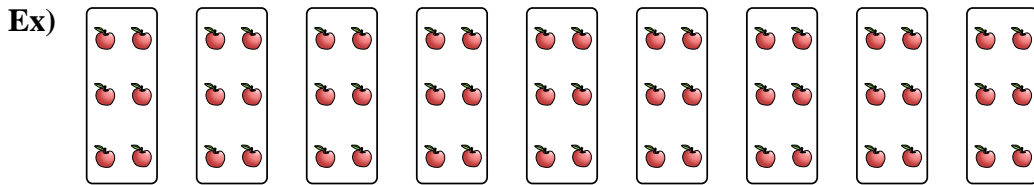
7)

8)

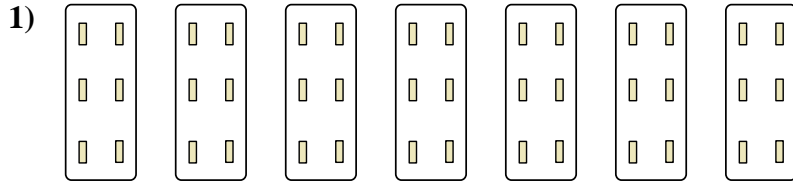


Exprimez chaque groupes d'objets en multiplication.


**Réponses**



Ex. 9×6=54




1. 7×6=42



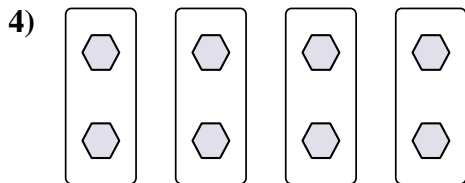
2. 7×10=70

3. 8×2=16



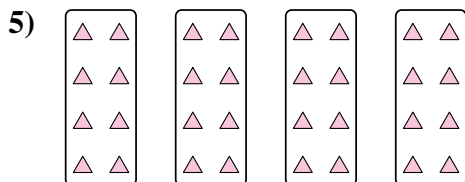
4. 4×2=8

5. 4×8=32



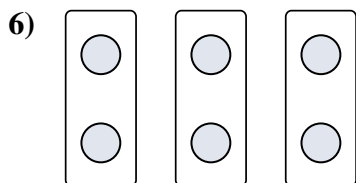


6. 3×2=6

7. 10×7=70



8. 4×10=40





Exprimez chaque groupes d'objets en multiplication.

**Réponses**

Ex)

Ex.  $7 \times 7 = 49$

1)

1. \_\_\_\_\_

2. \_\_\_\_\_

2)

3. \_\_\_\_\_

4. \_\_\_\_\_

3)

5. \_\_\_\_\_

6. \_\_\_\_\_

7. \_\_\_\_\_

4)

8. \_\_\_\_\_

5)


6)

7)

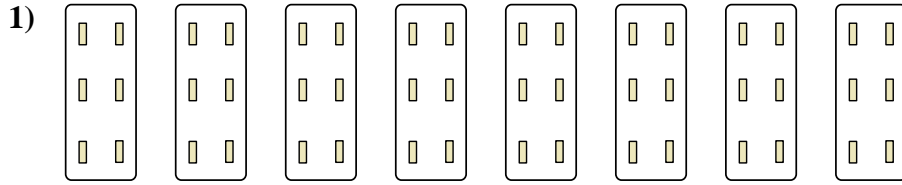
8)



Exprimez chaque groupes d'objets en multiplication.

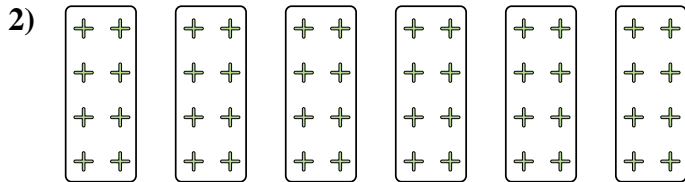


Ex.  $7 \times 7 = 49$




1.  $8 \times 6 = 48$

2.  $6 \times 8 = 48$



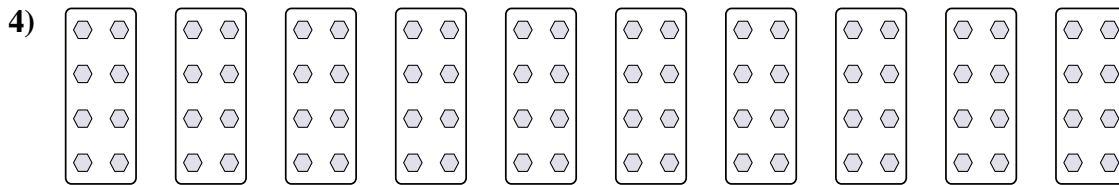
3.  $5 \times 2 = 10$

4.  $10 \times 8 = 80$



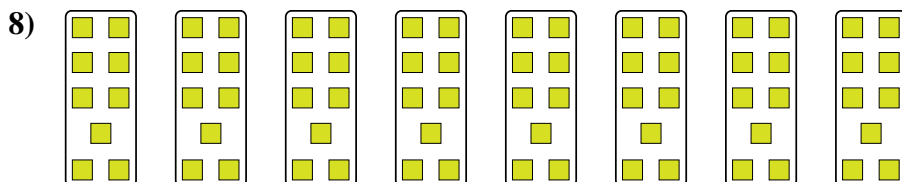

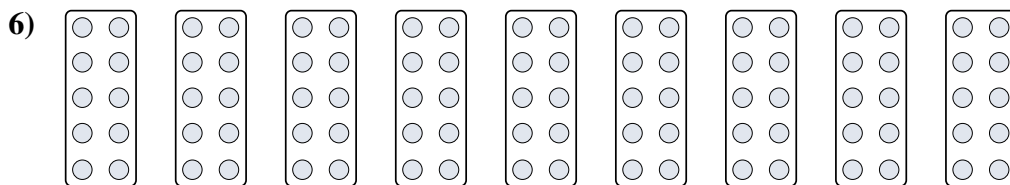
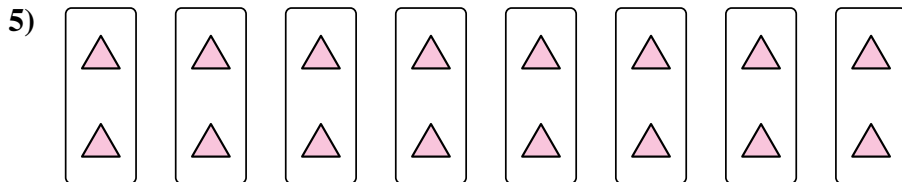
5.  $8 \times 2 = 16$

6.  $9 \times 10 = 90$



7.  $3 \times 8 = 24$

8.  $8 \times 9 = 72$



**Réponses**



Exprimez chaque groupes d'objets en multiplication.

**Réponses**

Ex)

Ex.  $6 \times 7 = 42$

1. \_\_\_\_\_

1)

2. \_\_\_\_\_

2)

3. \_\_\_\_\_

4. \_\_\_\_\_

3)

5. \_\_\_\_\_

6. \_\_\_\_\_

4)

7. \_\_\_\_\_

8. \_\_\_\_\_

5)

6)


7)

8)

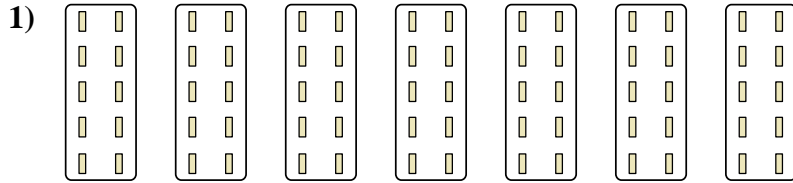


Exprimez chaque groupes d'objets en multiplication.

**Réponses**

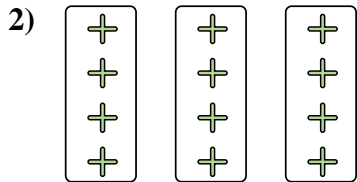


Ex. 6×7=42




1. 7×10=70

2. 3×4=12



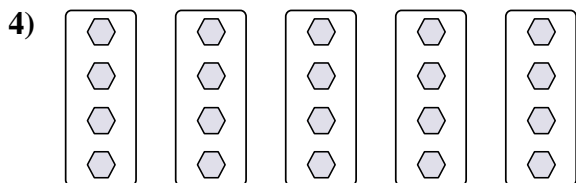
3. 3×7=21

4. 5×4=20





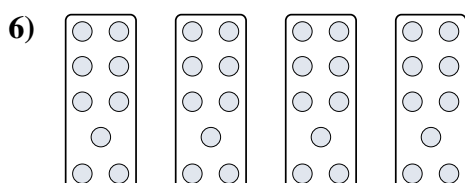
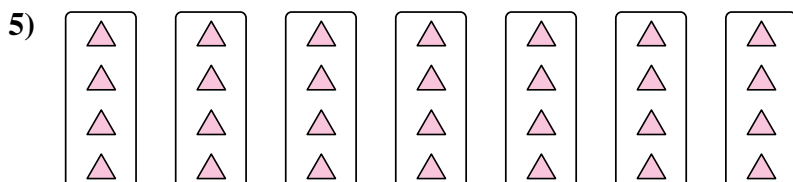
5. 7×4=28

6. 4×9=36



7. 4×10=40

8. 2×8=16







Exprimez chaque groupes d'objets en multiplication.

**Réponses**

Ex)

Ex.  $9 \times 5 = 45$

1)

1. \_\_\_\_\_

2. \_\_\_\_\_

2)

3. \_\_\_\_\_

4. \_\_\_\_\_

3)

5. \_\_\_\_\_

6. \_\_\_\_\_

4)

7. \_\_\_\_\_

8. \_\_\_\_\_

5)



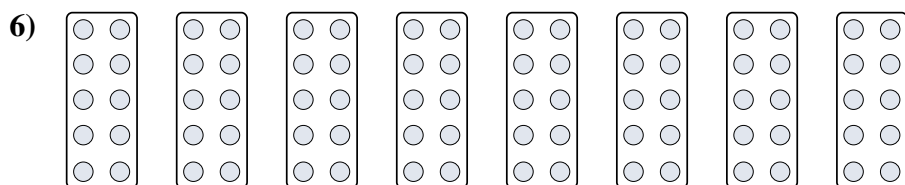
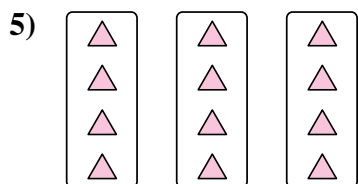
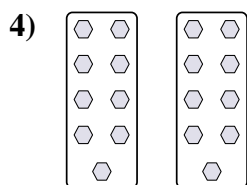

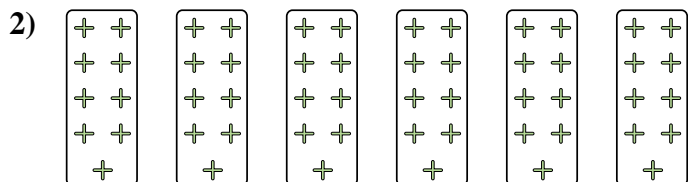
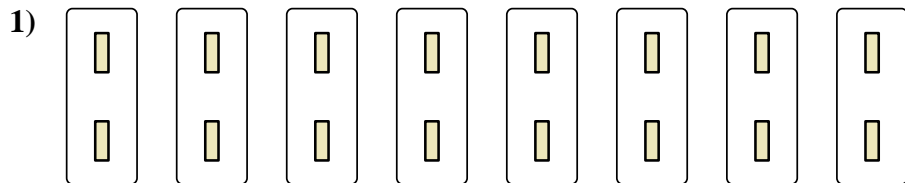

6)

7)

8)



Exprimez chaque groupes d'objets en multiplication.



**Réponses**

Ex. 9×5=45

1. 8×2=16

2. 6×9=54

3. 3×7=21

4. 2×9=18

5. 3×4=12

6. 8×10=80

7. 10×9=90


8. 2×10=20



Exprimez chaque groupes d'objets en multiplication.

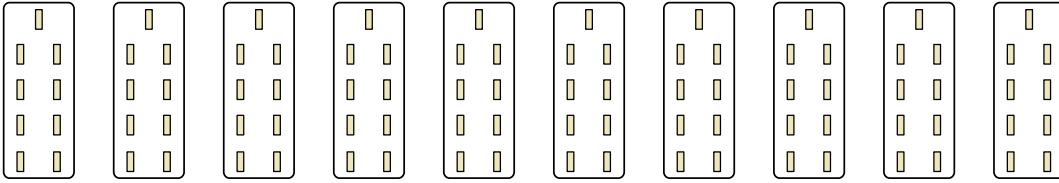
**Réponses**

Ex)



Ex.  $6 \times 3 = 18$

1)

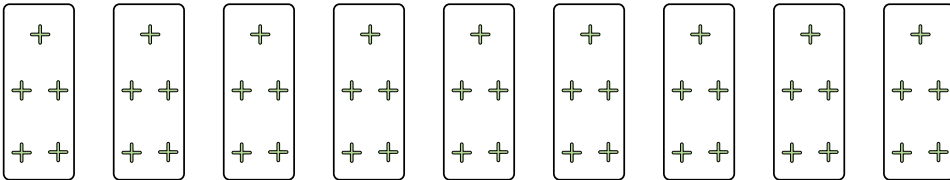


1. \_\_\_\_\_

2. \_\_\_\_\_

3. \_\_\_\_\_

2)




4. \_\_\_\_\_

5. \_\_\_\_\_

6. \_\_\_\_\_

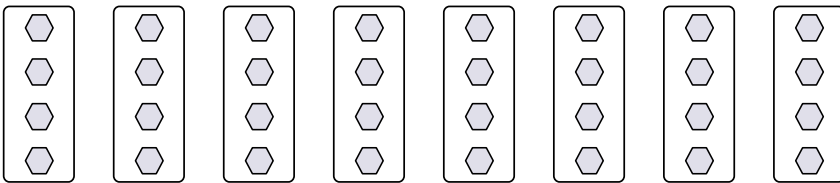
3)



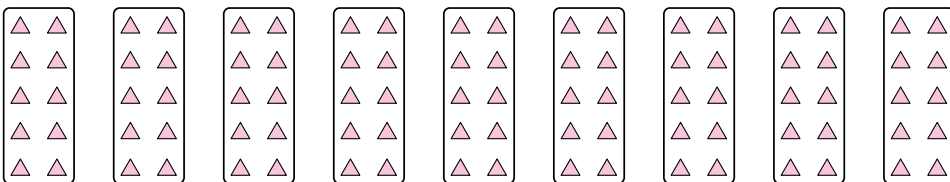
7. \_\_\_\_\_

8. \_\_\_\_\_

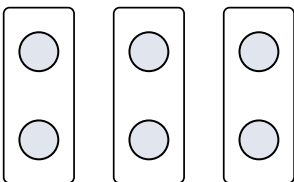
4)




5)



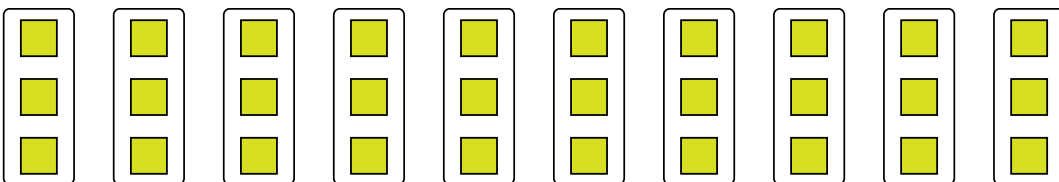
6)



7)




8)

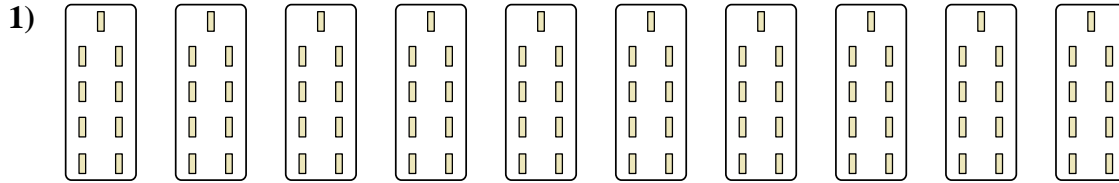




Exprimez chaque groupes d'objets en multiplication.

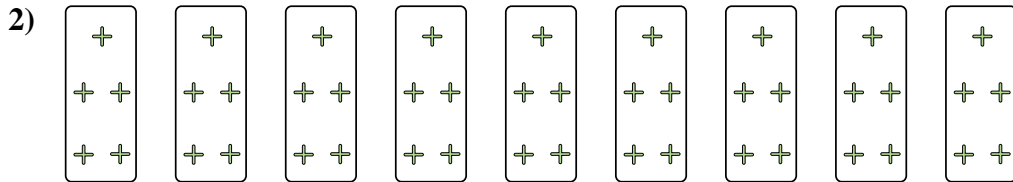


Ex. 6×3=18




1. 10×9=90

2. 9×5=45



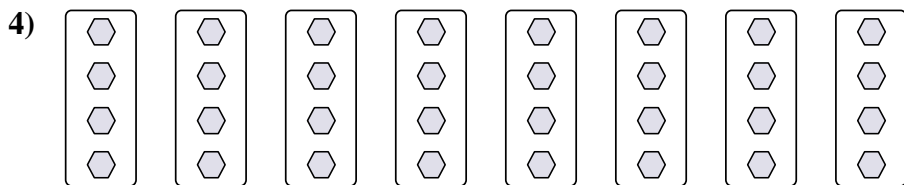
3. 5×2=10

4. 8×4=32

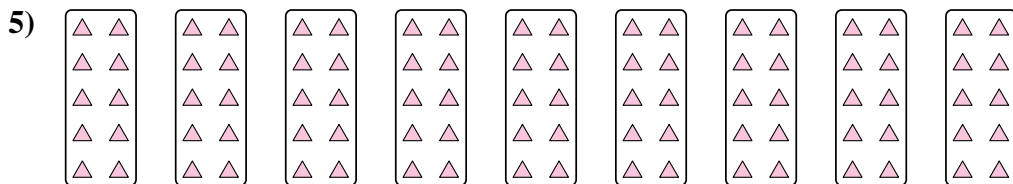


5. 9×10=90

6. 3×2=6



7. 4×9=36



8. 10×3=30

