


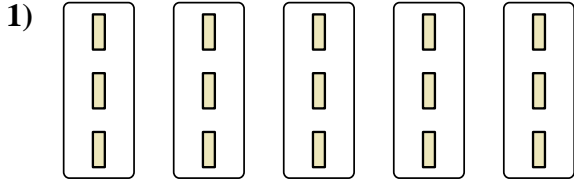


Exprimez chaque groupes d'objets en multiplication.

**Réponses**

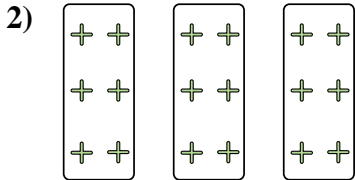


Ex.  $8 \times 9 = 72$




1. \_\_\_\_\_

2. \_\_\_\_\_



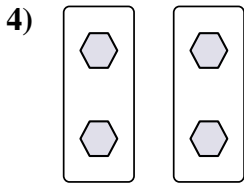
3. \_\_\_\_\_

4. \_\_\_\_\_



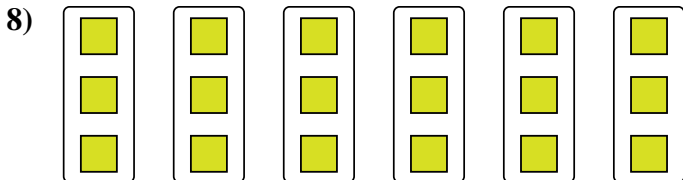

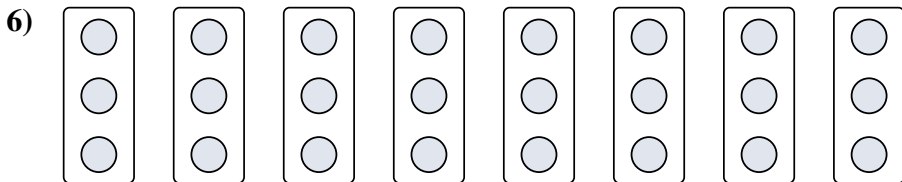
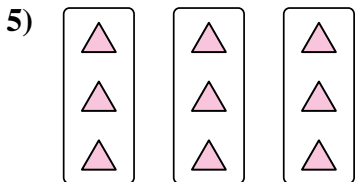
5. \_\_\_\_\_

6. \_\_\_\_\_



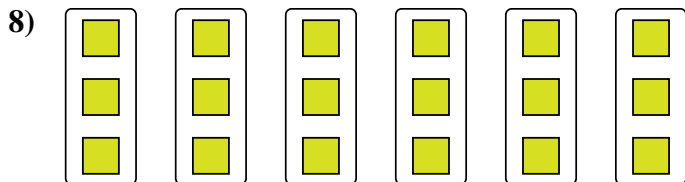

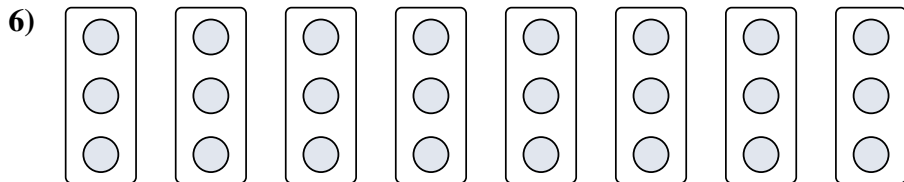
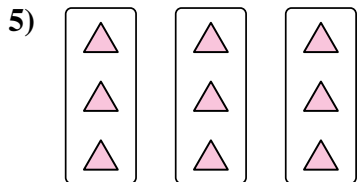
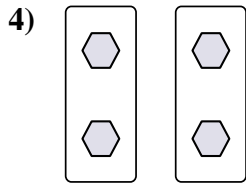

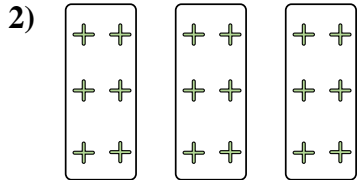
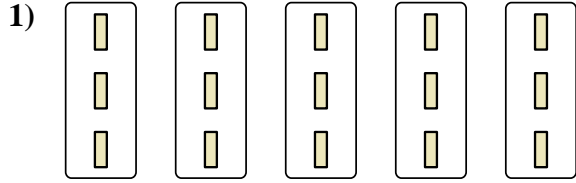

7. \_\_\_\_\_

8. \_\_\_\_\_





Exprimez chaque groupes d'objets en multiplication.



**Réponses**

Ex.  $8 \times 9 = 72$

1.  $5 \times 3 = 15$

2.  $3 \times 6 = 18$

3.  $4 \times 5 = 20$

4.  $2 \times 2 = 4$

5.  $3 \times 3 = 9$

6.  $8 \times 3 = 24$

7.  $5 \times 10 = 50$

8.  $6 \times 3 = 18$