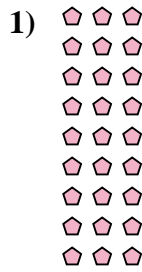
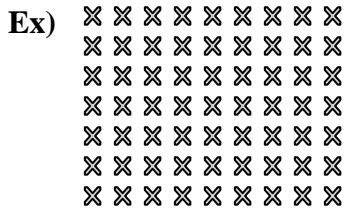




Interpréter chaque figure en multiplication.

Réponses



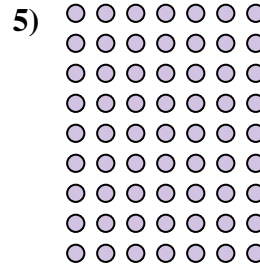


Ex.  $7 \times 9 = 63$

1. \_\_\_\_\_

2. \_\_\_\_\_

3. \_\_\_\_\_

4. \_\_\_\_\_






5. \_\_\_\_\_

6. \_\_\_\_\_

7. \_\_\_\_\_

8. \_\_\_\_\_

9. \_\_\_\_\_



10. \_\_\_\_\_

11. \_\_\_\_\_

