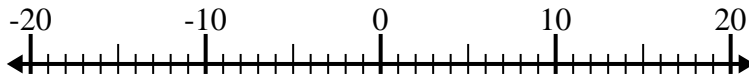




Résoudre chaque problème. Utilisez la droite numérique si besoin.

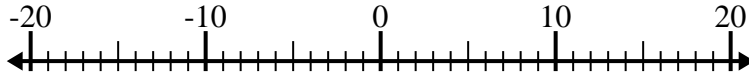
Réponses

1) $15 + (-3) =$ _____



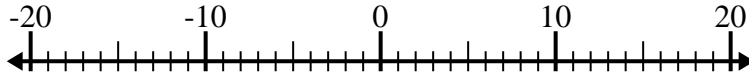
1. _____

2) $(-1) + 13 =$ _____



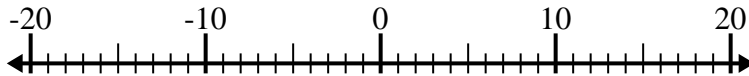
2. _____

3) $2 - (-7) =$ _____



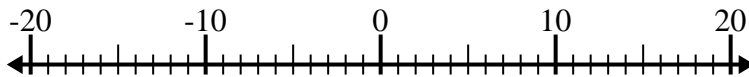
3. _____

4) $(-1) + (-14) =$ _____



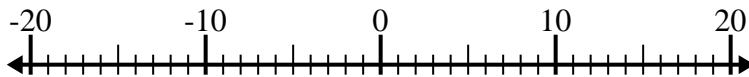
4. _____

5) $(-2) - (-12) =$ _____



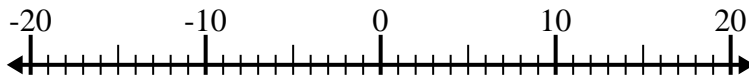
5. _____

6) $3 - (-4) =$ _____



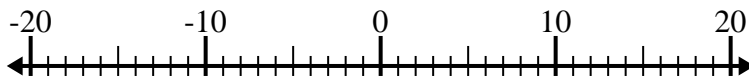
6. _____

7) $(-11) + (-6) =$ _____



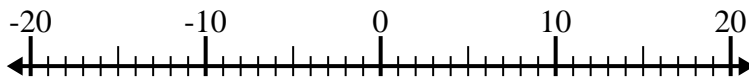
7. _____

8) $(-4) - 12 =$ _____



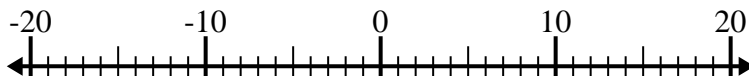
8. _____

9) $(-11) - (-13) =$ _____



9. _____

10) $1 + (-4) =$ _____

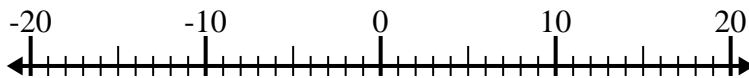


10. _____

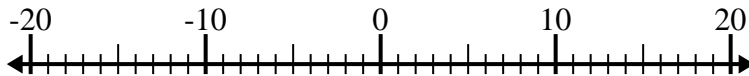


Résoudre chaque problème. Utilisez la droite numérique si besoin.

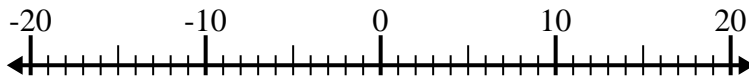
1) $15 + (-3) = \underline{12}$



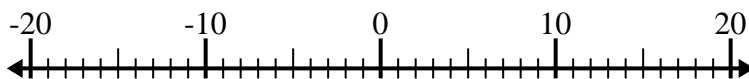
2) $(-1) + 13 = \underline{12}$



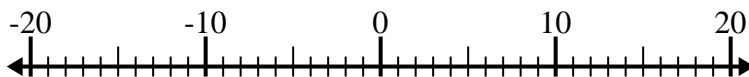
3) $2 - (-7) = \underline{9}$



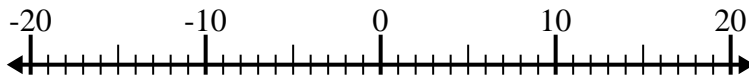
4) $(-1) + (-14) = \underline{-15}$



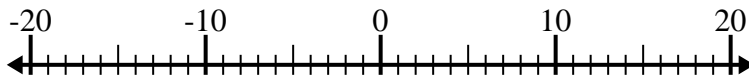
5) $(-2) - (-12) = \underline{10}$



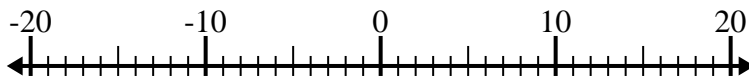
6) $3 - (-4) = \underline{7}$



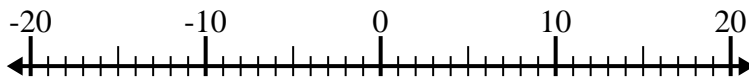
7) $(-11) + (-6) = \underline{-17}$



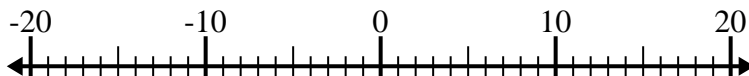
8) $(-4) - 12 = \underline{-16}$



9) $(-11) - (-13) = \underline{2}$



10) $1 + (-4) = \underline{-3}$

**Réponses**1. **12**2. **12**3. **9**4. **-15**5. **10**6. **7**7. **-17**8. **-16**9. **2**10. **-3**