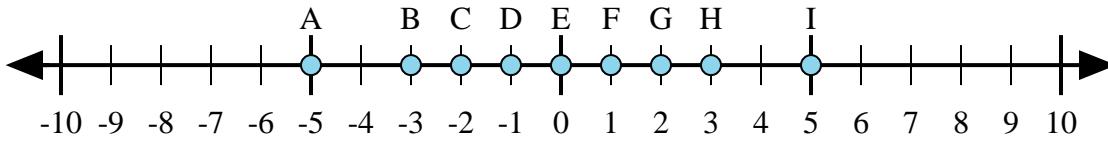




**Déterminez quelle lettre de la droite numérique représente le mieux la réponse à chaque problème.**

**Réponses**



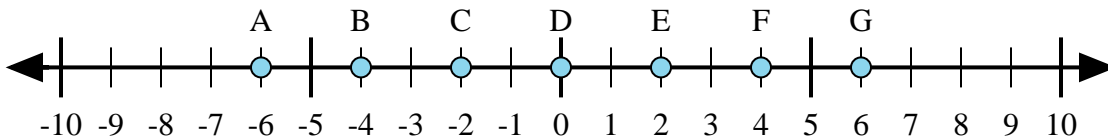
1)  $2 + 3 =$

2)  $2 + (-3) =$

3)  $3 + (-2) =$

4)  $(-2) + 3 =$

5)  $(-3) + 2 =$



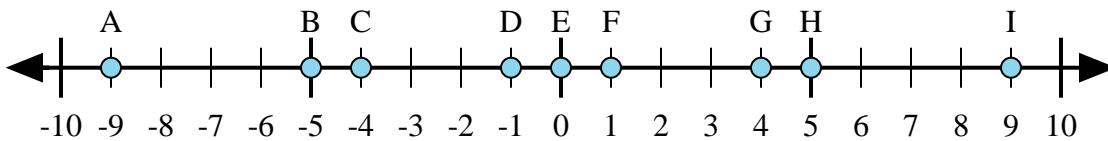
6)  $4 + (-2) =$

7)  $2 + 4 =$

8)  $(-2) + 4 =$

9)  $(-4) + 2 =$

10)  $(-2) + (-4) =$



11)  $5 + (-4) =$

12)  $4 + (-5) =$

13)  $4 + 5 =$

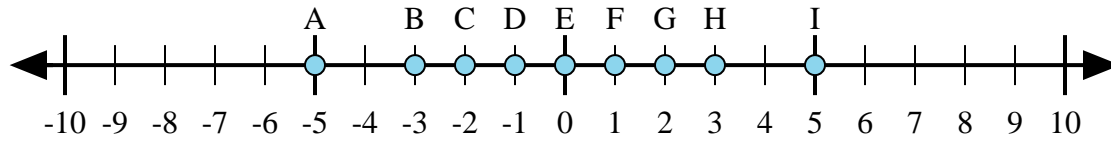
14)  $(-5) + 4 =$

15)  $(-4) + 5 =$

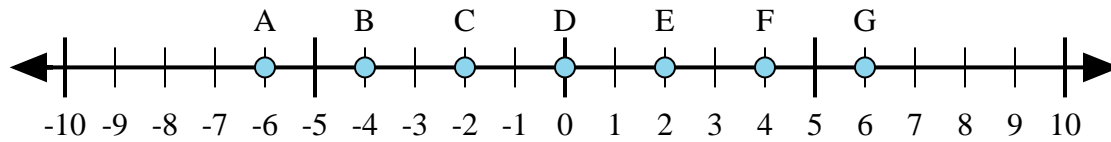
1. \_\_\_\_\_
2. \_\_\_\_\_
3. \_\_\_\_\_
4. \_\_\_\_\_
5. \_\_\_\_\_
6. \_\_\_\_\_
7. \_\_\_\_\_
8. \_\_\_\_\_
9. \_\_\_\_\_
10. \_\_\_\_\_
11. \_\_\_\_\_
12. \_\_\_\_\_
13. \_\_\_\_\_
14. \_\_\_\_\_
15. \_\_\_\_\_



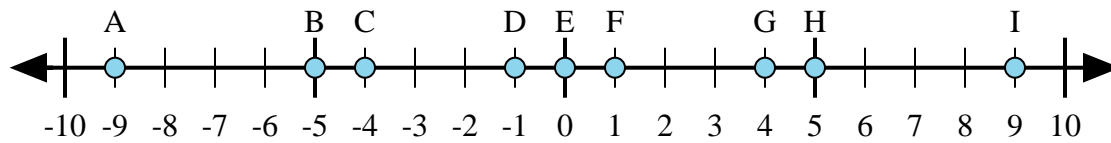
Déterminez quelle lettre de la droite numérique représente le mieux la réponse à chaque problème.



- 1)  $2 + 3 =$
- 2)  $2 + (-3) =$
- 3)  $3 + (-2) =$
- 4)  $(-2) + 3 =$
- 5)  $(-3) + 2 =$



- 6)  $4 + (-2) =$
- 7)  $2 + 4 =$
- 8)  $(-2) + 4 =$
- 9)  $(-4) + 2 =$
- 10)  $(-2) + (-4) =$



- 11)  $5 + (-4) =$
- 12)  $4 + (-5) =$
- 13)  $4 + 5 =$
- 14)  $(-5) + 4 =$
- 15)  $(-4) + 5 =$

**Réponses**

1.     **I**
2.     **D**
3.     **F**
4.     **F**
5.     **D**
6.     **E**
7.     **G**
8.     **E**
9.     **C**
10.     **A**
11.     **F**
12.     **D**
13.     **I**
14.     **D**
15.     **F**