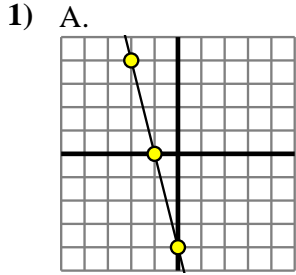


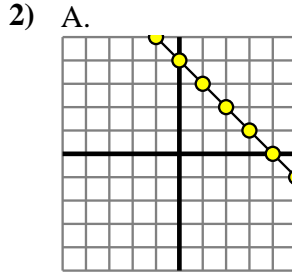


Déterminez quelle fonction a le plus grand changement de taux. Si le taux est le même, répondez par 'même'.

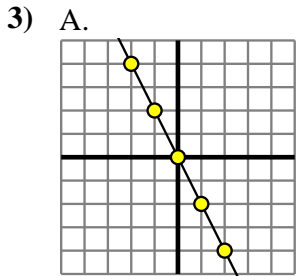
**Réponses**



B.  
 $Y=4 \times X-(X+8)$

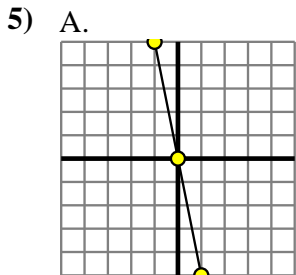
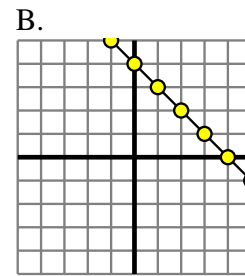


B.  
 $Y=X \times 9$



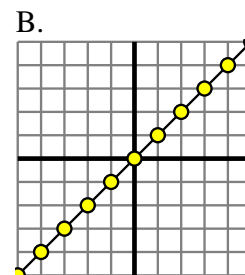
B.  
 $Y=X-3$

4) A.  
 $Y=7 \times X-(X-2)$



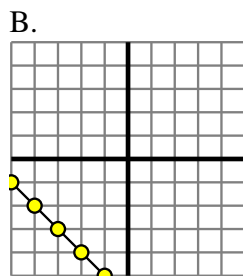
B.  
 $Y=5 \times X+(X \times 8)$

6) A.  
 $Y=8 \times X-(X-8)$



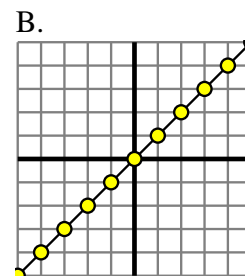
7) A.

X	Y
-6	30
-5	25
-4	20
-3	15
2	-10



8) A.

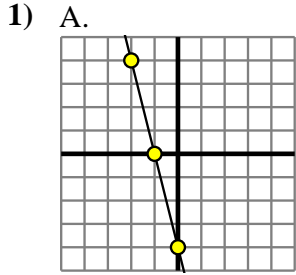
X	Y
-10	-59
-4	-29
2	1
7	26
9	36



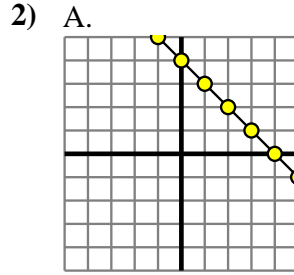
1. \_\_\_\_\_
2. \_\_\_\_\_
3. \_\_\_\_\_
4. \_\_\_\_\_
5. \_\_\_\_\_
6. \_\_\_\_\_
7. \_\_\_\_\_
8. \_\_\_\_\_



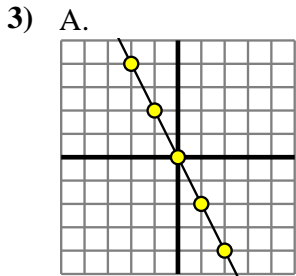
Déterminez quelle fonction a le plus grand changement de taux. Si le taux est le même, répondez par 'même'.



B.  
 $Y=4 \times X-(X+8)$

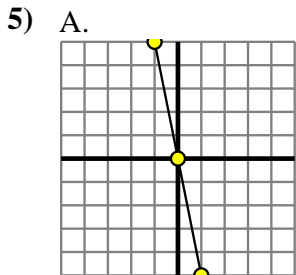
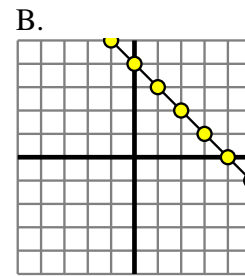


B.  
 $Y=X \times 9$



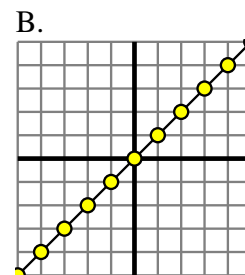
B.  
 $Y=X-3$

4) A.  
 $Y=7 \times X-(X-2)$



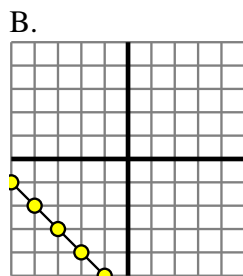
B.  
 $Y=5 \times X+(X \times 8)$

6) A.  
 $Y=8 \times X-(X-8)$



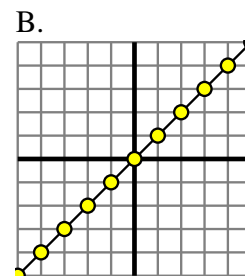
7) A.

X	Y
-6	30
-5	25
-4	20
-3	15
2	-10



8) A.

X	Y
-10	-59
-4	-29
2	1
7	26
9	36



**Réponses**

1. **A**
2. **B**
3. **A**
4. **A**
5. **B**
6. **A**
7. **A**
8. **A**