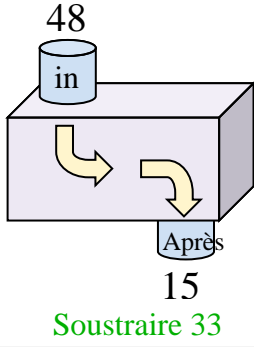




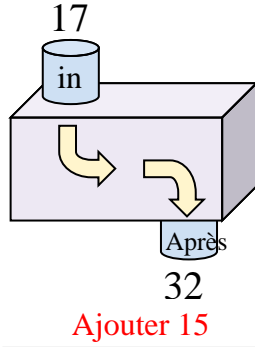


Déterminez la règle appliquée à chaque machine à fonctions.

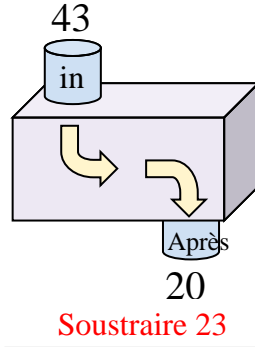
Ex)



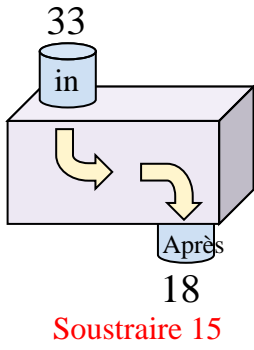
1)



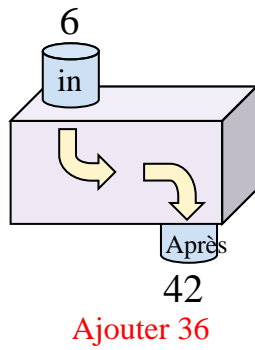
2)



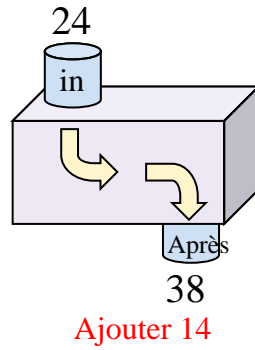
3)



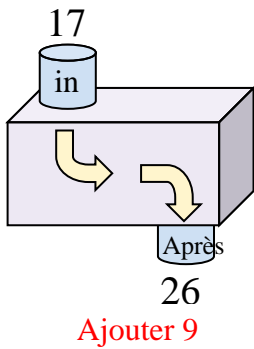
4)



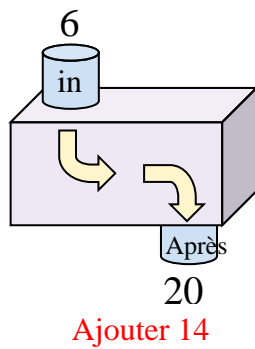
5)



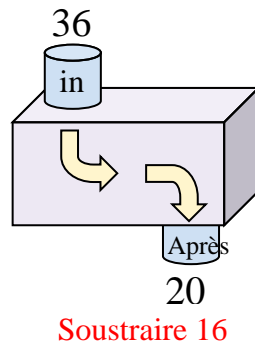
6)



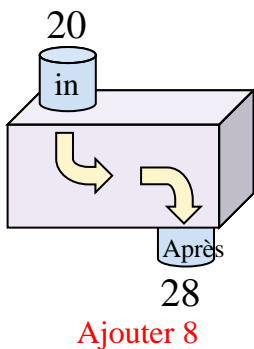
7)



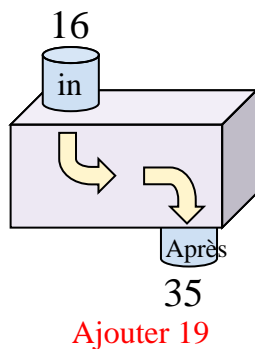
8)



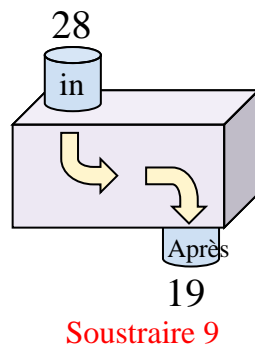
9)



10)



11)



**Réponses**

Ex. **Soustraire 33**

1. **Ajouter 15**

2. **Soustraire 23**

3. **Soustraire 15**

4. **Ajouter 36**

5. **Ajouter 14**

6. **Ajouter 9**

7. **Ajouter 14**

8. **Soustraire 16**

9. **Ajouter 8**

10. **Ajouter 19**

11. **Soustraire 9**