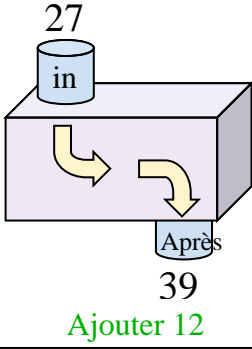


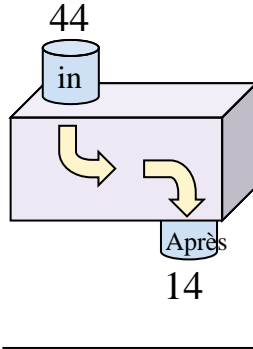


Déterminez la règle appliquée à chaque machine à fonctions.

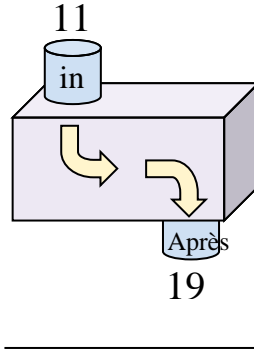
Ex)



1)



2)

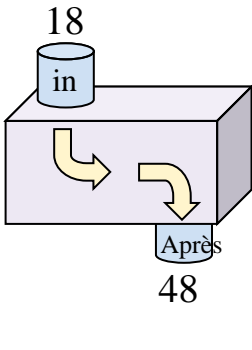


**Réponses**

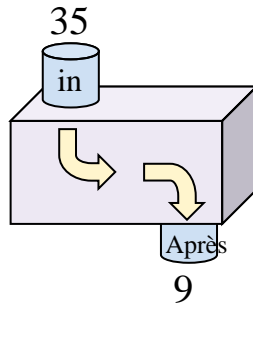
Ex. **Ajouter 12**

1. \_\_\_\_\_
2. \_\_\_\_\_
3. \_\_\_\_\_
4. \_\_\_\_\_
5. \_\_\_\_\_
6. \_\_\_\_\_
7. \_\_\_\_\_
8. \_\_\_\_\_
9. \_\_\_\_\_
10. \_\_\_\_\_
11. \_\_\_\_\_

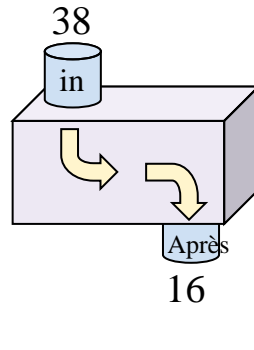
3)



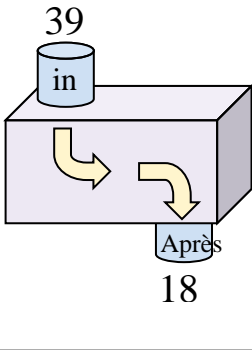
4)



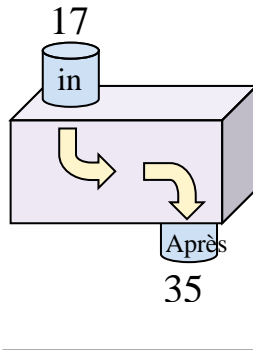
5)



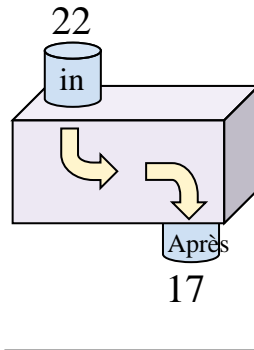
6)



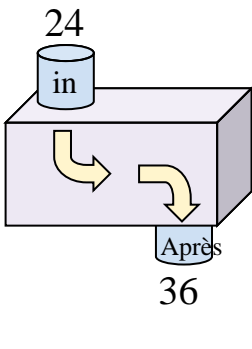
7)



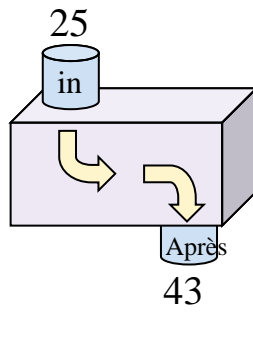
8)



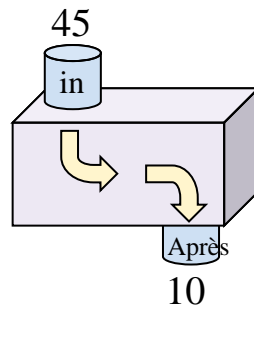
9)



10)



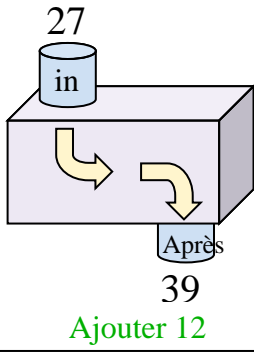
11)



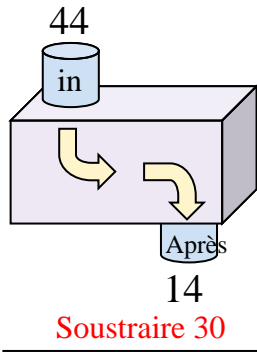


Déterminez la règle appliquée à chaque machine à fonctions.

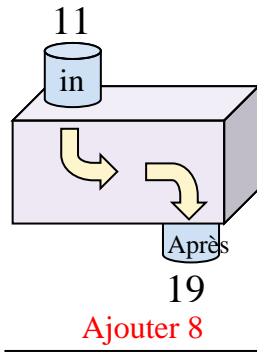
Ex)



1)



2)



Ex.

**Ajouter 12**

1.

**Soustraire 30**

2.

**Ajouter 8**

3.

**Ajouter 30**

4.

**Soustraire 26**

5.

**Soustraire 22**

6.

**Soustraire 21**

7.

**Ajouter 18**

8.

**Soustraire 5**

9.

**Ajouter 12**

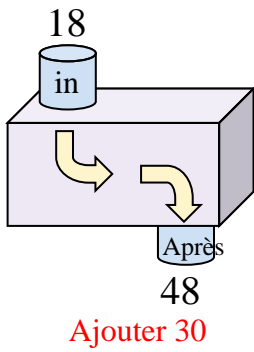
10.

**Ajouter 18**

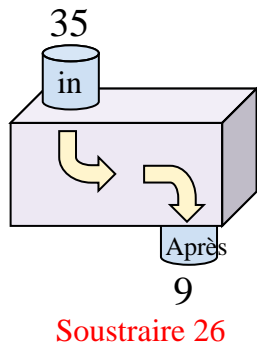
11.

**Soustraire 35**

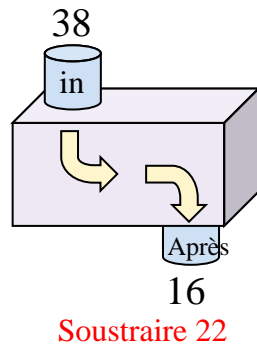
3)



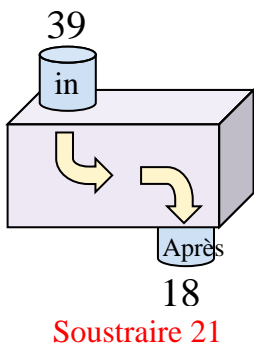
4)



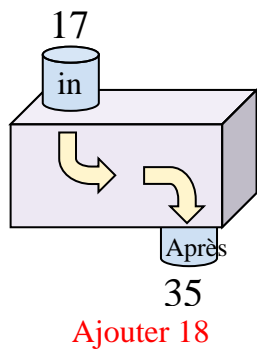
5)



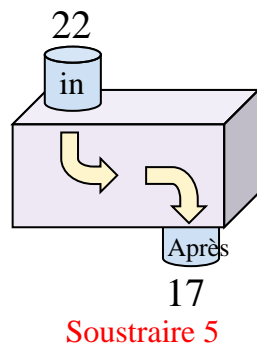
6)



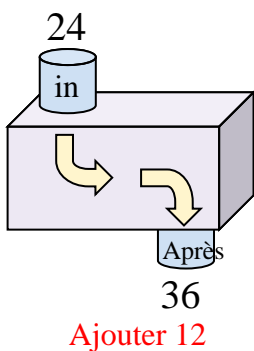
7)



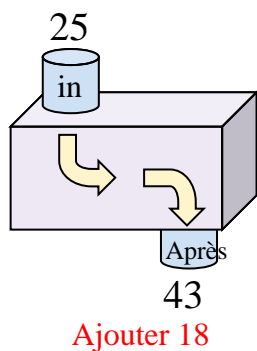
8)



9)



10)



11)

