



Avec les droites numériques arrondir chaque nombre à la centaine la plus proche.

Réponses

Ex)

7 085



Ex.

7 100

1)

9 381



1. _____

2)

3 207



2. _____

3)

618



3. _____

4)

72 650



4. _____

5)

414



5. _____

6)

547



6. _____

7)

39 381



7. _____

8)

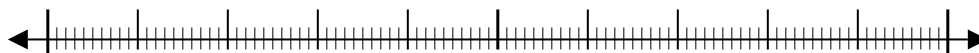
8 558



8. _____

9)

44 317



9. _____

10)

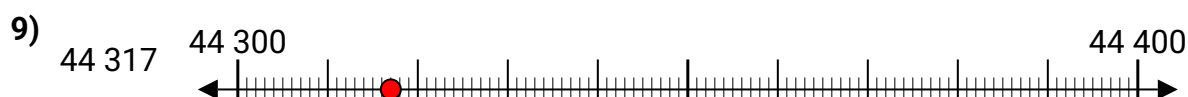
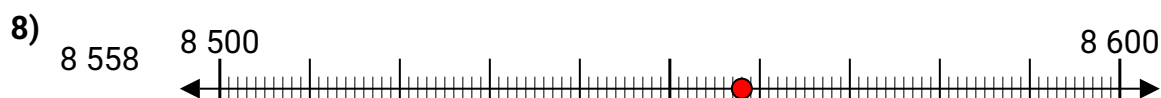
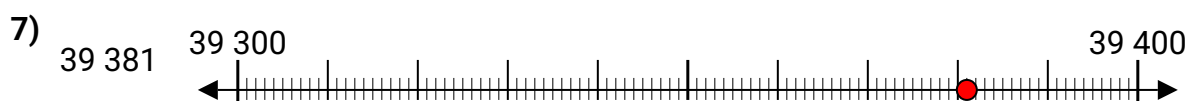
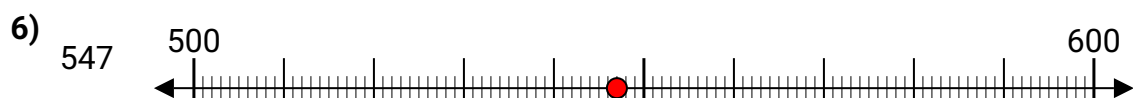
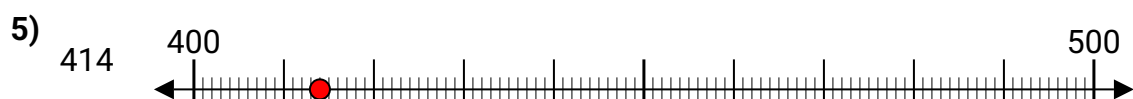
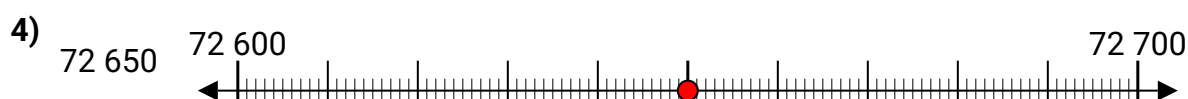
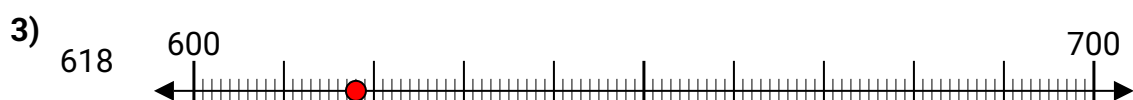
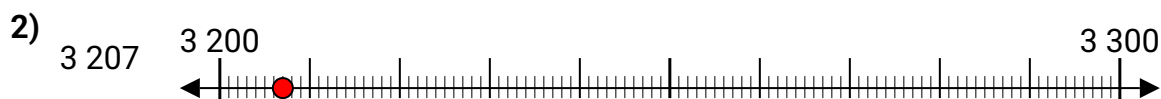
91 725



10. _____



Avec les droites numériques arrondir chaque nombre à la centaine la plus proche.

**Réponses**Ex. **7 100**1. **9 400**2. **3 200**3. **600**4. **72 700**5. **400**6. **500**7. **39 400**8. **8 600**9. **44 300**10. **91 700**