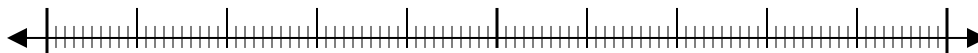




Avec les droites numériques arrondir chaque nombre à la centaine la plus proche.

Ex)

612



Ex. 600

1)

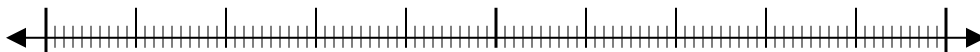
9 223



1. \_\_\_\_\_

2)

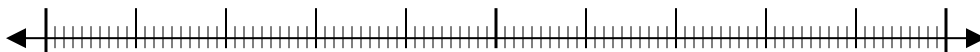
17 922



2. \_\_\_\_\_

3)

87 465



3. \_\_\_\_\_

4)

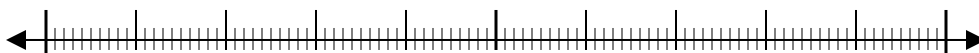
653



4. \_\_\_\_\_

5)

3 616



5. \_\_\_\_\_

6)

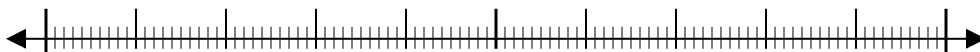
6 677



6. \_\_\_\_\_

7)

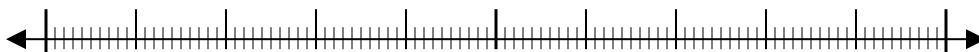
22 598



7. \_\_\_\_\_

8)

1 241



8. \_\_\_\_\_

9)

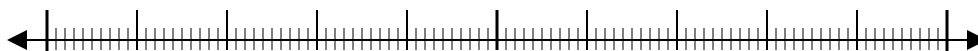
960



9. \_\_\_\_\_

10)

873

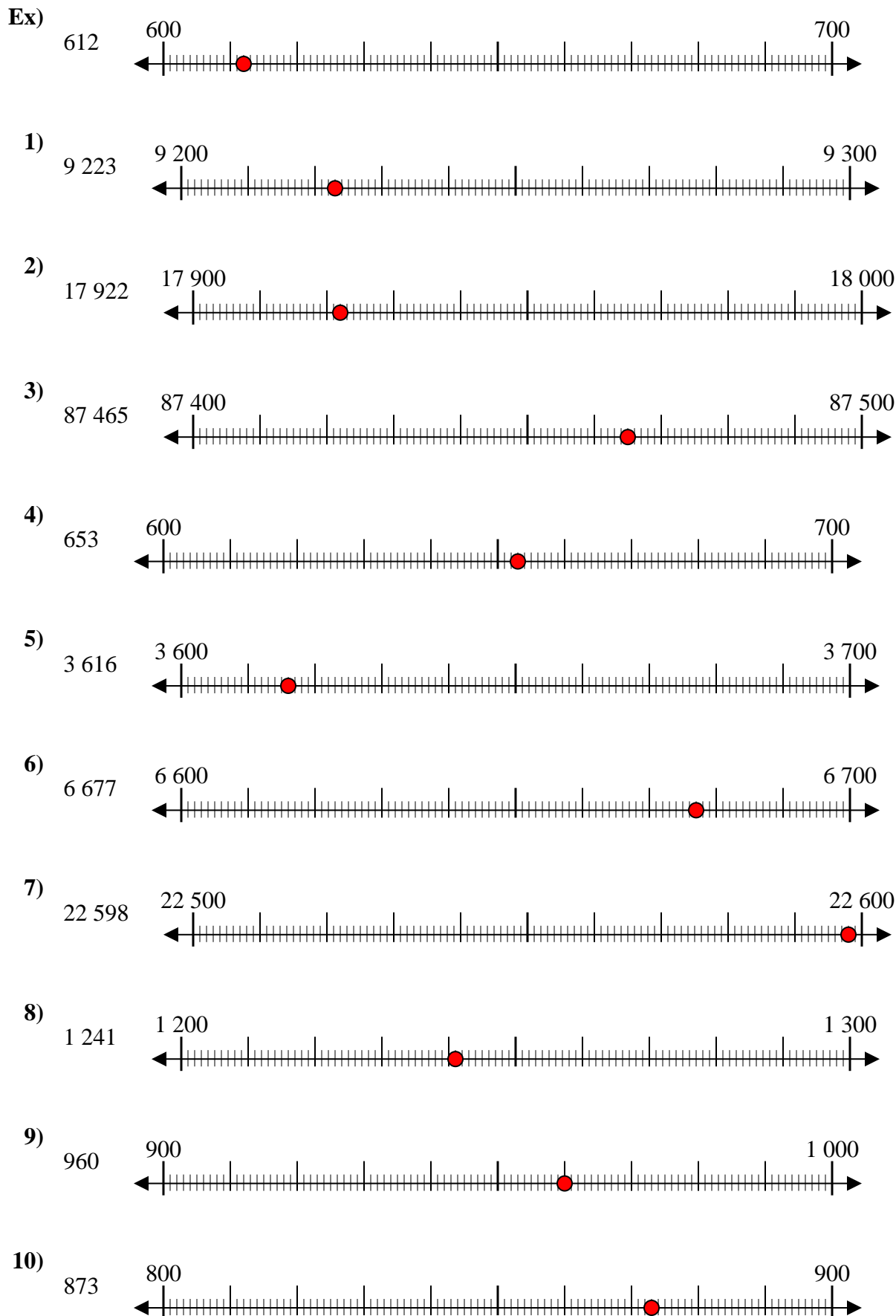


10. \_\_\_\_\_

**Réponses**



Avec les droites numériques arrondir chaque nombre à la centaine la plus proche.



**Réponses**

- Ex. 600
1. 9 200
2. 17 900
3. 87 500
4. 700
5. 3 600
6. 6 700
7. 22 600
8. 1 200
9. 1 000
10. 900