



Avec les droites numériques arrondir chaque nombre à la centaine la plus proche.

Ex)

4 410



Ex. **4 400**

1)

853



1. _____

2)

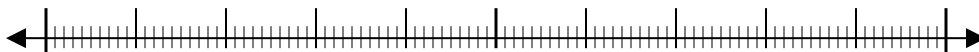
783



2. _____

3)

9 697



3. _____

4)

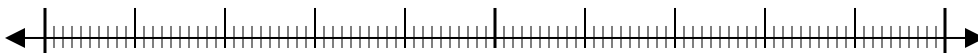
8 980



4. _____

5)

569



5. _____

6)

9 924



6. _____

7)

99 310



7. _____

8)

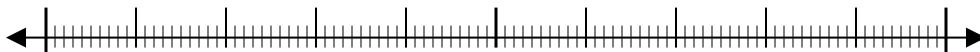
90 005



8. _____

9)

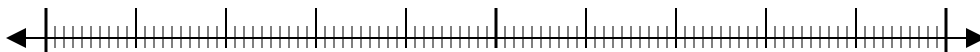
17 192



9. _____

10)

60 453

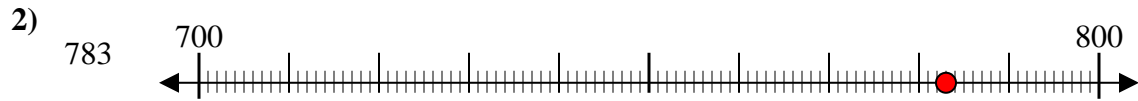
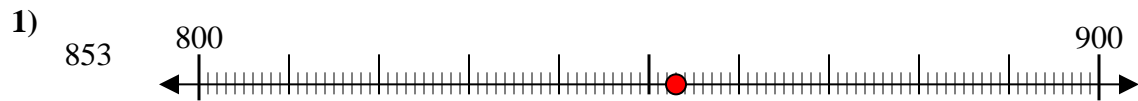
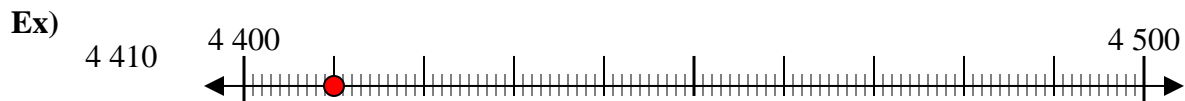


10. _____

Réponses



Avec les droites numériques arrondir chaque nombre à la centaine la plus proche.



Réponses

- Ex. 4 400
- 1. 900
- 2. 800
- 3. 9 700
- 4. 9 000
- 5. 600
- 6. 9 900
- 7. 99 300
- 8. 90 000
- 9. 17 200
- 10. 60 500