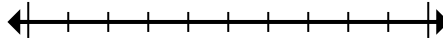




Marquez l'emplacement (approximatif) sur la droite numérique, puis résolvez.

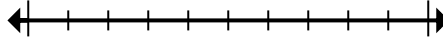
Réponses

1) Round 828 to the nearest hundred.



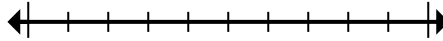
1. _____

2) Round 9 053 to the nearest thousand.



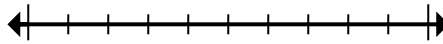
2. _____

3) Round 11 215 to the nearest thousand.



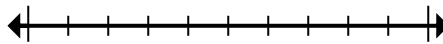
3. _____

4) Round 241 077 to the nearest ten thousand.



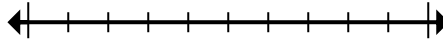
4. _____

5) Round 342 549 to the nearest hundred.



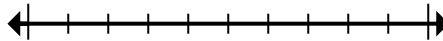
5. _____

6) Round 996 949 to the nearest ten thousand.



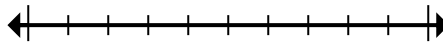
6. _____

7) Round 7 577 963 to the nearest thousand.



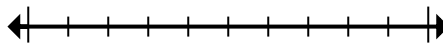
7. _____

8) Round 17 487 to the nearest ten thousand.



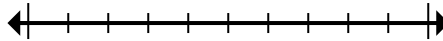
8. _____

9) Round 7 921 410 to the nearest hundred thousand.



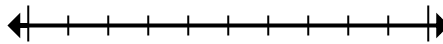
9. _____

10) Round 153 244 to the nearest hundred thousand.



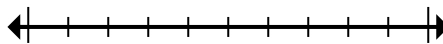
10. _____

11) Round 308 648 to the nearest hundred thousand.



11. _____

12) Round 673 to the nearest hundred.



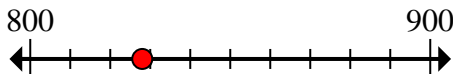
12. _____



Marquez l'emplacement (approximatif) sur la droite numérique, puis résolvez.

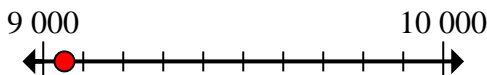
Réponses

1) Round 828 to the nearest hundred.



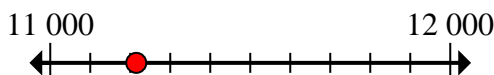
1. 800

2) Round 9 053 to the nearest thousand.



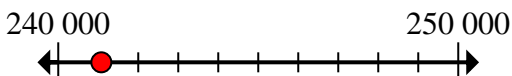
2. 9 000

3) Round 11 215 to the nearest thousand.



3. 11 000

4) Round 241 077 to the nearest ten thousand.



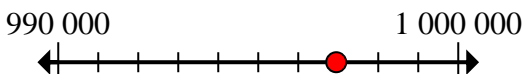
4. 240 000

5) Round 342 549 to the nearest hundred.



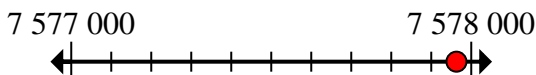
5. 342 500

6) Round 996 949 to the nearest ten thousand.



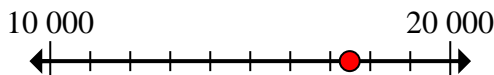
6. 1 000 000

7) Round 7 577 963 to the nearest thousand.



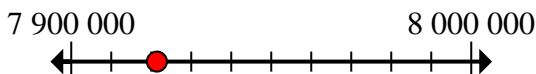
7. 7 578 000

8) Round 17 487 to the nearest ten thousand.



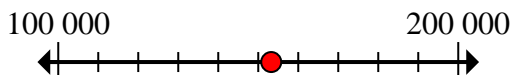
8. 20 000

9) Round 7 921 410 to the nearest hundred thousand.



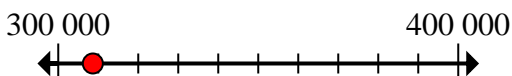
9. 7 900 000

10) Round 153 244 to the nearest hundred thousand.



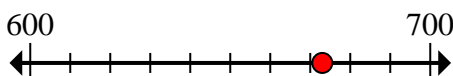
10. 200 000

11) Round 308 648 to the nearest hundred thousand.



11. 300 000

12) Round 673 to the nearest hundred.



12. 700

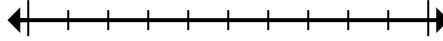


Marquez l'emplacement (approximatif) sur la droite numérique, puis résolvez.

342 500	1 000 000	11 000	9 000
240 000	700	200 000	300 000
20 000	7 900 000	7 578 000	800

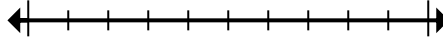
Réponses

1) Round 828 to the nearest hundred.



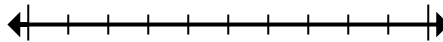
1. _____

2) Round 9 053 to the nearest thousand.



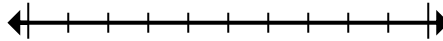
2. _____

3) Round 11 215 to the nearest thousand.



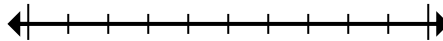
3. _____

4) Round 241 077 to the nearest ten thousand.



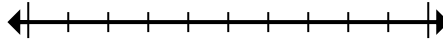
4. _____

5) Round 342 549 to the nearest hundred.



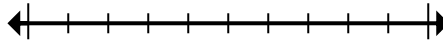
5. _____

6) Round 996 949 to the nearest ten thousand.



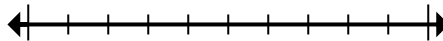
6. _____

7) Round 7 577 963 to the nearest thousand.



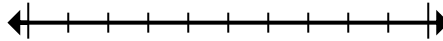
7. _____

8) Round 17 487 to the nearest ten thousand.



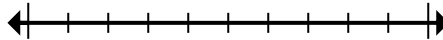
8. _____

9) Round 7 921 410 to the nearest hundred thousand.



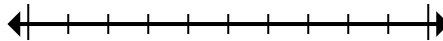
9. _____

10) Round 153 244 to the nearest hundred thousand.



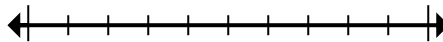
10. _____

11) Round 308 648 to the nearest hundred thousand.



11. _____

12) Round 673 to the nearest hundred.



12. _____