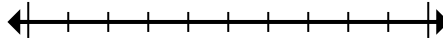




Marquez l'emplacement (approximatif) sur la droite numérique, puis résolvez.

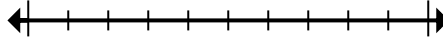
**Réponses**

1) Round 636 to the nearest hundred.



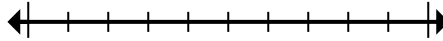
1. \_\_\_\_\_

2) Round 460 239 to the nearest hundred thousand.



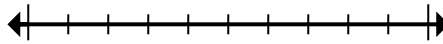
2. \_\_\_\_\_

3) Round 43 360 678 to the nearest hundred thousand.



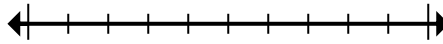
3. \_\_\_\_\_

4) Round 525 to the nearest hundred.



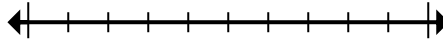
4. \_\_\_\_\_

5) Round 520 968 to the nearest hundred thousand.



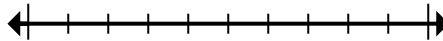
5. \_\_\_\_\_

6) Round 242 983 to the nearest ten thousand.



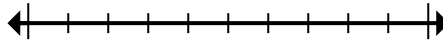
6. \_\_\_\_\_

7) Round 6 825 849 to the nearest hundred.



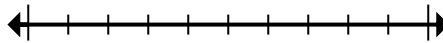
7. \_\_\_\_\_

8) Round 4 314 to the nearest thousand.



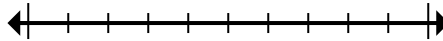
8. \_\_\_\_\_

9) Round 97 589 to the nearest ten thousand.



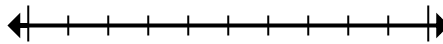
9. \_\_\_\_\_

10) Round 6 435 to the nearest thousand.



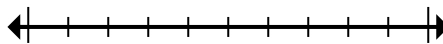
10. \_\_\_\_\_

11) Round 29 689 529 to the nearest hundred thousand.



11. \_\_\_\_\_

12) Round 4 801 539 to the nearest ten thousand.



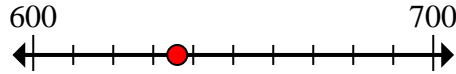
12. \_\_\_\_\_



Marquez l'emplacement (approximatif) sur la droite numérique, puis résolvez.

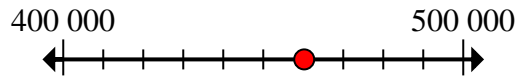
**Réponses**

1) Round 636 to the nearest hundred.



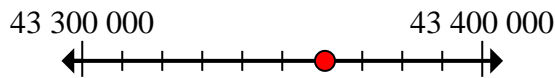
1. 600

2) Round 460 239 to the nearest hundred thousand.



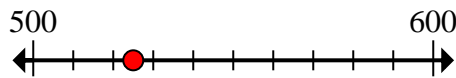
2. 500 000

3) Round 43 360 678 to the nearest hundred thousand.



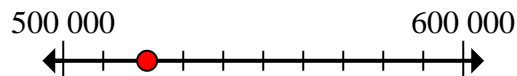
3. 43 400 000

4) Round 525 to the nearest hundred.



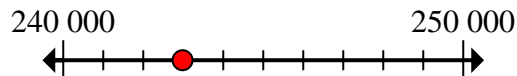
4. 500

5) Round 520 968 to the nearest hundred thousand.



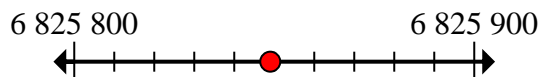
5. 500 000

6) Round 242 983 to the nearest ten thousand.



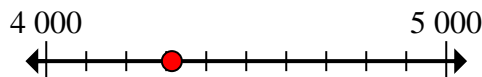
6. 240 000

7) Round 6 825 849 to the nearest hundred.



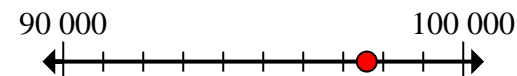
7. 6 825 800

8) Round 4 314 to the nearest thousand.



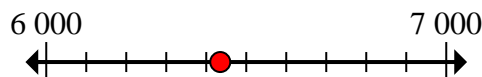
8. 4 000

9) Round 97 589 to the nearest ten thousand.



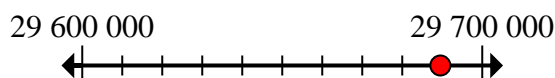
9. 100 000

10) Round 6 435 to the nearest thousand.



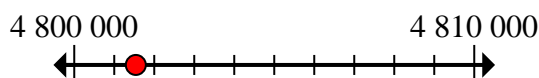
10. 6 000

11) Round 29 689 529 to the nearest hundred thousand.



11. 29 700 000

12) Round 4 801 539 to the nearest ten thousand.



12. 4 800 000

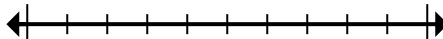


Marquez l'emplacement (approximatif) sur la droite numérique, puis résolvez.

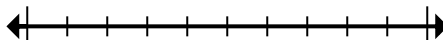
**Réponses**

4 800 000	43 400 000	600	500
29 700 000	6 825 800	240 000	500 000
4 000	100 000	500 000	6 000

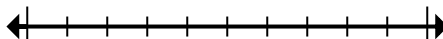
1) Round 636 to the nearest hundred.



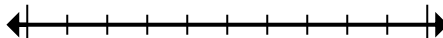
2) Round 460 239 to the nearest hundred thousand.



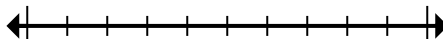
3) Round 43 360 678 to the nearest hundred thousand.



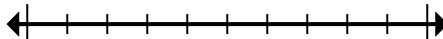
4) Round 525 to the nearest hundred.



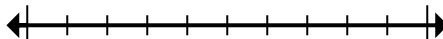
5) Round 520 968 to the nearest hundred thousand.



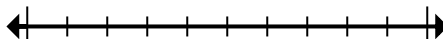
6) Round 242 983 to the nearest ten thousand.



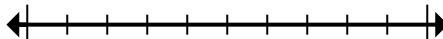
7) Round 6 825 849 to the nearest hundred.



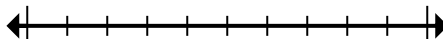
8) Round 4 314 to the nearest thousand.



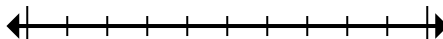
9) Round 97 589 to the nearest ten thousand.



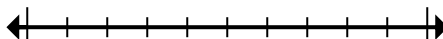
10) Round 6 435 to the nearest thousand.



11) Round 29 689 529 to the nearest hundred thousand.



12) Round 4 801 539 to the nearest ten thousand.



1. \_\_\_\_\_
2. \_\_\_\_\_
3. \_\_\_\_\_
4. \_\_\_\_\_
5. \_\_\_\_\_
6. \_\_\_\_\_
7. \_\_\_\_\_
8. \_\_\_\_\_
9. \_\_\_\_\_
10. \_\_\_\_\_
11. \_\_\_\_\_
12. \_\_\_\_\_