



Marquez l'emplacement (approximatif) sur la droite numérique, puis résolvez.

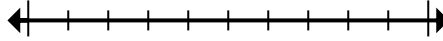
**Réponses**

1) Round 14 905 to the nearest hundred.



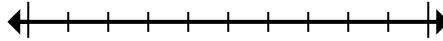
1. \_\_\_\_\_

2) Round 680 180 to the nearest hundred thousand.



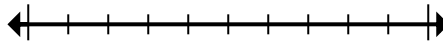
2. \_\_\_\_\_

3) Round 992 162 to the nearest hundred thousand.



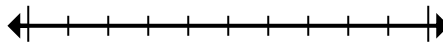
3. \_\_\_\_\_

4) Round 48 422 834 to the nearest hundred thousand.



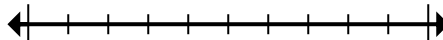
4. \_\_\_\_\_

5) Round 729 327 to the nearest thousand.



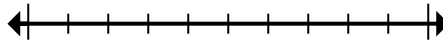
5. \_\_\_\_\_

6) Round 42 660 to the nearest thousand.



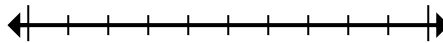
6. \_\_\_\_\_

7) Round 72 083 942 to the nearest hundred thousand.



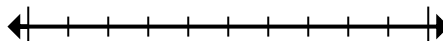
7. \_\_\_\_\_

8) Round 361 to the nearest hundred.



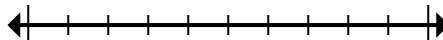
8. \_\_\_\_\_

9) Round 79 043 to the nearest ten thousand.



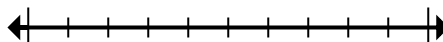
9. \_\_\_\_\_

10) Round 344 to the nearest hundred.



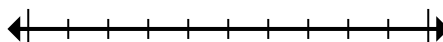
10. \_\_\_\_\_

11) Round 1 179 to the nearest thousand.



11. \_\_\_\_\_

12) Round 359 639 to the nearest hundred.



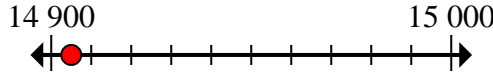
12. \_\_\_\_\_



Marquez l'emplacement (approximatif) sur la droite numérique, puis résolvez.

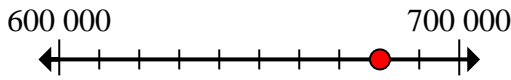
**Réponses**

1) Round 14 905 to the nearest hundred.



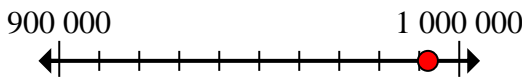
1. 14 900

2) Round 680 180 to the nearest hundred thousand.



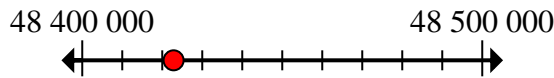
2. 700 000

3) Round 992 162 to the nearest hundred thousand.



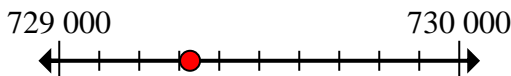
3. 1 000 000

4) Round 48 422 834 to the nearest hundred thousand.



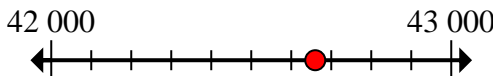
4. 48 400 000

5) Round 729 327 to the nearest thousand.



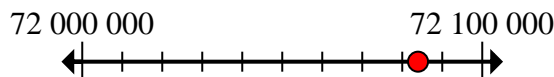
5. 729 000

6) Round 42 660 to the nearest thousand.



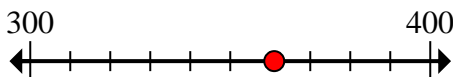
6. 43 000

7) Round 72 083 942 to the nearest hundred thousand.



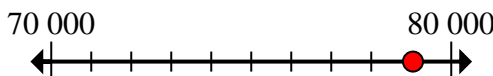
7. 72 100 000

8) Round 361 to the nearest hundred.



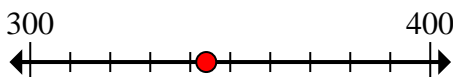
8. 400

9) Round 79 043 to the nearest ten thousand.



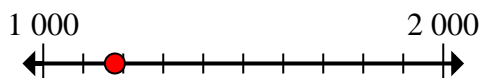
9. 80 000

10) Round 344 to the nearest hundred.



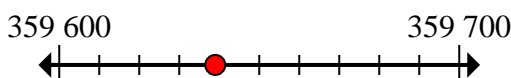
10. 300

11) Round 1 179 to the nearest thousand.



11. 1 000

12) Round 359 639 to the nearest hundred.



12. 359 600

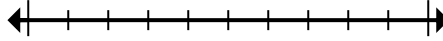


Marquez l'emplacement (approximatif) sur la droite numérique, puis résolvez.

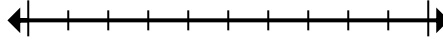
**Réponses**

1 000	1 000 000	43 000	700 000
729 000	72 100 000	359 600	300
14 900	48 400 000	400	80 000

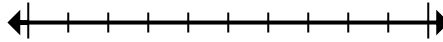
1) Round 14 905 to the nearest hundred.



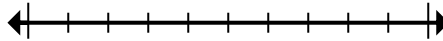
2) Round 680 180 to the nearest hundred thousand.



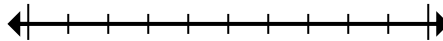
3) Round 992 162 to the nearest hundred thousand.



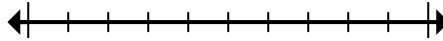
4) Round 48 422 834 to the nearest hundred thousand.



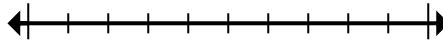
5) Round 729 327 to the nearest thousand.



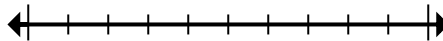
6) Round 42 660 to the nearest thousand.



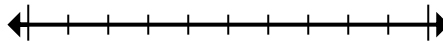
7) Round 72 083 942 to the nearest hundred thousand.



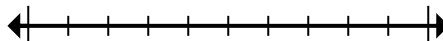
8) Round 361 to the nearest hundred.



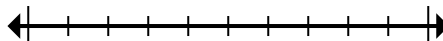
9) Round 79 043 to the nearest ten thousand.



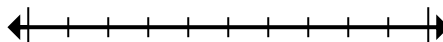
10) Round 344 to the nearest hundred.



11) Round 1 179 to the nearest thousand.



12) Round 359 639 to the nearest hundred.



1. \_\_\_\_\_
2. \_\_\_\_\_
3. \_\_\_\_\_
4. \_\_\_\_\_
5. \_\_\_\_\_
6. \_\_\_\_\_
7. \_\_\_\_\_
8. \_\_\_\_\_
9. \_\_\_\_\_
10. \_\_\_\_\_
11. \_\_\_\_\_
12. \_\_\_\_\_