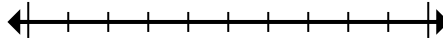




Marquez l'emplacement (approximatif) sur la droite numérique, puis résolvez.

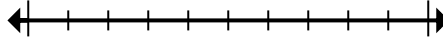
Réponses

1) Round 60 393 636 to the nearest hundred thousand.



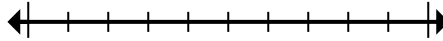
1. _____

2) Round 94 001 to the nearest ten thousand.



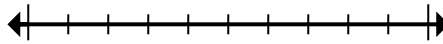
2. _____

3) Round 665 to the nearest hundred.



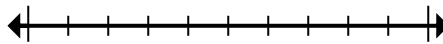
3. _____

4) Round 257 to the nearest hundred.



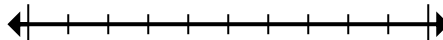
4. _____

5) Round 888 081 to the nearest ten thousand.



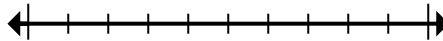
5. _____

6) Round 2 138 to the nearest thousand.



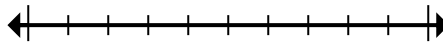
6. _____

7) Round 3 390 to the nearest thousand.



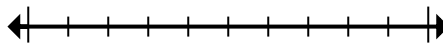
7. _____

8) Round 8 542 890 to the nearest ten thousand.



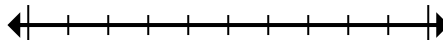
8. _____

9) Round 515 011 to the nearest hundred thousand.



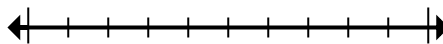
9. _____

10) Round 962 363 to the nearest hundred.



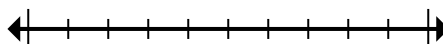
10. _____

11) Round 656 429 to the nearest hundred thousand.



11. _____

12) Round 87 606 to the nearest ten thousand.



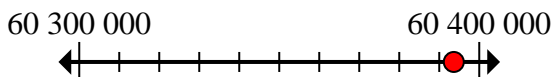
12. _____



Marquez l'emplacement (approximatif) sur la droite numérique, puis résolvez.

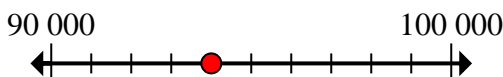
Réponses

1) Round 60 393 636 to the nearest hundred thousand.



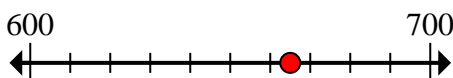
1. 60 400 000

2) Round 94 001 to the nearest ten thousand.



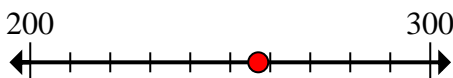
2. 90 000

3) Round 665 to the nearest hundred.



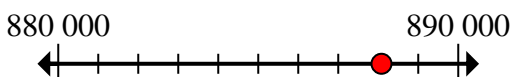
3. 700

4) Round 257 to the nearest hundred.



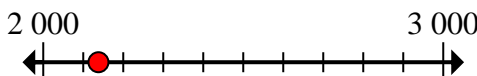
4. 300

5) Round 888 081 to the nearest ten thousand.



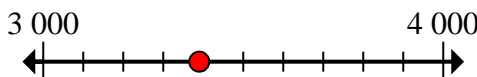
5. 890 000

6) Round 2 138 to the nearest thousand.



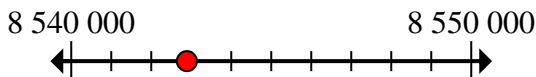
6. 2 000

7) Round 3 390 to the nearest thousand.



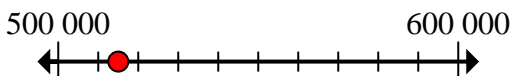
7. 3 000

8) Round 8 542 890 to the nearest ten thousand.



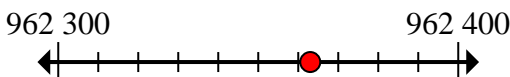
8. 8 540 000

9) Round 515 011 to the nearest hundred thousand.



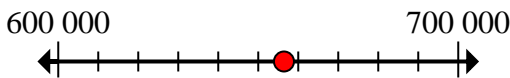
9. 500 000

10) Round 962 363 to the nearest hundred.



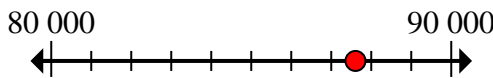
10. 962 400

11) Round 656 429 to the nearest hundred thousand.



11. 700 000

12) Round 87 606 to the nearest ten thousand.



12. 90 000

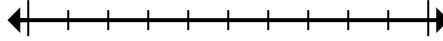


Marquez l'emplacement (approximatif) sur la droite numérique, puis résolvez.

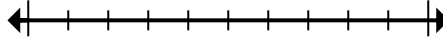
Réponses

2 000	60 400 000	700	90 000
90 000	700 000	3 000	8 540 000
962 400	300	500 000	890 000

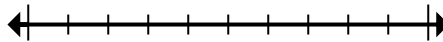
1) Round 60 393 636 to the nearest hundred thousand.



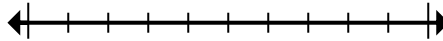
2) Round 94 001 to the nearest ten thousand.



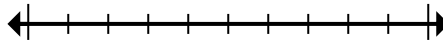
3) Round 665 to the nearest hundred.



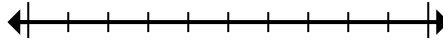
4) Round 257 to the nearest hundred.



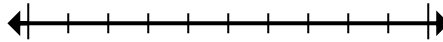
5) Round 888 081 to the nearest ten thousand.



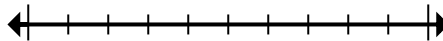
6) Round 2 138 to the nearest thousand.



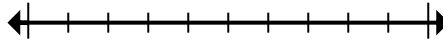
7) Round 3 390 to the nearest thousand.



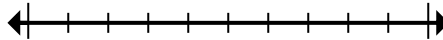
8) Round 8 542 890 to the nearest ten thousand.



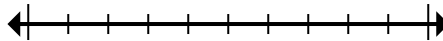
9) Round 515 011 to the nearest hundred thousand.



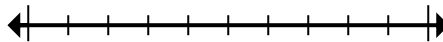
10) Round 962 363 to the nearest hundred.



11) Round 656 429 to the nearest hundred thousand.



12) Round 87 606 to the nearest ten thousand.



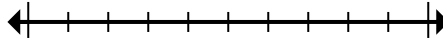
1. _____
2. _____
3. _____
4. _____
5. _____
6. _____
7. _____
8. _____
9. _____
10. _____
11. _____
12. _____



Marquez l'emplacement (approximatif) sur la droite numérique, puis résolvez.

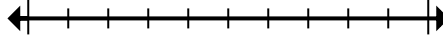
Réponses

1) Round 41 495 881 to the nearest hundred thousand.



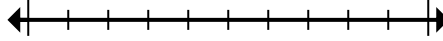
1. _____

2) Round 42 268 to the nearest hundred.



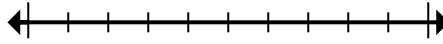
2. _____

3) Round 62 956 to the nearest ten thousand.



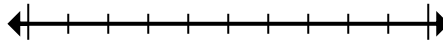
3. _____

4) Round 793 025 to the nearest thousand.



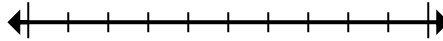
4. _____

5) Round 6 486 to the nearest thousand.



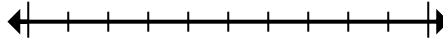
5. _____

6) Round 946 794 to the nearest ten thousand.



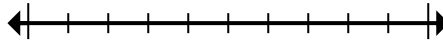
6. _____

7) Round 56 647 to the nearest hundred.



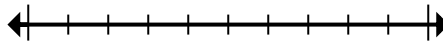
7. _____

8) Round 493 to the nearest hundred.



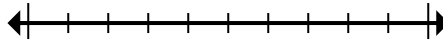
8. _____

9) Round 937 248 to the nearest hundred thousand.



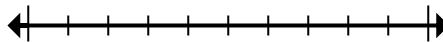
9. _____

10) Round 8 994 to the nearest thousand.



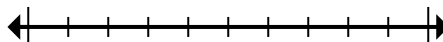
10. _____

11) Round 81 576 640 to the nearest hundred thousand.



11. _____

12) Round 824 415 to the nearest thousand.



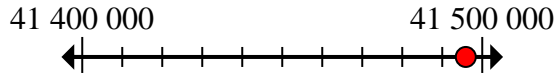
12. _____



Marquez l'emplacement (approximatif) sur la droite numérique, puis résolvez.

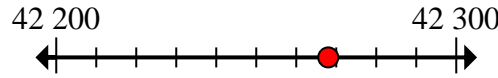
Réponses

1) Round 41 495 881 to the nearest hundred thousand.



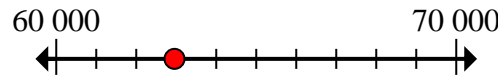
1. 41 500 000

2) Round 42 268 to the nearest hundred.



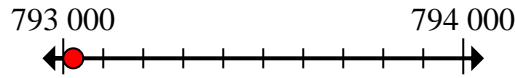
2. 42 300

3) Round 62 956 to the nearest ten thousand.



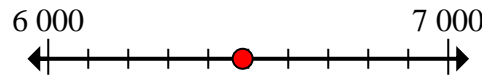
3. 60 000

4) Round 793 025 to the nearest thousand.



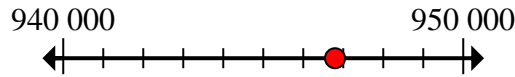
4. 793 000

5) Round 6 486 to the nearest thousand.



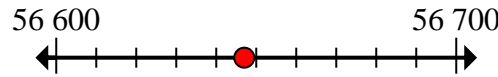
5. 6 000

6) Round 946 794 to the nearest ten thousand.



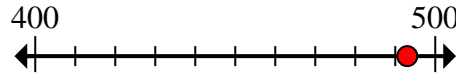
6. 950 000

7) Round 56 647 to the nearest hundred.



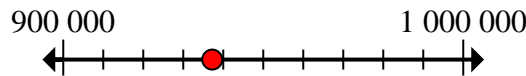
7. 56 600

8) Round 493 to the nearest hundred.



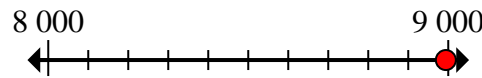
8. 500

9) Round 937 248 to the nearest hundred thousand.



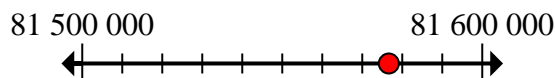
9. 900 000

10) Round 8 994 to the nearest thousand.



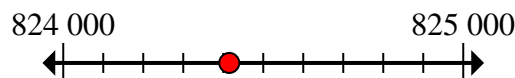
10. 9 000

11) Round 81 576 640 to the nearest hundred thousand.



11. 81 600 000

12) Round 824 415 to the nearest thousand.



12. 824 000

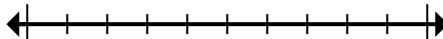


Marquez l'emplacement (approximatif) sur la droite numérique, puis résolvez.

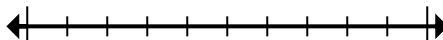
900 000	56 600	81 600 000	9 000
6 000	500	793 000	60 000
824 000	41 500 000	950 000	42 300

Réponses

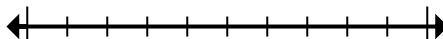
1) Round 41 495 881 to the nearest hundred thousand.



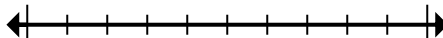
2) Round 42 268 to the nearest hundred.



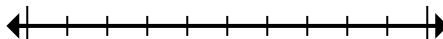
3) Round 62 956 to the nearest ten thousand.



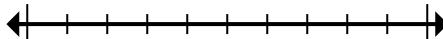
4) Round 793 025 to the nearest thousand.



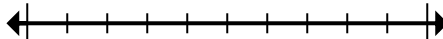
5) Round 6 486 to the nearest thousand.



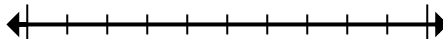
6) Round 946 794 to the nearest ten thousand.



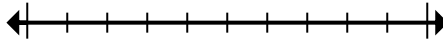
7) Round 56 647 to the nearest hundred.



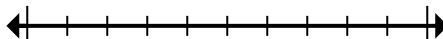
8) Round 493 to the nearest hundred.



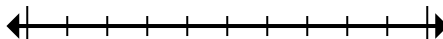
9) Round 937 248 to the nearest hundred thousand.



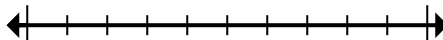
10) Round 8 994 to the nearest thousand.



11) Round 81 576 640 to the nearest hundred thousand.



12) Round 824 415 to the nearest thousand.



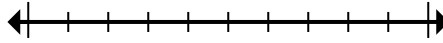
1. _____
2. _____
3. _____
4. _____
5. _____
6. _____
7. _____
8. _____
9. _____
10. _____
11. _____
12. _____



Marquez l'emplacement (approximatif) sur la droite numérique, puis résolvez.

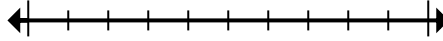
Réponses

1) Round 52 817 to the nearest ten thousand.



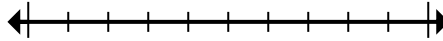
1. _____

2) Round 820 860 to the nearest hundred.



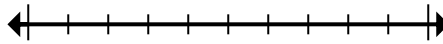
2. _____

3) Round 666 641 to the nearest ten thousand.



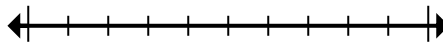
3. _____

4) Round 9 506 to the nearest thousand.



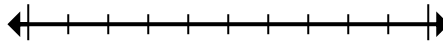
4. _____

5) Round 453 975 to the nearest hundred thousand.



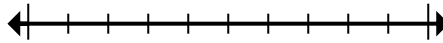
5. _____

6) Round 534 644 to the nearest hundred thousand.



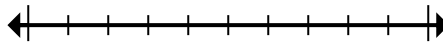
6. _____

7) Round 40 673 282 to the nearest hundred thousand.



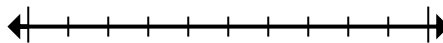
7. _____

8) Round 126 324 to the nearest ten thousand.



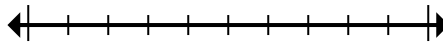
8. _____

9) Round 950 to the nearest hundred.



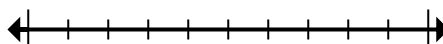
9. _____

10) Round 728 779 to the nearest thousand.



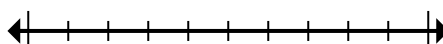
10. _____

11) Round 82 189 to the nearest ten thousand.



11. _____

12) Round 681 152 to the nearest thousand.



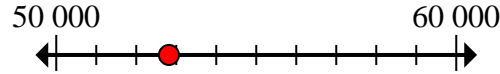
12. _____



Marquez l'emplacement (approximatif) sur la droite numérique, puis résolvez.

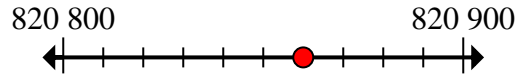
Réponses

1) Round 52 817 to the nearest ten thousand.



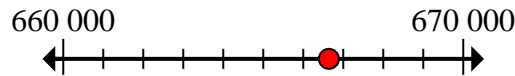
1. 50 000

2) Round 820 860 to the nearest hundred.



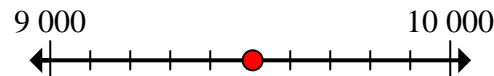
2. 820 900

3) Round 666 641 to the nearest ten thousand.



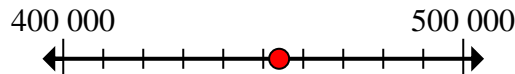
3. 670 000

4) Round 9 506 to the nearest thousand.



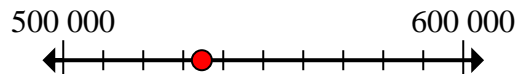
4. 10 000

5) Round 453 975 to the nearest hundred thousand.



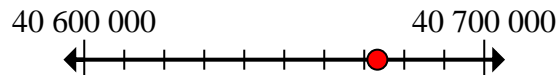
5. 500 000

6) Round 534 644 to the nearest hundred thousand.



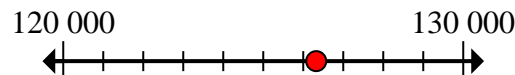
6. 500 000

7) Round 40 673 282 to the nearest hundred thousand.



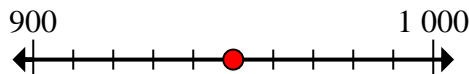
7. 40 700 000

8) Round 126 324 to the nearest ten thousand.



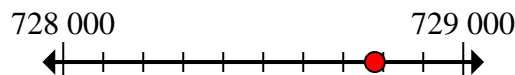
8. 130 000

9) Round 950 to the nearest hundred.



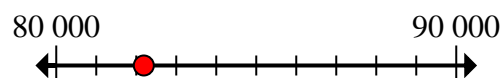
9. 1 000

10) Round 728 779 to the nearest thousand.



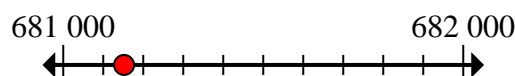
10. 729 000

11) Round 82 189 to the nearest ten thousand.



11. 80 000

12) Round 681 152 to the nearest thousand.



12. 681 000

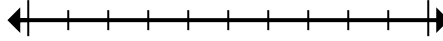


Marquez l'emplacement (approximatif) sur la droite numérique, puis résolvez.

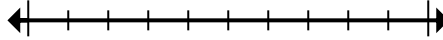
Réponses

670 000	80 000	681 000	729 000
500 000	130 000	50 000	10 000
40 700 000	500 000	1 000	820 900

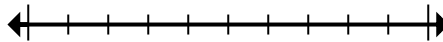
1) Round 52 817 to the nearest ten thousand.



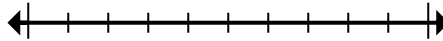
2) Round 820 860 to the nearest hundred.



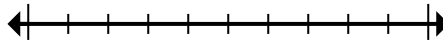
3) Round 666 641 to the nearest ten thousand.



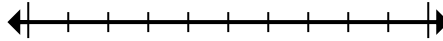
4) Round 9 506 to the nearest thousand.



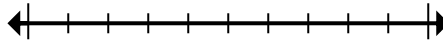
5) Round 453 975 to the nearest hundred thousand.



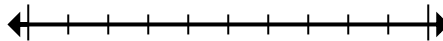
6) Round 534 644 to the nearest hundred thousand.



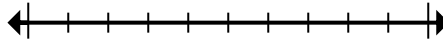
7) Round 40 673 282 to the nearest hundred thousand.



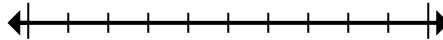
8) Round 126 324 to the nearest ten thousand.



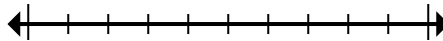
9) Round 950 to the nearest hundred.



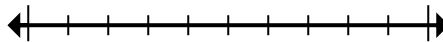
10) Round 728 779 to the nearest thousand.



11) Round 82 189 to the nearest ten thousand.



12) Round 681 152 to the nearest thousand.



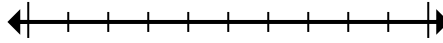
1. _____
2. _____
3. _____
4. _____
5. _____
6. _____
7. _____
8. _____
9. _____
10. _____
11. _____
12. _____



Marquez l'emplacement (approximatif) sur la droite numérique, puis résolvez.

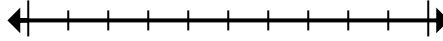
Réponses

1) Round 1 241 to the nearest thousand.



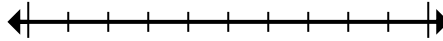
1. _____

2) Round 768 to the nearest hundred.



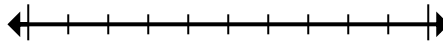
2. _____

3) Round 318 652 to the nearest hundred.



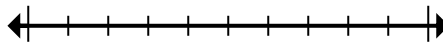
3. _____

4) Round 5 553 802 to the nearest thousand.



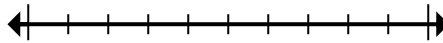
4. _____

5) Round 447 430 to the nearest hundred thousand.



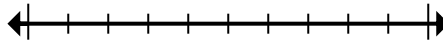
5. _____

6) Round 619 618 to the nearest ten thousand.



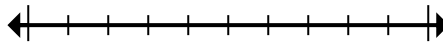
6. _____

7) Round 59 257 to the nearest thousand.



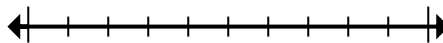
7. _____

8) Round 2 862 338 to the nearest ten thousand.



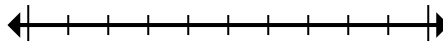
8. _____

9) Round 39 911 169 to the nearest hundred thousand.



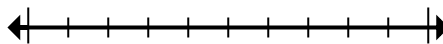
9. _____

10) Round 404 to the nearest hundred.



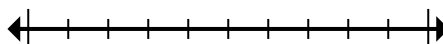
10. _____

11) Round 76 673 to the nearest ten thousand.



11. _____

12) Round 4 894 to the nearest thousand.



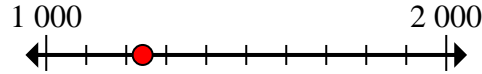
12. _____



Marquez l'emplacement (approximatif) sur la droite numérique, puis résolvez.

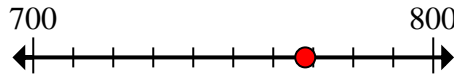
Réponses

1) Round 1 241 to the nearest thousand.



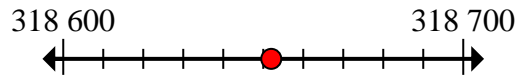
1. 1 000

2) Round 768 to the nearest hundred.



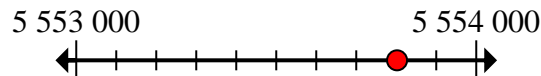
2. 800

3) Round 318 652 to the nearest hundred.



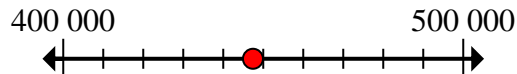
3. 318 700

4) Round 5 553 802 to the nearest thousand.



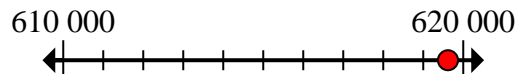
4. 5 554 000

5) Round 447 430 to the nearest hundred thousand.



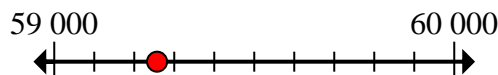
5. 400 000

6) Round 619 618 to the nearest ten thousand.



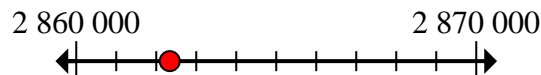
6. 620 000

7) Round 59 257 to the nearest thousand.



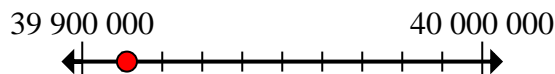
7. 59 000

8) Round 2 862 338 to the nearest ten thousand.



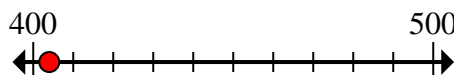
8. 2 860 000

9) Round 39 911 169 to the nearest hundred thousand.




9. 39 900 000

10) Round 404 to the nearest hundred.



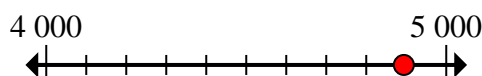
10. 400

11) Round 76 673 to the nearest ten thousand.



11. 80 000

12) Round 4 894 to the nearest thousand.



12. 5 000

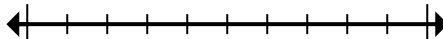


Marquez l'emplacement (approximatif) sur la droite numérique, puis résolvez.

800	2 860 000	620 000	39 900 000
59 000	80 000	400 000	400
5 554 000	1 000	318 700	5 000

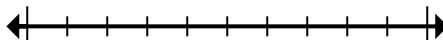
Réponses

1) Round 1 241 to the nearest thousand.



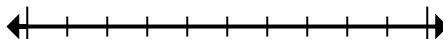
1. _____

2) Round 768 to the nearest hundred.



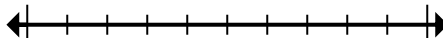
2. _____

3) Round 318 652 to the nearest hundred.



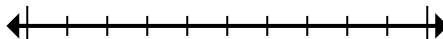
3. _____

4) Round 5 553 802 to the nearest thousand.



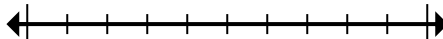
4. _____

5) Round 447 430 to the nearest hundred thousand.



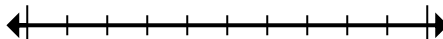
5. _____

6) Round 619 618 to the nearest ten thousand.



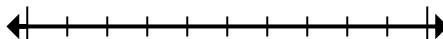
6. _____

7) Round 59 257 to the nearest thousand.



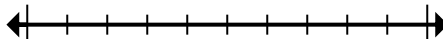
7. _____

8) Round 2 862 338 to the nearest ten thousand.



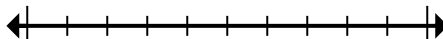
8. _____

9) Round 39 911 169 to the nearest hundred thousand.



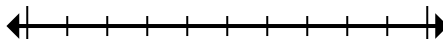
9. _____

10) Round 404 to the nearest hundred.



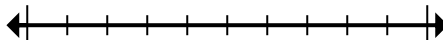
10. _____

11) Round 76 673 to the nearest ten thousand.



11. _____

12) Round 4 894 to the nearest thousand.



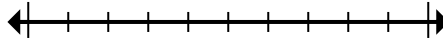
12. _____



Marquez l'emplacement (approximatif) sur la droite numérique, puis résolvez.

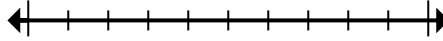
Réponses

1) Round 45 381 768 to the nearest hundred thousand.



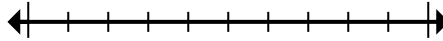
1. _____

2) Round 79 869 to the nearest ten thousand.



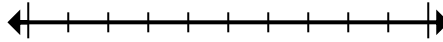
2. _____

3) Round 101 525 to the nearest ten thousand.



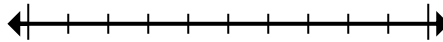
3. _____

4) Round 37 018 to the nearest thousand.



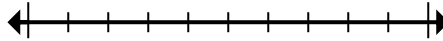
4. _____

5) Round 4 376 to the nearest thousand.



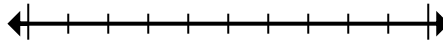
5. _____

6) Round 360 946 to the nearest thousand.



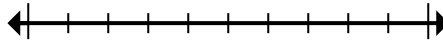
6. _____

7) Round 9 545 950 to the nearest hundred.



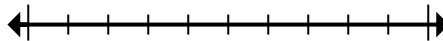
7. _____

8) Round 49 898 085 to the nearest hundred thousand.



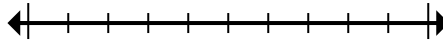
8. _____

9) Round 1 552 to the nearest thousand.



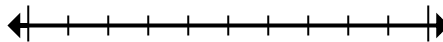
9. _____

10) Round 57 392 to the nearest ten thousand.



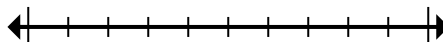
10. _____

11) Round 544 862 to the nearest hundred thousand.



11. _____

12) Round 3 268 593 to the nearest hundred.



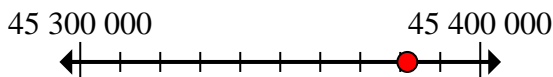
12. _____



Marquez l'emplacement (approximatif) sur la droite numérique, puis résolvez.

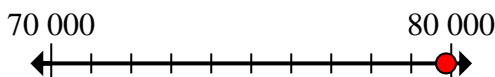
Réponses

1) Round 45 381 768 to the nearest hundred thousand.



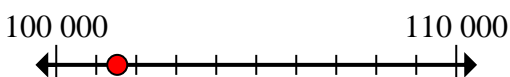
1. 45 400 000

2) Round 79 869 to the nearest ten thousand.



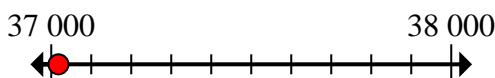
2. 80 000

3) Round 101 525 to the nearest ten thousand.



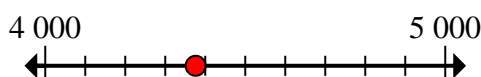
3. 100 000

4) Round 37 018 to the nearest thousand.



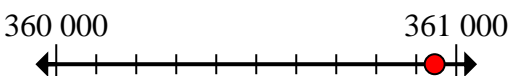
4. 37 000

5) Round 4 376 to the nearest thousand.



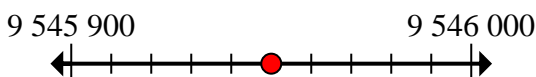
5. 4 000

6) Round 360 946 to the nearest thousand.



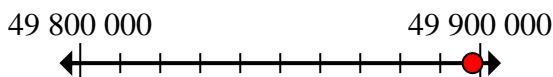
6. 361 000

7) Round 9 545 950 to the nearest hundred.



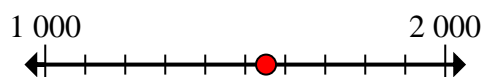
7. 9 546 000

8) Round 49 898 085 to the nearest hundred thousand.



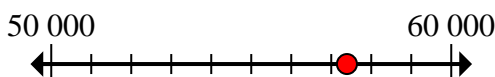
8. 49 900 000

9) Round 1 552 to the nearest thousand.



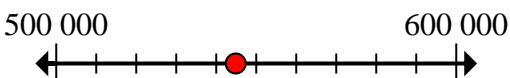
9. 2 000

10) Round 57 392 to the nearest ten thousand.



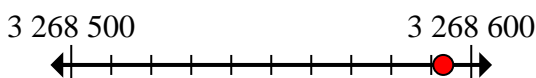
10. 60 000

11) Round 544 862 to the nearest hundred thousand.



11. 500 000

12) Round 3 268 593 to the nearest hundred.



12. 3 268 600

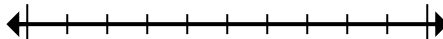


Marquez l'emplacement (approximatif) sur la droite numérique, puis résolvez.

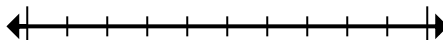
Réponses

60 000	4 000	3 268 600	2 000
49 900 000	9 546 000	361 000	45 400 000
37 000	500 000	100 000	80 000

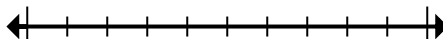
1) Round 45 381 768 to the nearest hundred thousand.



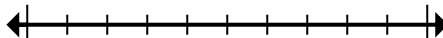
2) Round 79 869 to the nearest ten thousand.



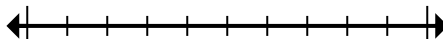
3) Round 101 525 to the nearest ten thousand.



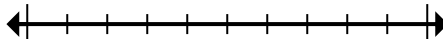
4) Round 37 018 to the nearest thousand.



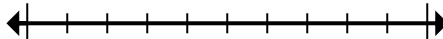
5) Round 4 376 to the nearest thousand.



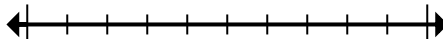
6) Round 360 946 to the nearest thousand.



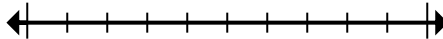
7) Round 9 545 950 to the nearest hundred.



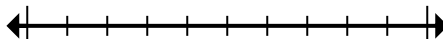
8) Round 49 898 085 to the nearest hundred thousand.



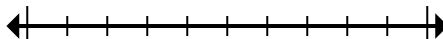
9) Round 1 552 to the nearest thousand.



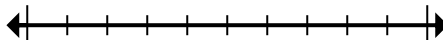
10) Round 57 392 to the nearest ten thousand.



11) Round 544 862 to the nearest hundred thousand.



12) Round 3 268 593 to the nearest hundred.



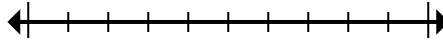
1. _____
2. _____
3. _____
4. _____
5. _____
6. _____
7. _____
8. _____
9. _____
10. _____
11. _____
12. _____



Marquez l'emplacement (approximatif) sur la droite numérique, puis résolvez.

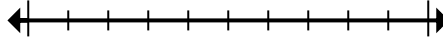
Réponses

1) Round 636 to the nearest hundred.



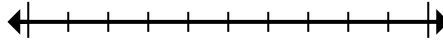
1. _____

2) Round 460 239 to the nearest hundred thousand.



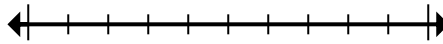
2. _____

3) Round 43 360 678 to the nearest hundred thousand.



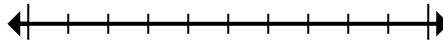
3. _____

4) Round 525 to the nearest hundred.



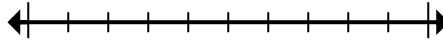
4. _____

5) Round 520 968 to the nearest hundred thousand.



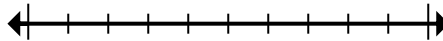
5. _____

6) Round 242 983 to the nearest ten thousand.



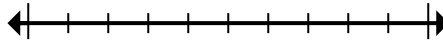
6. _____

7) Round 6 825 849 to the nearest hundred.



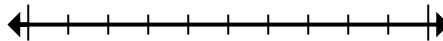
7. _____

8) Round 4 314 to the nearest thousand.



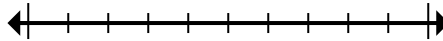
8. _____

9) Round 97 589 to the nearest ten thousand.



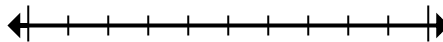
9. _____

10) Round 6 435 to the nearest thousand.



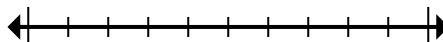
10. _____

11) Round 29 689 529 to the nearest hundred thousand.



11. _____

12) Round 4 801 539 to the nearest ten thousand.



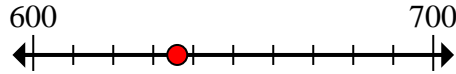
12. _____



Marquez l'emplacement (approximatif) sur la droite numérique, puis résolvez.

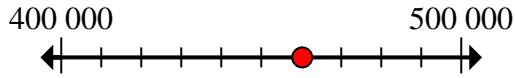
Réponses

1) Round 636 to the nearest hundred.



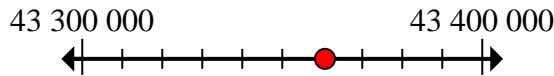
1. 600

2) Round 460 239 to the nearest hundred thousand.



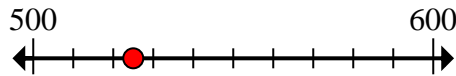
2. 500 000

3) Round 43 360 678 to the nearest hundred thousand.



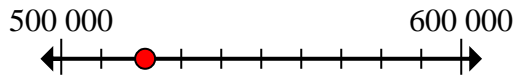
3. 43 400 000

4) Round 525 to the nearest hundred.



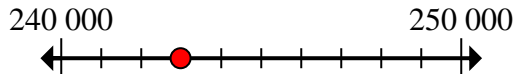
4. 500

5) Round 520 968 to the nearest hundred thousand.



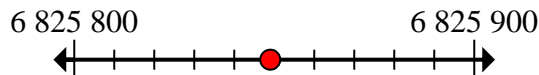
5. 500 000

6) Round 242 983 to the nearest ten thousand.



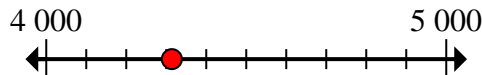
6. 240 000

7) Round 6 825 849 to the nearest hundred.



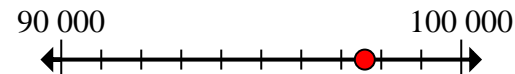
7. 6 825 800

8) Round 4 314 to the nearest thousand.



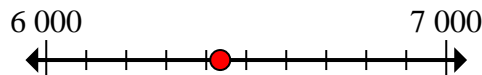
8. 4 000

9) Round 97 589 to the nearest ten thousand.



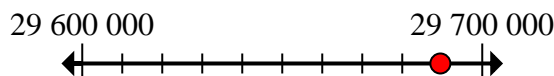
9. 100 000

10) Round 6 435 to the nearest thousand.



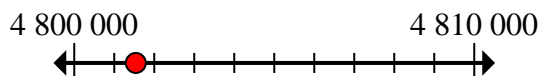
10. 6 000

11) Round 29 689 529 to the nearest hundred thousand.



11. 29 700 000

12) Round 4 801 539 to the nearest ten thousand.



12. 4 800 000

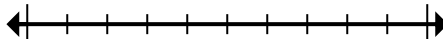


Marquez l'emplacement (approximatif) sur la droite numérique, puis résolvez.

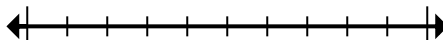
Réponses

4 800 000	43 400 000	600	500
29 700 000	6 825 800	240 000	500 000
4 000	100 000	500 000	6 000

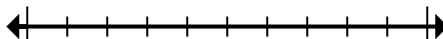
1) Round 636 to the nearest hundred.



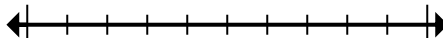
2) Round 460 239 to the nearest hundred thousand.



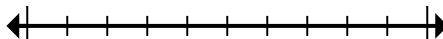
3) Round 43 360 678 to the nearest hundred thousand.



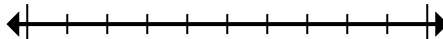
4) Round 525 to the nearest hundred.



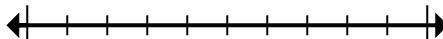
5) Round 520 968 to the nearest hundred thousand.



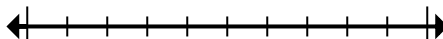
6) Round 242 983 to the nearest ten thousand.



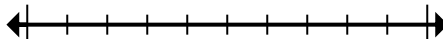
7) Round 6 825 849 to the nearest hundred.



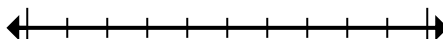
8) Round 4 314 to the nearest thousand.



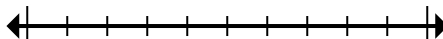
9) Round 97 589 to the nearest ten thousand.



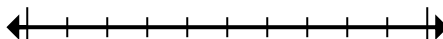
10) Round 6 435 to the nearest thousand.



11) Round 29 689 529 to the nearest hundred thousand.



12) Round 4 801 539 to the nearest ten thousand.



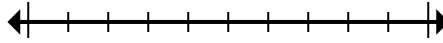
1. _____
2. _____
3. _____
4. _____
5. _____
6. _____
7. _____
8. _____
9. _____
10. _____
11. _____
12. _____



Marquez l'emplacement (approximatif) sur la droite numérique, puis résolvez.

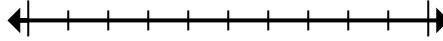
Réponses

1) Round 808 484 to the nearest ten thousand.



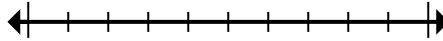
1. _____

2) Round 832 264 to the nearest thousand.



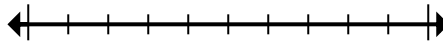
2. _____

3) Round 10 622 917 to the nearest hundred thousand.



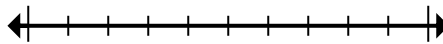
3. _____

4) Round 7 142 074 to the nearest ten thousand.



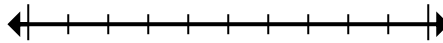
4. _____

5) Round 72 745 to the nearest ten thousand.



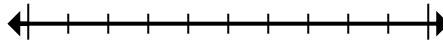
5. _____

6) Round 314 to the nearest hundred.



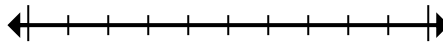
6. _____

7) Round 2 720 to the nearest thousand.



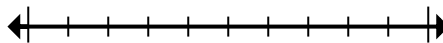
7. _____

8) Round 80 764 to the nearest ten thousand.



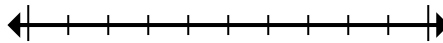
8. _____

9) Round 633 653 to the nearest thousand.



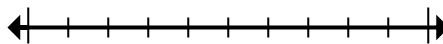
9. _____

10) Round 151 433 to the nearest hundred.



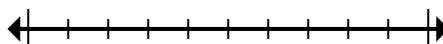
10. _____

11) Round 2 415 to the nearest hundred.



11. _____

12) Round 42 974 961 to the nearest hundred thousand.



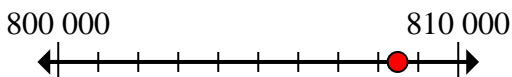
12. _____



Marquez l'emplacement (approximatif) sur la droite numérique, puis résolvez.

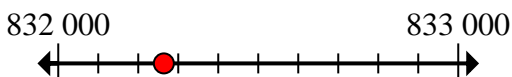
Réponses

1) Round 808 484 to the nearest ten thousand.



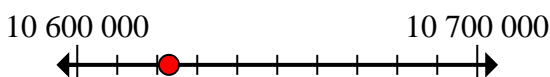
1. 810 000

2) Round 832 264 to the nearest thousand.



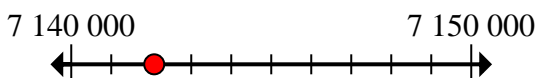
2. 832 000

3) Round 10 622 917 to the nearest hundred thousand.



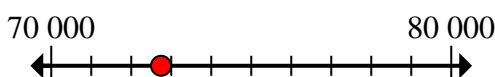
3. 10 600 000

4) Round 7 142 074 to the nearest ten thousand.



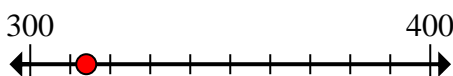
4. 7 140 000

5) Round 72 745 to the nearest ten thousand.



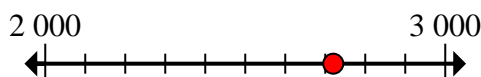
5. 70 000

6) Round 314 to the nearest hundred.



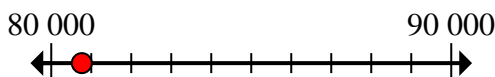
6. 300

7) Round 2 720 to the nearest thousand.



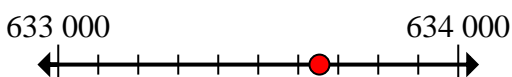
7. 3 000

8) Round 80 764 to the nearest ten thousand.



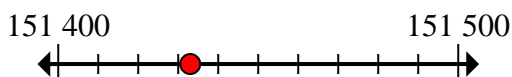
8. 80 000

9) Round 633 653 to the nearest thousand.



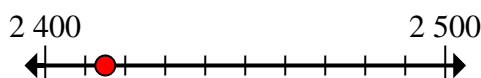
9. 634 000

10) Round 151 433 to the nearest hundred.



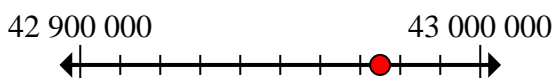
10. 151 400

11) Round 2 415 to the nearest hundred.



11. 2 400

12) Round 42 974 961 to the nearest hundred thousand.



12. 43 000 000

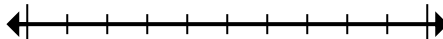


Marquez l'emplacement (approximatif) sur la droite numérique, puis résolvez.

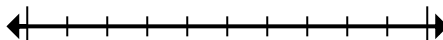
3 000	151 400	832 000	10 600 000
70 000	80 000	7 140 000	300
634 000	810 000	2 400	43 000 000

Réponses

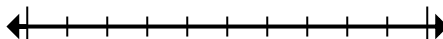
1) Round 808 484 to the nearest ten thousand.



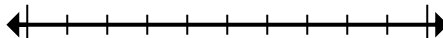
2) Round 832 264 to the nearest thousand.



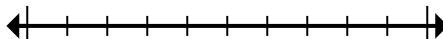
3) Round 10 622 917 to the nearest hundred thousand.



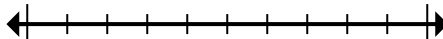
4) Round 7 142 074 to the nearest ten thousand.



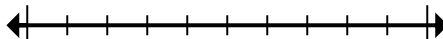
5) Round 72 745 to the nearest ten thousand.



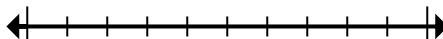
6) Round 314 to the nearest hundred.



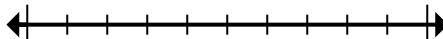
7) Round 2 720 to the nearest thousand.



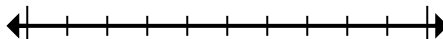
8) Round 80 764 to the nearest ten thousand.



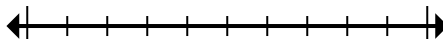
9) Round 633 653 to the nearest thousand.



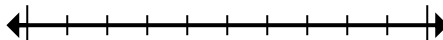
10) Round 151 433 to the nearest hundred.



11) Round 2 415 to the nearest hundred.



12) Round 42 974 961 to the nearest hundred thousand.



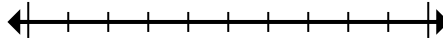
1. _____
2. _____
3. _____
4. _____
5. _____
6. _____
7. _____
8. _____
9. _____
10. _____
11. _____
12. _____



Marquez l'emplacement (approximatif) sur la droite numérique, puis résolvez.

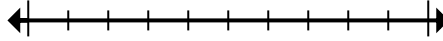
Réponses

1) Round 1 491 to the nearest thousand.



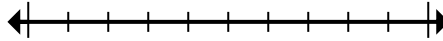
1. _____

2) Round 867 315 to the nearest hundred.



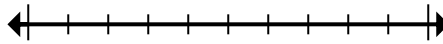
2. _____

3) Round 524 to the nearest hundred.



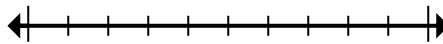
3. _____

4) Round 698 to the nearest hundred.



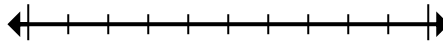
4. _____

5) Round 4 646 919 to the nearest hundred.



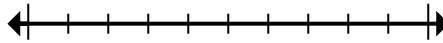
5. _____

6) Round 6 630 803 to the nearest thousand.



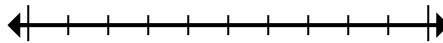
6. _____

7) Round 4 407 993 to the nearest hundred thousand.



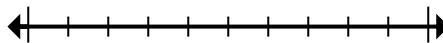
7. _____

8) Round 83 368 to the nearest ten thousand.



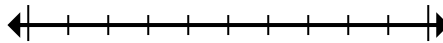
8. _____

9) Round 5 665 526 to the nearest ten thousand.



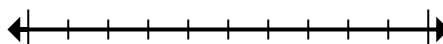
9. _____

10) Round 1 299 to the nearest thousand.



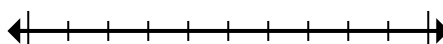
10. _____

11) Round 448 098 to the nearest hundred thousand.



11. _____

12) Round 178 876 to the nearest ten thousand.



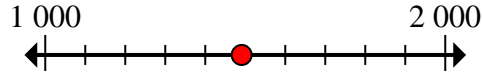
12. _____



Marquez l'emplacement (approximatif) sur la droite numérique, puis résolvez.

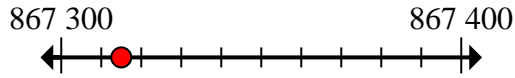
Réponses

1) Round 1 491 to the nearest thousand.



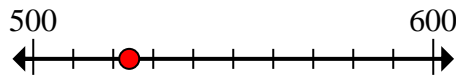
1. 1 000

2) Round 867 315 to the nearest hundred.



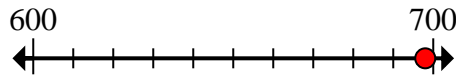
2. 867 300

3) Round 524 to the nearest hundred.



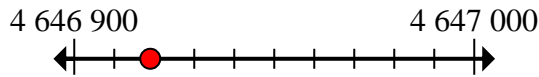
3. 500

4) Round 698 to the nearest hundred.



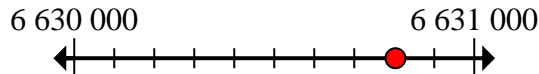
4. 700

5) Round 4 646 919 to the nearest hundred.



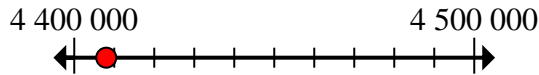
5. 4 646 900

6) Round 6 630 803 to the nearest thousand.



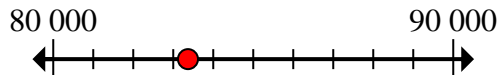
6. 6 631 000

7) Round 4 407 993 to the nearest hundred thousand.



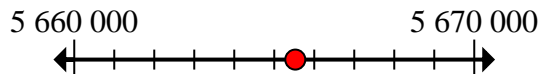
7. 4 400 000

8) Round 83 368 to the nearest ten thousand.



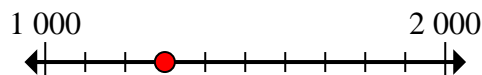
8. 80 000

9) Round 5 665 526 to the nearest ten thousand.



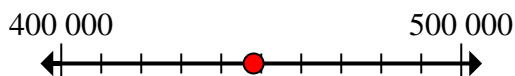
9. 5 670 000

10) Round 1 299 to the nearest thousand.



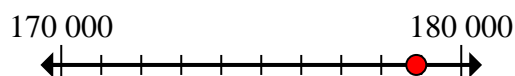
10. 1 000

11) Round 448 098 to the nearest hundred thousand.



11. 400 000

12) Round 178 876 to the nearest ten thousand.



12. 180 000

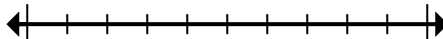


Marquez l'emplacement (approximatif) sur la droite numérique, puis résolvez.

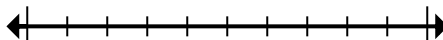
Réponses

867 300	500	4 400 000	80 000
1 000	4 646 900	700	400 000
180 000	1 000	5 670 000	6 631 000

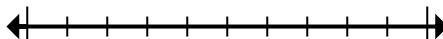
1) Round 1 491 to the nearest thousand.



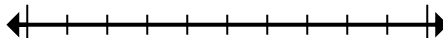
2) Round 867 315 to the nearest hundred.



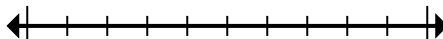
3) Round 524 to the nearest hundred.



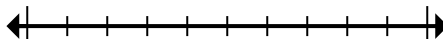
4) Round 698 to the nearest hundred.



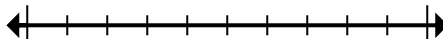
5) Round 4 646 919 to the nearest hundred.



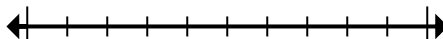
6) Round 6 630 803 to the nearest thousand.



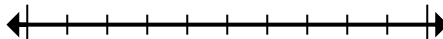
7) Round 4 407 993 to the nearest hundred thousand.



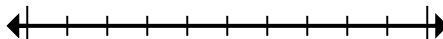
8) Round 83 368 to the nearest ten thousand.



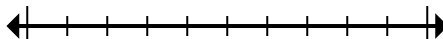
9) Round 5 665 526 to the nearest ten thousand.



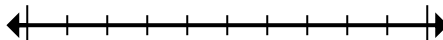
10) Round 1 299 to the nearest thousand.



11) Round 448 098 to the nearest hundred thousand.



12) Round 178 876 to the nearest ten thousand.



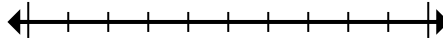
1. _____
2. _____
3. _____
4. _____
5. _____
6. _____
7. _____
8. _____
9. _____
10. _____
11. _____
12. _____



Marquez l'emplacement (approximatif) sur la droite numérique, puis résolvez.

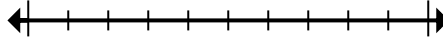
Réponses

1) Round 14 905 to the nearest hundred.



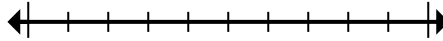
1. _____

2) Round 680 180 to the nearest hundred thousand.



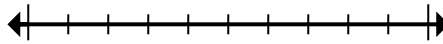
2. _____

3) Round 992 162 to the nearest hundred thousand.



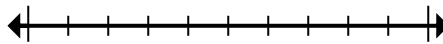
3. _____

4) Round 48 422 834 to the nearest hundred thousand.



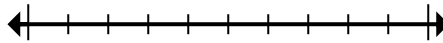
4. _____

5) Round 729 327 to the nearest thousand.



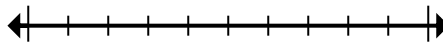
5. _____

6) Round 42 660 to the nearest thousand.



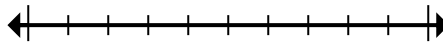
6. _____

7) Round 72 083 942 to the nearest hundred thousand.



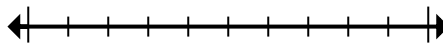
7. _____

8) Round 361 to the nearest hundred.



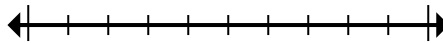
8. _____

9) Round 79 043 to the nearest ten thousand.



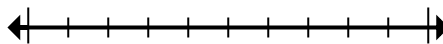
9. _____

10) Round 344 to the nearest hundred.



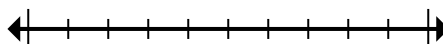
10. _____

11) Round 1 179 to the nearest thousand.



11. _____

12) Round 359 639 to the nearest hundred.



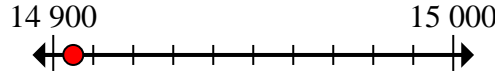
12. _____



Marquez l'emplacement (approximatif) sur la droite numérique, puis résolvez.

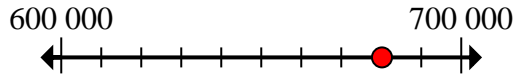
Réponses

1) Round 14 905 to the nearest hundred.



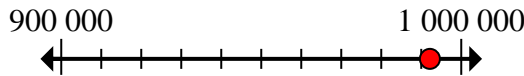
1. 14 900

2) Round 680 180 to the nearest hundred thousand.



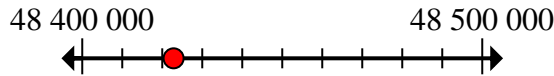
2. 700 000

3) Round 992 162 to the nearest hundred thousand.



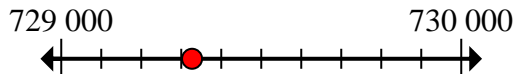
3. 1 000 000

4) Round 48 422 834 to the nearest hundred thousand.



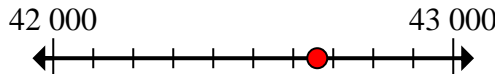
4. 48 400 000

5) Round 729 327 to the nearest thousand.



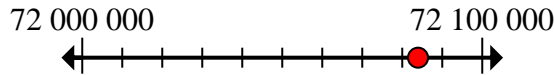
5. 729 000

6) Round 42 660 to the nearest thousand.



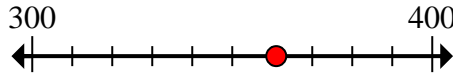
6. 43 000

7) Round 72 083 942 to the nearest hundred thousand.



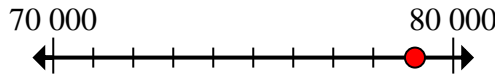
7. 72 100 000

8) Round 361 to the nearest hundred.



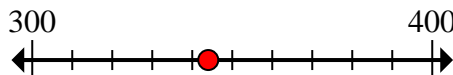
8. 400

9) Round 79 043 to the nearest ten thousand.



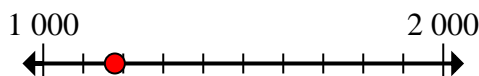
9. 80 000

10) Round 344 to the nearest hundred.



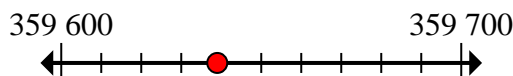
10. 300

11) Round 1 179 to the nearest thousand.



11. 1 000

12) Round 359 639 to the nearest hundred.



12. 359 600

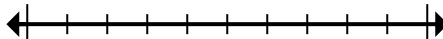


Marquez l'emplacement (approximatif) sur la droite numérique, puis résolvez.

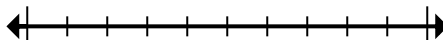
Réponses

1 000	1 000 000	43 000	700 000
729 000	72 100 000	359 600	300
14 900	48 400 000	400	80 000

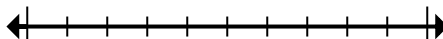
1) Round 14 905 to the nearest hundred.



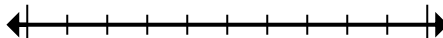
2) Round 680 180 to the nearest hundred thousand.



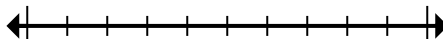
3) Round 992 162 to the nearest hundred thousand.



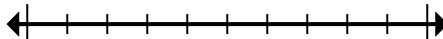
4) Round 48 422 834 to the nearest hundred thousand.



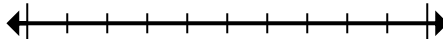
5) Round 729 327 to the nearest thousand.



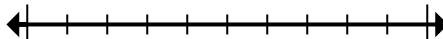
6) Round 42 660 to the nearest thousand.



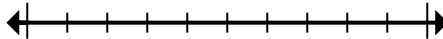
7) Round 72 083 942 to the nearest hundred thousand.



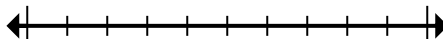
8) Round 361 to the nearest hundred.



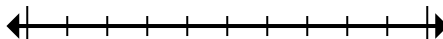
9) Round 79 043 to the nearest ten thousand.



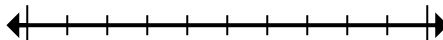
10) Round 344 to the nearest hundred.



11) Round 1 179 to the nearest thousand.



12) Round 359 639 to the nearest hundred.



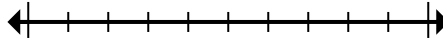
1. _____
2. _____
3. _____
4. _____
5. _____
6. _____
7. _____
8. _____
9. _____
10. _____
11. _____
12. _____



Marquez l'emplacement (approximatif) sur la droite numérique, puis résolvez.

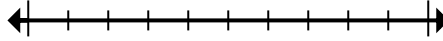
Réponses

1) Round 828 to the nearest hundred.



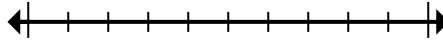
1. _____

2) Round 9 053 to the nearest thousand.



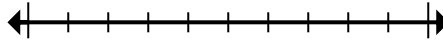
2. _____

3) Round 11 215 to the nearest thousand.



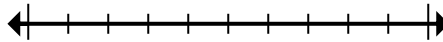
3. _____

4) Round 241 077 to the nearest ten thousand.



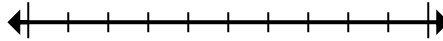
4. _____

5) Round 342 549 to the nearest hundred.



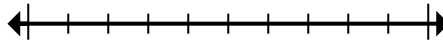
5. _____

6) Round 996 949 to the nearest ten thousand.



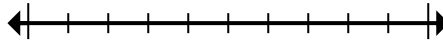
6. _____

7) Round 7 577 963 to the nearest thousand.



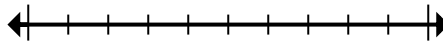
7. _____

8) Round 17 487 to the nearest ten thousand.



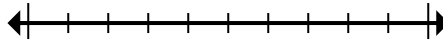
8. _____

9) Round 7 921 410 to the nearest hundred thousand.



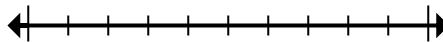
9. _____

10) Round 153 244 to the nearest hundred thousand.



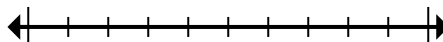
10. _____

11) Round 308 648 to the nearest hundred thousand.



11. _____

12) Round 673 to the nearest hundred.



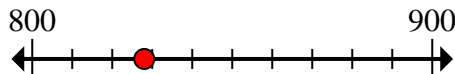
12. _____



Marquez l'emplacement (approximatif) sur la droite numérique, puis résolvez.

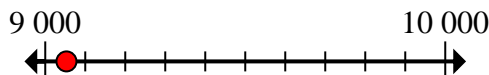
Réponses

1) Round 828 to the nearest hundred.



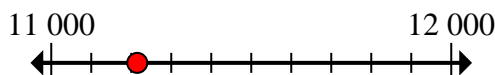
1. 800

2) Round 9 053 to the nearest thousand.



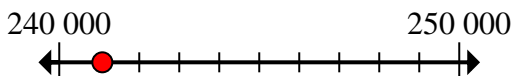
2. 9 000

3) Round 11 215 to the nearest thousand.



3. 11 000

4) Round 241 077 to the nearest ten thousand.



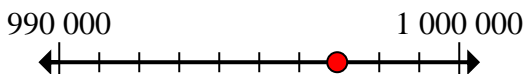
4. 240 000

5) Round 342 549 to the nearest hundred.



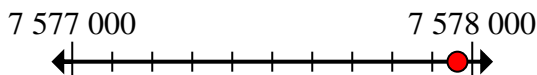
5. 342 500

6) Round 996 949 to the nearest ten thousand.



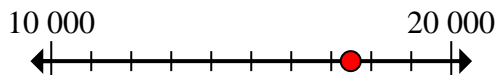
6. 1 000 000

7) Round 7 577 963 to the nearest thousand.



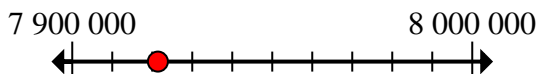
7. 7 578 000

8) Round 17 487 to the nearest ten thousand.



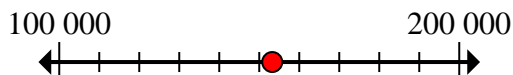
8. 20 000

9) Round 7 921 410 to the nearest hundred thousand.



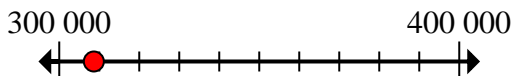
9. 7 900 000

10) Round 153 244 to the nearest hundred thousand.



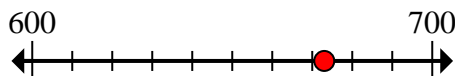
10. 200 000

11) Round 308 648 to the nearest hundred thousand.



11. 300 000

12) Round 673 to the nearest hundred.



12. 700

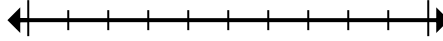


Marquez l'emplacement (approximatif) sur la droite numérique, puis résolvez.

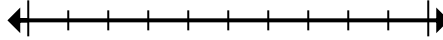
342 500	1 000 000	11 000	9 000
240 000	700	200 000	300 000
20 000	7 900 000	7 578 000	800

Réponses

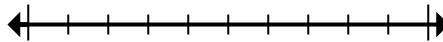
1) Round 828 to the nearest hundred.



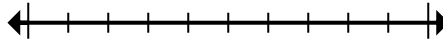
2) Round 9 053 to the nearest thousand.



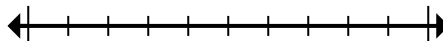
3) Round 11 215 to the nearest thousand.



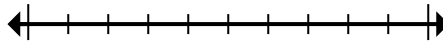
4) Round 241 077 to the nearest ten thousand.



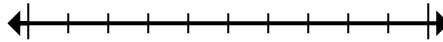
5) Round 342 549 to the nearest hundred.



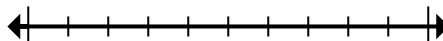
6) Round 996 949 to the nearest ten thousand.



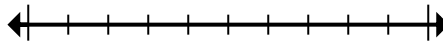
7) Round 7 577 963 to the nearest thousand.



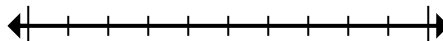
8) Round 17 487 to the nearest ten thousand.



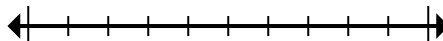
9) Round 7 921 410 to the nearest hundred thousand.



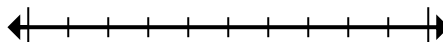
10) Round 153 244 to the nearest hundred thousand.



11) Round 308 648 to the nearest hundred thousand.



12) Round 673 to the nearest hundred.



1. _____
2. _____
3. _____
4. _____
5. _____
6. _____
7. _____
8. _____
9. _____
10. _____
11. _____
12. _____