



Marquez l'emplacement (approximatif) sur la droite numérique, puis résolvez.

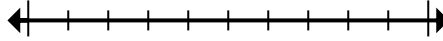
Réponses

1) Round 1 481 to the nearest thousand.



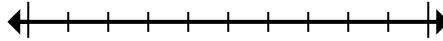
1. _____

2) Round 6 626 027 to the nearest hundred thousand.



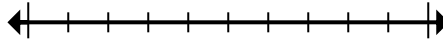
2. _____

3) Round 32 174 to the nearest ten thousand.



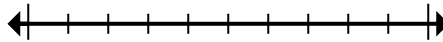
3. _____

4) Round 939 to the nearest hundred.



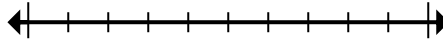
4. _____

5) Round 919 to the nearest hundred.



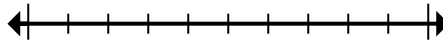
5. _____

6) Round 74 374 to the nearest ten thousand.



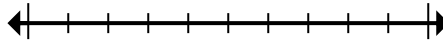
6. _____

7) Round 343 775 to the nearest hundred thousand.



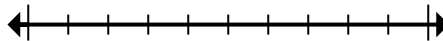
7. _____

8) Round 2 436 014 to the nearest hundred.



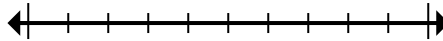
8. _____

9) Round 401 706 to the nearest thousand.



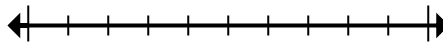
9. _____

10) Round 676 006 to the nearest hundred thousand.



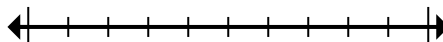
10. _____

11) Round 19 226 189 to the nearest hundred thousand.



11. _____

12) Round 3 920 938 to the nearest thousand.



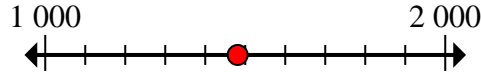
12. _____



Marquez l'emplacement (approximatif) sur la droite numérique, puis résolvez.

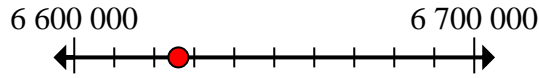
Réponses

1) Round 1 481 to the nearest thousand.



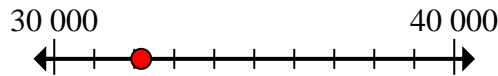
1. 1 000

2) Round 6 626 027 to the nearest hundred thousand.



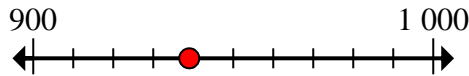
2. 6 600 000

3) Round 32 174 to the nearest ten thousand.



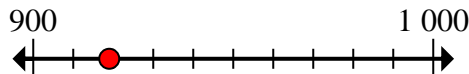
3. 30 000

4) Round 939 to the nearest hundred.



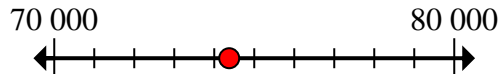
4. 900

5) Round 919 to the nearest hundred.



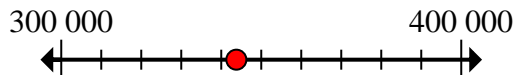
5. 900

6) Round 74 374 to the nearest ten thousand.



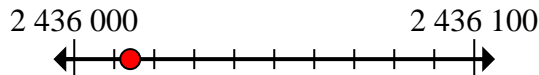
6. 70 000

7) Round 343 775 to the nearest hundred thousand.



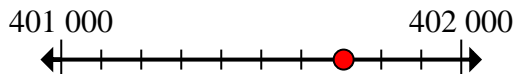
7. 300 000

8) Round 2 436 014 to the nearest hundred.



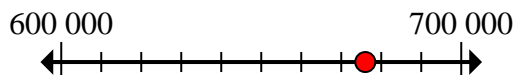
8. 2 436 000

9) Round 401 706 to the nearest thousand.



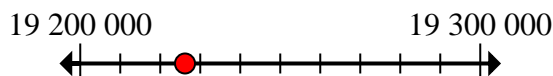
9. 402 000

10) Round 676 006 to the nearest hundred thousand.



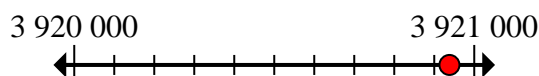
10. 700 000

11) Round 19 226 189 to the nearest hundred thousand.



11. 19 200 000

12) Round 3 920 938 to the nearest thousand.



12. 3 921 000

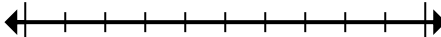


Marquez l'emplacement (approximatif) sur la droite numérique, puis résolvez.

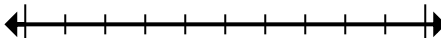
3 921 000	900	900	6 600 000
300 000	700 000	2 436 000	19 200 000
30 000	402 000	70 000	1 000

Réponses

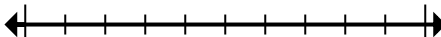
1) Round 1 481 to the nearest thousand.



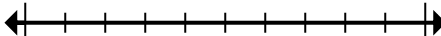
2) Round 6 626 027 to the nearest hundred thousand.



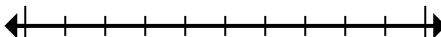
3) Round 32 174 to the nearest ten thousand.



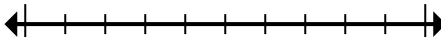
4) Round 939 to the nearest hundred.



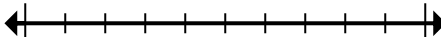
5) Round 919 to the nearest hundred.



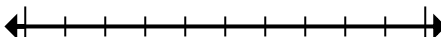
6) Round 74 374 to the nearest ten thousand.



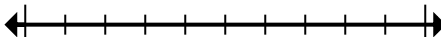
7) Round 343 775 to the nearest hundred thousand.



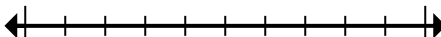
8) Round 2 436 014 to the nearest hundred.



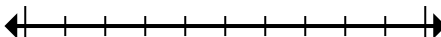
9) Round 401 706 to the nearest thousand.



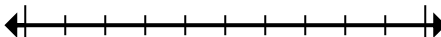
10) Round 676 006 to the nearest hundred thousand.



11) Round 19 226 189 to the nearest hundred thousand.



12) Round 3 920 938 to the nearest thousand.



1. _____
2. _____
3. _____
4. _____
5. _____
6. _____
7. _____
8. _____
9. _____
10. _____
11. _____
12. _____