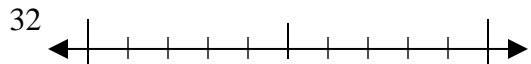




Utilisez la droite numérique associée pour arrondir à la dizaine.

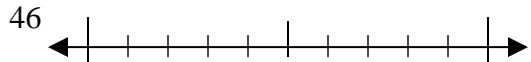
Réponses

Ex)



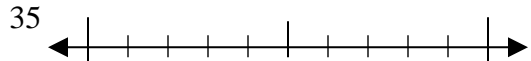
Ex. 30

1)



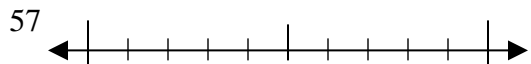
1. _____

2)



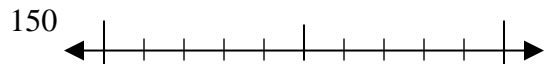
2. _____

3)



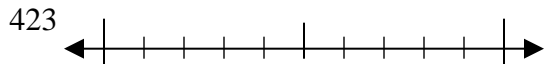
3. _____

4)



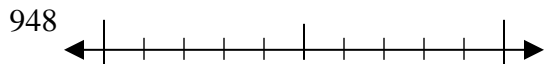
4. _____

5)



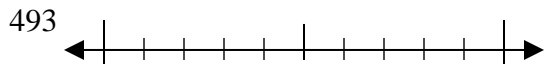
5. _____

6)



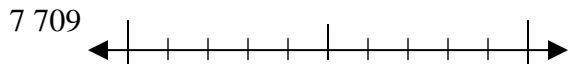
6. _____

7)



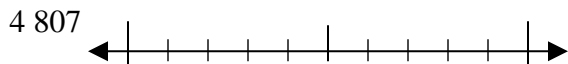
7. _____

8)



8. _____

9)

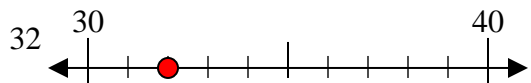


9. _____

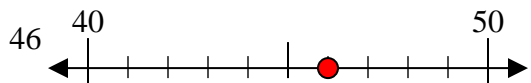


Utilisez la droite numérique associée pour arrondir à la dizaine.

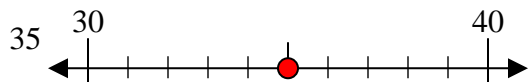
Ex)



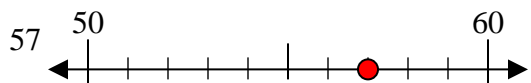
1)



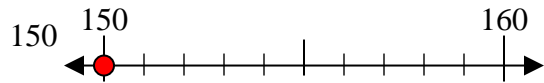
2)



3)



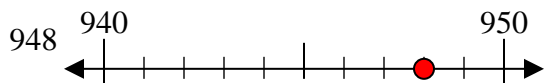
4)



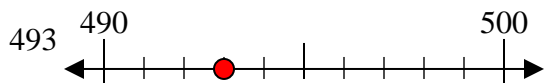
5)



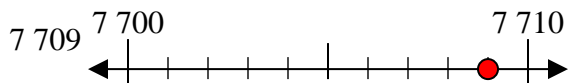
6)



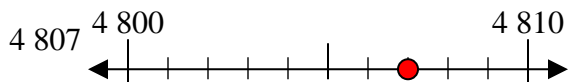
7)



8)



9)



Réponses

Ex. 30

1. 50

2. 40

3. 60

4. 150

5. 420

6. 950

7. 490

8. 7710

9. 4810