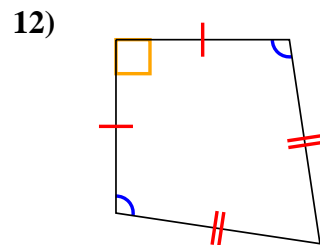
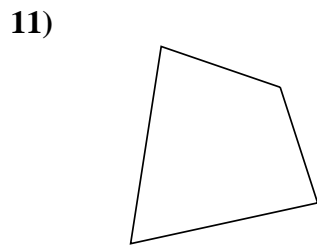
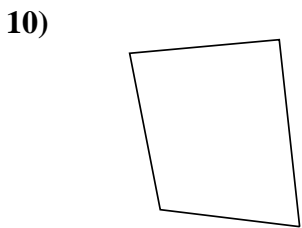
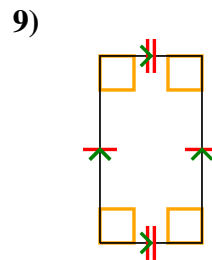
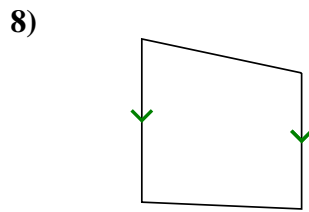
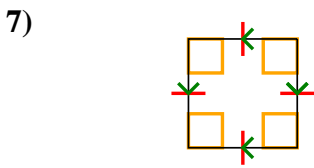
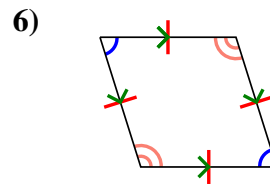
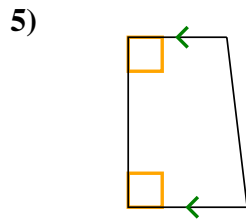
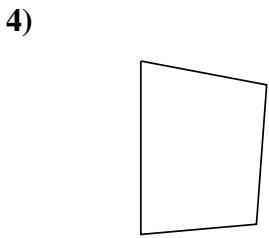
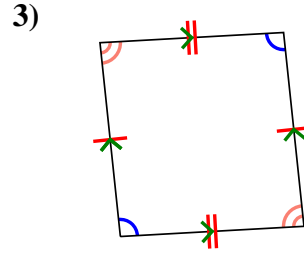
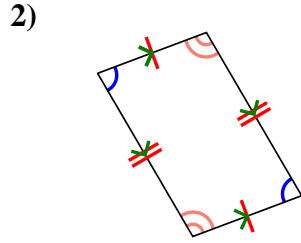
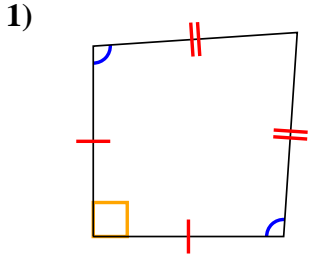




Déterminer si la forme représentée est un Q uadrilatéral, K ite, T rapezoid, P arallelogram, R h ombus, R ectangle ou S Quare (peut être plus d'un).

**Réponses**

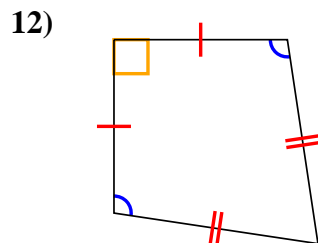
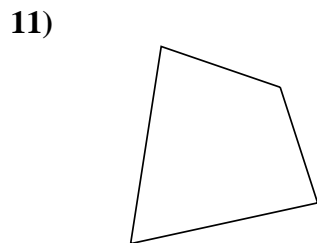
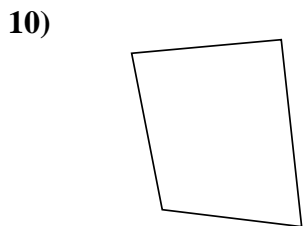
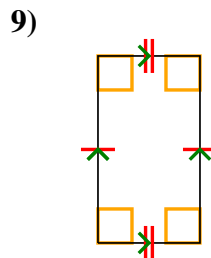
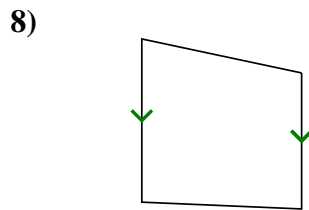
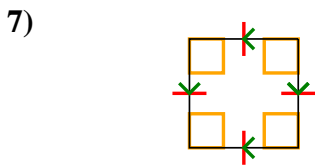
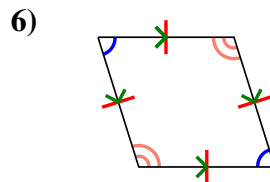
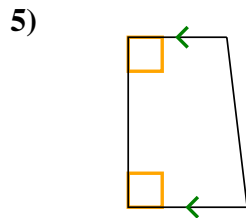
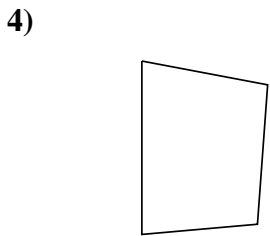
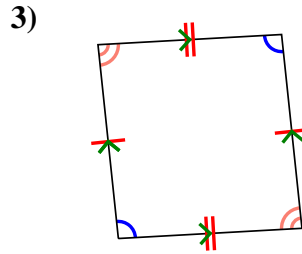
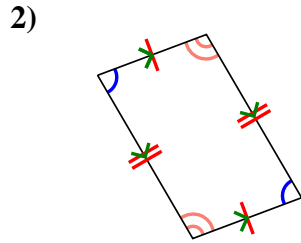
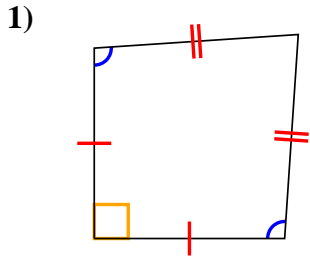


- 1. \_\_\_\_\_
- 2. \_\_\_\_\_
- 3. \_\_\_\_\_
- 4. \_\_\_\_\_
- 5. \_\_\_\_\_
- 6. \_\_\_\_\_
- 7. \_\_\_\_\_
- 8. \_\_\_\_\_
- 9. \_\_\_\_\_
- 10. \_\_\_\_\_
- 11. \_\_\_\_\_
- 12. \_\_\_\_\_



Déterminer si la forme représentée est un Q uadrilatéral, K ite, T rapezoid, P arallelogram, R h ombus, R ectangle ou S Quare (peut être plus d'un).

**Réponses**



1. Q,K
2. Q,P
3. Q,P
4. Q
5. Q,T
6. Q,P,H
7. Q,P,H,R,S
8. Q,T
9. Q,P,R
10. Q
11. Q
12. Q,K